

Write your name here

Surname

Other names

**Pearson**  
**Edexcel GCSE**

Centre Number

--	--	--	--	--	--

Candidate Number

--	--	--	--	--	--

# Mathematics A

## Paper 1 (Non-Calculator)

**Higher Tier**

Thursday 25 May 2017 – Morning  
**Time: 1 hour 45 minutes**

Paper Reference

**1MA0/1H**

**You must have:** Ruler graduated in centimetres and millimetres, protractor, pair of compasses, pen, HB pencil, eraser. Tracing paper may be used.

Total Marks

--

### Instructions

- Use **black** ink or ball-point pen.
- **Fill in the boxes** at the top of this page with your name, centre number and candidate number.
- Answer **all** questions.
- Answer the questions in the spaces provided – *there may be more space than you need.*
- **Calculators must not be used.**



### Information

- The total mark for this paper is 100
- The marks for **each** question are shown in brackets – *use this as a guide as to how much time to spend on each question.*
- Questions labelled with an **asterisk** (\*) are ones where the quality of your written communication will be assessed.

### Advice

- Read each question carefully before you start to answer it.
- Keep an eye on the time.
- Try to answer every question.
- Check your answers if you have time at the end.

Turn over ►

P53440A

©2017 Pearson Education Ltd.

6/6/6/6/6/



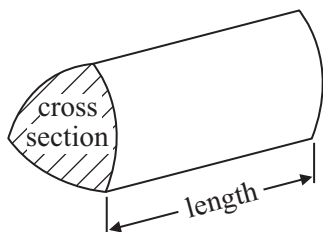
Pearson

# GCSE Mathematics 1MA0

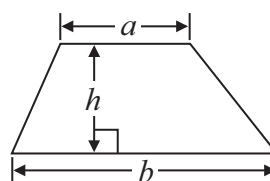
Formulae: Higher Tier

**You must not write on this formulae page.  
Anything you write on this formulae page will gain NO credit.**

**Volume of prism** = area of cross section  $\times$  length

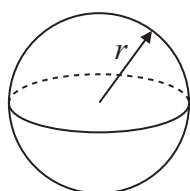


**Area of trapezium** =  $\frac{1}{2} (a + b)h$



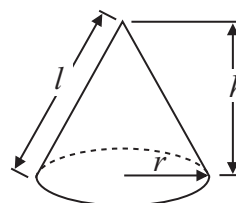
**Volume of sphere** =  $\frac{4}{3} \pi r^3$

**Surface area of sphere** =  $4\pi r^2$

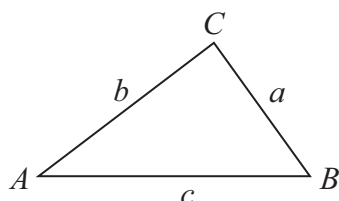


**Volume of cone** =  $\frac{1}{3} \pi r^2 h$

**Curved surface area of cone** =  $\pi r l$



**In any triangle ABC**



**The Quadratic Equation**

The solutions of  $ax^2 + bx + c = 0$   
where  $a \neq 0$ , are given by

$$x = \frac{-b \pm \sqrt{b^2 - 4ac}}{2a}$$

**Sine Rule**  $\frac{a}{\sin A} = \frac{b}{\sin B} = \frac{c}{\sin C}$

**Cosine Rule**  $a^2 = b^2 + c^2 - 2bc \cos A$

**Area of triangle** =  $\frac{1}{2} ab \sin C$

DO NOT WRITE IN THIS AREA

DO NOT WRITE IN THIS AREA

DO NOT WRITE IN THIS AREA



Answer ALL questions.

Write your answers in the spaces provided.

You must write down all stages in your working.

You must NOT use a calculator.

1 (a) Simplify  $x^7 \times x^5$

.....  
(1)

(b) Simplify  $2y \div y$

.....  
(1)

$v = 2t^2$

$t = 3$

(c) Work out the value of  $v$ .

.....  
(1)

(d) Give an example to show that, when  $n$  is a whole number,  $6n + 1$  is **not** always a prime number.

You must give your value of  $n$ .

$n =$  .....  
(1)

(Total for Question 1 is 4 marks)



\*2 Bill buys and sells laptops.

Last month Bill bought 50 laptops.  
He paid £400 for each laptop.

He sold

40 of these laptops at a profit of 30% on each laptop

10 of these laptops at a profit of 15% on each laptop

Bill's target last month was to sell all 50 laptops for a total of at least £25 000

Did Bill reach this target?

DO NOT WRITE IN THIS AREA

DO NOT WRITE IN THIS AREA

DO NOT WRITE IN THIS AREA

(Total for Question 2 is 5 marks)



DO NOT WRITE IN THIS AREA

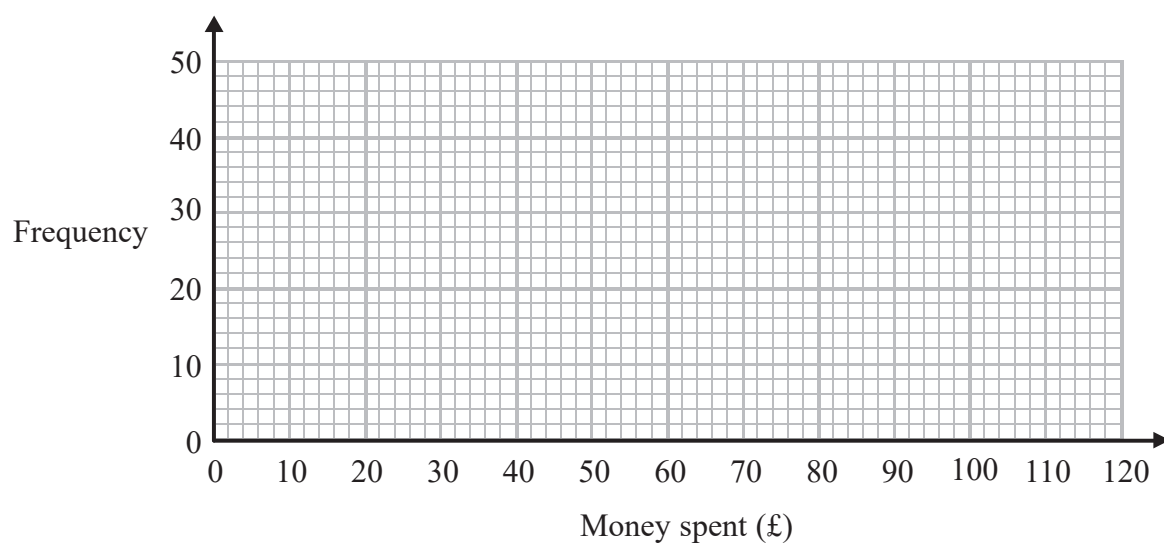
DO NOT WRITE IN THIS AREA

DO NOT WRITE IN THIS AREA

3 The table gives information about the money, £ $A$ , some people spent on an internet site one day.

Money spent (£ $A$ )	Frequency
$0 < A \leq 20$	10
$20 < A \leq 40$	15
$40 < A \leq 60$	25
$60 < A \leq 80$	40
$80 < A \leq 100$	6

(a) On the grid, draw a frequency polygon for this information.



(2)

(b) Write down the modal class interval.

.....  
(1)

(Total for Question 3 is 3 marks)



4 Solve  $4(x + 3) = 2x + 8$

$x = \dots\dots\dots$

**(Total for Question 4 is 3 marks)**

---

DO NOT WRITE IN THIS AREA

DO NOT WRITE IN THIS AREA

DO NOT WRITE IN THIS AREA



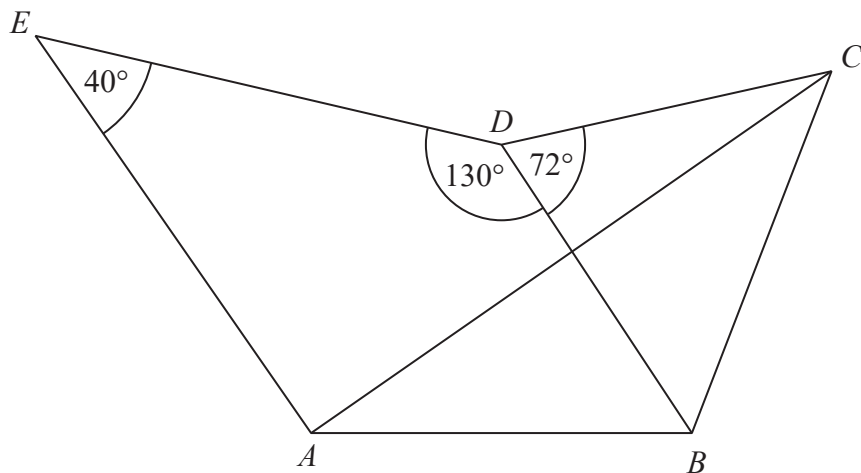
DO NOT WRITE IN THIS AREA

DO NOT WRITE IN THIS AREA

DO NOT WRITE IN THIS AREA

5 Here is a pentagon  $ABCDE$ .

Diagram **NOT** accurately drawn



$AB = BC = BD$   
 $ABDE$  is a kite.

Angle  $AED = 40^\circ$   
Angle  $EDB = 130^\circ$   
Angle  $BDC = 72^\circ$

Work out the size of angle  $ACB$ .

(Total for Question 5 is 3 marks)



- 6 Babajan makes breakfast cereal.  
She mixes nuts, raisins and oats in the ratio 3 : 2 : 5 by weight.

On Monday, Babajan uses 60 grams of nuts.

- (a) Work out the weight of raisins and the weight of oats she uses to make the breakfast cereal.

raisins .....grams

oats.....grams

(3)

On Tuesday, Babajan makes 300 grams of the breakfast cereal.

500 grams of nuts cost £8

- (b) Work out the cost of the nuts used to make 300 grams of the breakfast cereal.

£.....

(3)

(Total for Question 6 is 6 marks)





DO NOT WRITE IN THIS AREA

DO NOT WRITE IN THIS AREA

DO NOT WRITE IN THIS AREA

7 Frances grows plants in a container.  
Each of the 5 faces of the container is made of glass.

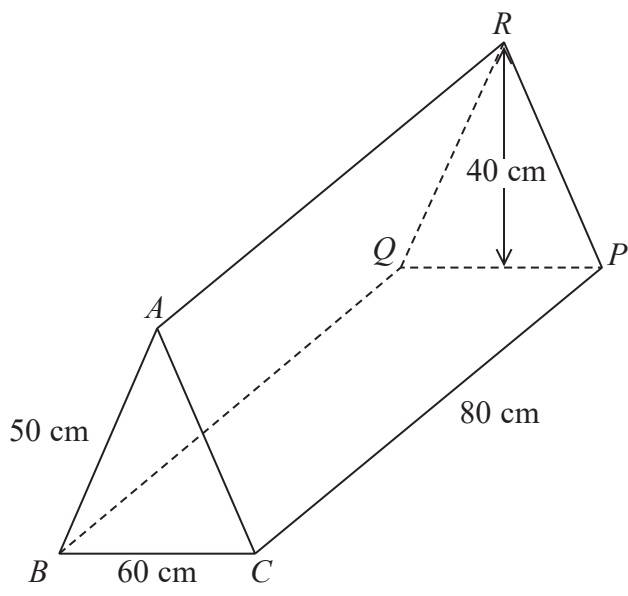


Diagram **NOT** accurately drawn

The container is in the shape of a prism.  
The cross section of the prism is an isosceles triangle with height 40 cm.

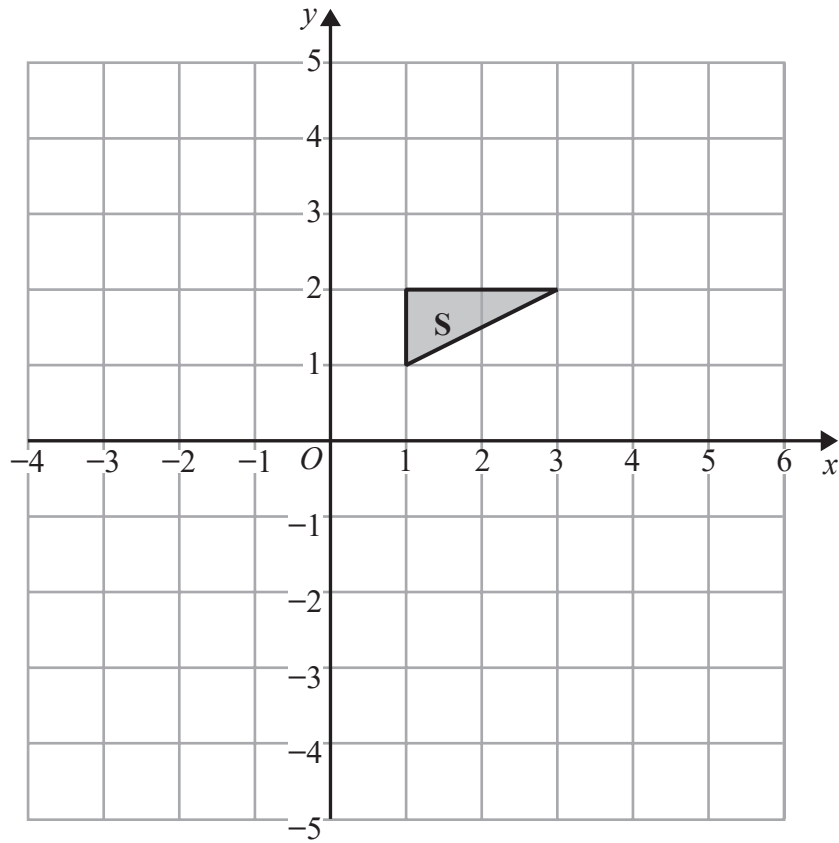
- $BC = 60 \text{ cm}$
- $AB = AC = 50 \text{ cm}$
- $CP = 80 \text{ cm}$

Work out the total area of glass needed to make the container.

.....cm<sup>2</sup>

(Total for Question 7 is 3 marks)

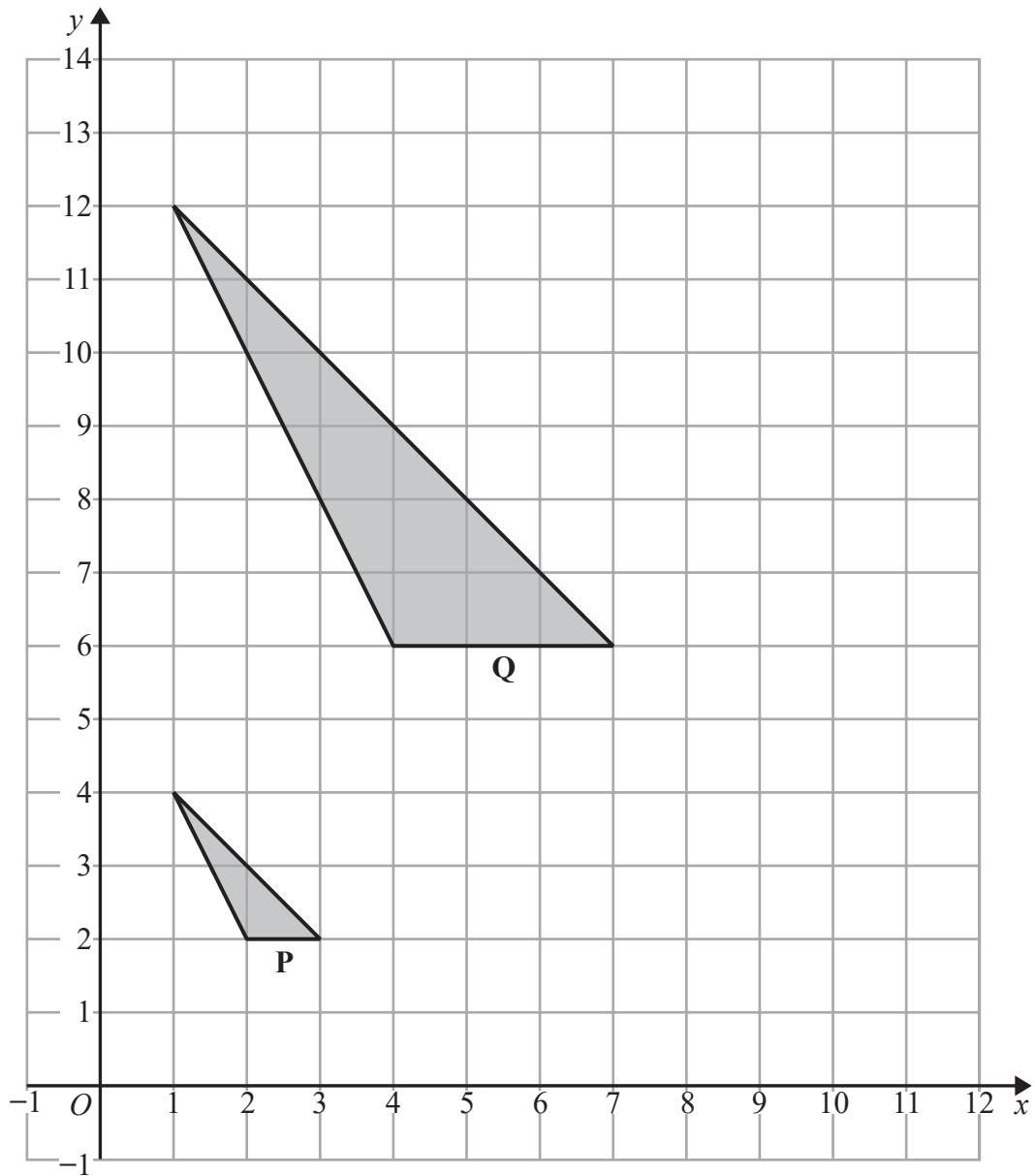




(a) On the grid, rotate shape S by  $90^\circ$  anticlockwise about the origin.

(2)





(b) Describe fully the single transformation that maps shape **P** onto shape **Q**.

(3)

(Total for Question 8 is 5 marks)



- 9 There are 5 girls, 6 boys and some adults in a room.  
Jenny selects at random one of these people.

The probability that Jenny selects a girl is  $\frac{1}{3}$

Work out the probability that Jenny selects an adult.

.....  
(Total for Question 9 is 3 marks)

- 10 Here are the first five terms of an arithmetic sequence.

2    5    8    11    14

- (a) Write down an expression, in terms of  $n$ , for the  $n$ th term of this sequence.

.....  
(2)

- (b) Is 299 a term of this sequence?  
You must give a reason for your answer.

.....  
(2)

- (c) Write down an expression, in terms of  $n$ , for the  $(n + 1)$ th term of this sequence.

.....  
(1)

(Total for Question 10 is 5 marks)



DO NOT WRITE IN THIS AREA

DO NOT WRITE IN THIS AREA

DO NOT WRITE IN THIS AREA

11  $Q$ ,  $R$  and  $S$  are points on a grid.

$Q$  is the point with coordinates  $(106, 103)$

$R$  is the point with coordinates  $(106, 105)$

$S$  is the point with coordinates  $(104, 105.5)$

$P$  and  $A$  are two other points on the grid such that

$R$  is the midpoint of  $PQ$

$S$  is the midpoint of  $PA$

Work out the coordinates of the point  $A$ .

(..... , .....)

**(Total for Question 11 is 3 marks)**



12 Sanders has a water tank for storing rainwater.

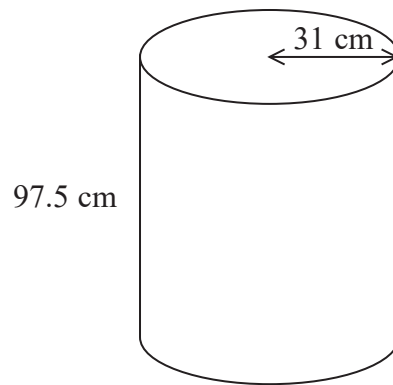


Diagram **NOT** accurately drawn

The tank is in the shape of a cylinder.  
The radius of the cylinder is 31 cm.  
The height of the cylinder is 97.5 cm.

The tank is full of water.

Work out an estimate for the volume of water in the tank.  
Give your answer in litres.  
You must show your working.

Use  $1000 \text{ cm}^3 = 1 \text{ litre}$ .

.....litres

**(Total for Question 12 is 3 marks)**

DO NOT WRITE IN THIS AREA

DO NOT WRITE IN THIS AREA

DO NOT WRITE IN THIS AREA



DO NOT WRITE IN THIS AREA

DO NOT WRITE IN THIS AREA

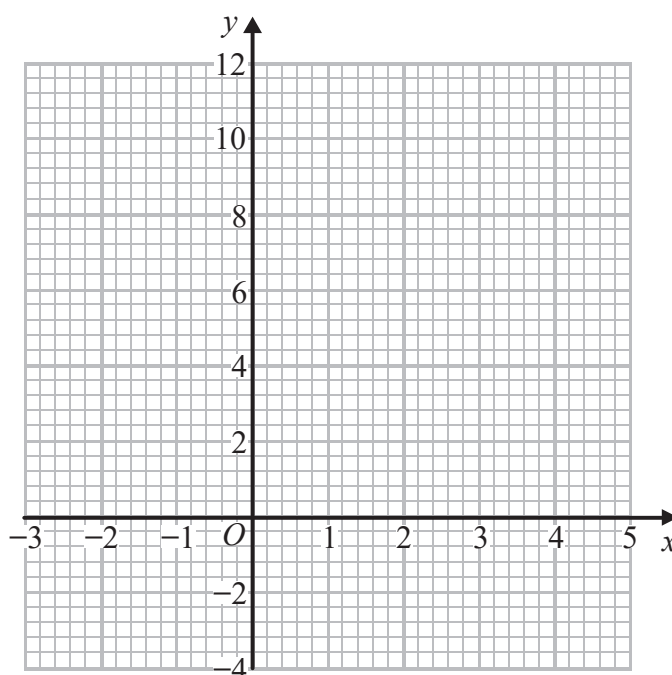
DO NOT WRITE IN THIS AREA

13 (a) Complete the table of values for  $y = x^2 - 3x + 1$

$x$	-2	-1	0	1	2	3	4
$y$	11		1	-1		1	

(2)

(b) On the grid, draw the graph of  $y = x^2 - 3x + 1$  for values of  $x$  from -2 to 4



(2)

(c) By drawing a suitable straight line on the grid, find estimates for the solutions of

$$x^2 - 3x + 1 = 3$$

.....  
(2)

(Total for Question 13 is 6 marks)



- 14 3 kg of potatoes and 4 kg of carrots have a total cost of 440p.  
4 kg of potatoes and 3 kg of carrots have a total cost of 470p.

Work out the total cost of 1 kg of potatoes and 1 kg of carrots.

.....p

(Total for Question 14 is 4 marks)

DO NOT WRITE IN THIS AREA

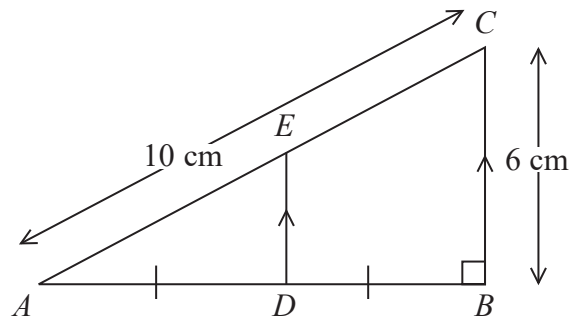
DO NOT WRITE IN THIS AREA

DO NOT WRITE IN THIS AREA





Diagram **NOT**  
accurately drawn



$ADB$  and  $AEC$  are straight lines.  
 $DE$  is parallel to  $BC$ .

Angle  $ABC = 90^\circ$

$AC = 10$  cm.

$BC = 6$  cm.

$D$  is the midpoint of  $AB$ .

Work out the area of trapezium  $BCED$ .

.....cm<sup>2</sup>

(Total for Question 15 is 4 marks)



16 The table gives information about the marks gained by some students in an exam.

Mark ( $m$ )	Frequency
$0 < m \leq 20$	40
$20 < m \leq 40$	70
$40 < m \leq 60$	60
$60 < m \leq 80$	15
$80 < m \leq 100$	10
$100 < m \leq 120$	5

(a) Complete the cumulative frequency table for this information.

Mark ( $m$ )	Cumulative frequency
$0 < m \leq 20$	
$0 < m \leq 40$	
$0 < m \leq 60$	
$0 < m \leq 80$	
$0 < m \leq 100$	
$0 < m \leq 120$	

(1)

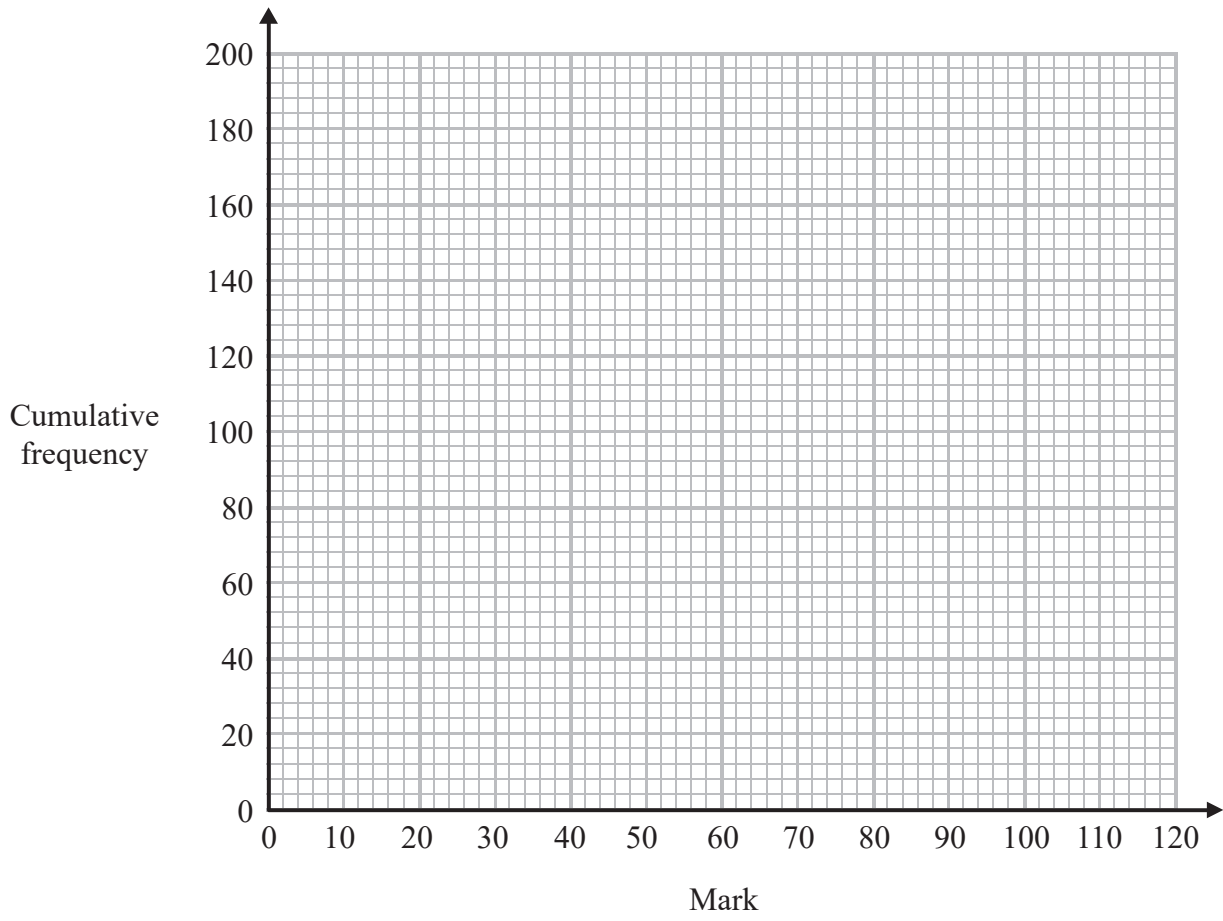
(b) On the grid, draw a cumulative frequency graph for your table.



DO NOT WRITE IN THIS AREA

DO NOT WRITE IN THIS AREA

DO NOT WRITE IN THIS AREA



(2)

(c) Use your graph to find an estimate for the number of students who gained a mark of more than 54

.....  
(2)

**(Total for Question 16 is 5 marks)**



17 Solve  $\frac{x + 1}{3} + \frac{2x + 5}{4} = 2$

$x = \dots\dots\dots$

**(Total for Question 17 is 4 marks)**

18 (a) Write 5 400 000 as a number in standard form.

$\dots\dots\dots$   
(1)

(b) Write  $3.2 \times 10^{-4}$  as an ordinary number.

$\dots\dots\dots$   
(1)

The mass of the Sun is  $2 \times 10^{30}$  kg.  
The mass of the largest known star is 315 times the mass of the Sun.

(c) Work out the mass of this star.  
Give your answer in kg in standard form.

$\dots\dots\dots$  kg  
(2)

**(Total for Question 18 is 4 marks)**



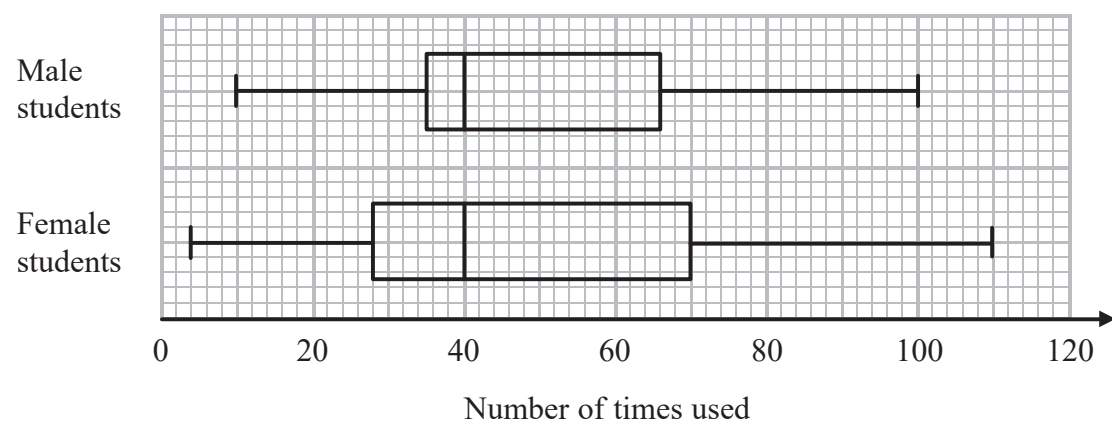
DO NOT WRITE IN THIS AREA

DO NOT WRITE IN THIS AREA

DO NOT WRITE IN THIS AREA

\*19 Some students were asked how many times they each used their mobile phones last week.

The box plots give information about the male students' answers and about the female students' answers.



Compare the two distributions represented by the box plots.

.....

.....

.....

.....

(Total for Question 19 is 3 marks)



20 (a) Simplify  $(x^{-2})^{-3}$

.....  
(1)

(b) Factorise  $2y^2 - 5y - 3$

.....  
(2)

(Total for Question 20 is 3 marks)

21  $a = \sqrt{8} + 2$

$$b = \sqrt{8} - 2$$

$$T = a^2 - b^2$$

Work out the value of  $T$ .

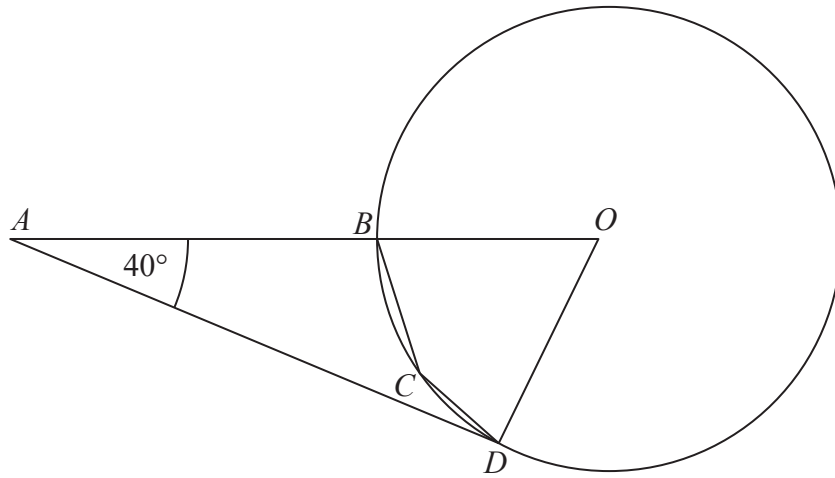
Give your answer in the form  $c\sqrt{2}$  where  $c$  is an integer.

.....  
(Total for Question 21 is 4 marks)



\*22

Diagram NOT  
accurately drawn



$B$ ,  $C$  and  $D$  are points on the circumference of a circle, centre  $O$ .  
 $ABO$  is a straight line.  
 $AD$  is the tangent at  $D$  to the circle.  
Angle  $DAO = 40^\circ$

Work out the size of angle  $BCD$ .  
Give a reason for each stage of your working.

(Total for Question 22 is 5 marks)

DO NOT WRITE IN THIS AREA

DO NOT WRITE IN THIS AREA

DO NOT WRITE IN THIS AREA



23 There are 7 blue counters, 3 green counters and 1 red counter in a bag.  
There are no other counters in the bag.

Hubert takes at random 2 counters from the bag.

(a) Work out the probability that both counters are blue.

.....  
(3)

(b) Work out the probability that the 2 counters are different colours.

.....  
(3)

**(Total for Question 23 is 6 marks)**

DO NOT WRITE IN THIS AREA

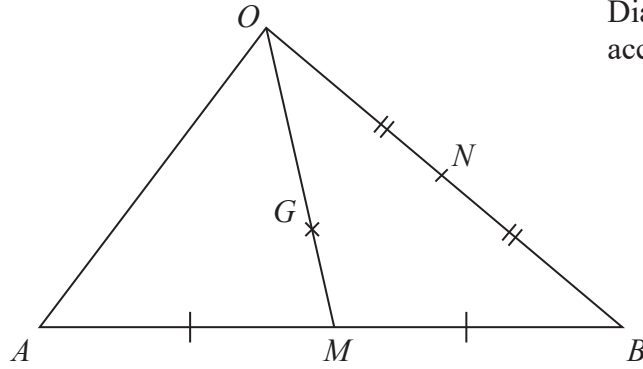
DO NOT WRITE IN THIS AREA

DO NOT WRITE IN THIS AREA





Diagram **NOT**  
accurately drawn



$\vec{OA} = 6\mathbf{a}$  and  $\vec{OB} = 6\mathbf{b}$   
 $M$  is the midpoint of  $AB$ .

- (a) Write  $\vec{OM}$  in terms of  $\mathbf{a}$  and  $\mathbf{b}$ .  
 Give your answer in its simplest form.

.....  
 (2)

$N$  is the midpoint of  $OB$ .  
 $G$  is the point on  $OM$  such that  $OG : GM = 2 : 1$

- \*(b) Show that  $AGN$  is a straight line.

(4)

(Total for Question 24 is 6 marks)

TOTAL FOR PAPER IS 100 MARKS



DO NOT WRITE IN THIS AREA

DO NOT WRITE IN THIS AREA

DO NOT WRITE IN THIS AREA

**BLANK PAGE**



DO NOT WRITE IN THIS AREA

DO NOT WRITE IN THIS AREA

DO NOT WRITE IN THIS AREA

**BLANK PAGE**



DO NOT WRITE IN THIS AREA

DO NOT WRITE IN THIS AREA

DO NOT WRITE IN THIS AREA

**BLANK PAGE**

