



Please write clearly in block capitals.

Centre number

--	--	--	--	--

Candidate number

--	--	--	--

Surname

\_\_\_\_\_

Forename(s)

\_\_\_\_\_

Candidate signature

\_\_\_\_\_

# A-level CHEMISTRY

## Unit 5 Energetics, Redox and Inorganic Chemistry

Wednesday 22 June 2016

Morning

Time allowed: 1 hour 45 minutes

### Materials

For this paper you must have:

- the Periodic Table/Data Sheet provided as an insert (enclosed)
- a ruler with millimetre measurements
- a calculator.

### Instructions

- Use black ink or black ball-point pen.
- Fill in the boxes at the top of this page.
- Answer **all** questions.
- You must answer the questions in the spaces provided. Do not write outside the box around each page or on blank pages.
- All working must be shown.
- Do all rough work in this book. Cross through any work you do not want to be marked.

### Information

- The marks for questions are shown in brackets.
- The maximum mark for this paper is 100.
- You are expected to use a calculator, where appropriate.
- Your answers to the questions in **Section B** should be written in continuous prose, where appropriate.
- You will be marked on your ability to:
  - use good English
  - organise information clearly
  - use scientific terminology accurately.

### Advice

- You are advised to spend about 75 minutes on **Section A** and about 30 minutes on **Section B**.



J U N 1 6 C H E M 5 0 1

WMP/Jun16/E5

**CHEM5**

**Section A**

Answer **all** questions in the spaces provided.

**1** This question is about the elements in Period 3 from sodium to phosphorus (Na to P) and their oxides.

**1 (a)** Element **X** forms an oxide that has a low melting point. This oxide dissolves in water to form an acidic solution.

**1 (a) (i)** Deduce the type of bonding in this oxide of **X**.

[1 mark]

---

**1 (a) (ii)** Identify element **X**.

[1 mark]

---

**1 (a) (iii)** Write an equation for the reaction between this oxide of **X** and water.

[1 mark]

---

**1 (b)** Element **Y** reacts vigorously with water. An oxide of **Y** dissolves in water to form a solution with a pH of 14.

**1 (b) (i)** Deduce the type of bonding in this oxide of **Y**.

[1 mark]

---

**1 (b) (ii)** Identify element **Y**.

[1 mark]

---

**1 (b) (iii)** Write an equation for the reaction of element **Y** with water.

[1 mark]

---



1 (b) (iv) Write an equation for the reaction of this oxide of **Y** with hydrochloric acid.

[1 mark]

---

1 (c) Element **Z** forms an amphoteric oxide that has a very high melting point.

1 (c) (i) Deduce the type of bonding in this oxide of **Z**.

[1 mark]

---

1 (c) (ii) Write the formula of this amphoteric oxide.

[1 mark]

---

1 (c) (iii) State the meaning of the term amphoteric.

[1 mark]

---

1 (c) (iv) Write two equations to show the amphoteric nature of the oxide of **Z**.

[2 marks]

---

---

---

12

Turn over ►

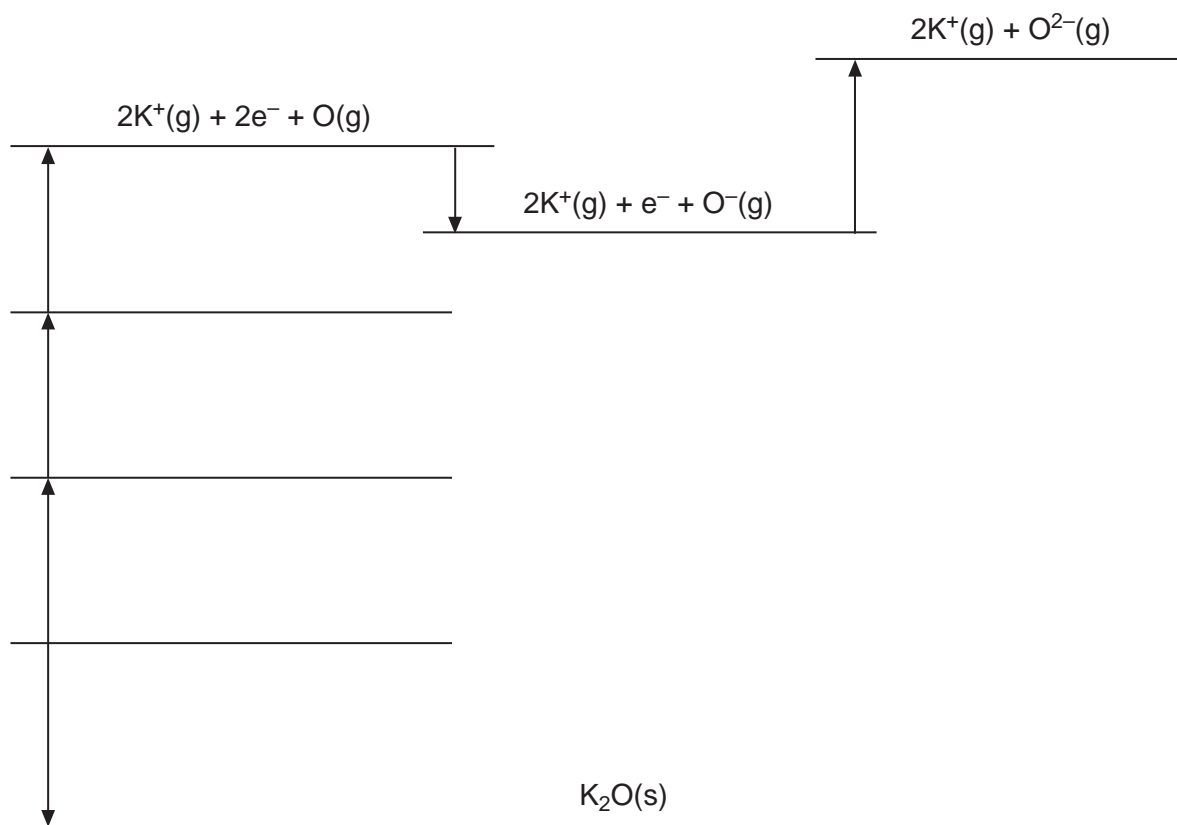


2 (a) **Figure 1** is a Born–Haber cycle for potassium oxide,  $\text{K}_2\text{O}$ . **Figure 1** is not to scale and not fully labelled.

2 (a) (i) Complete **Figure 1** by writing the formulae, including state symbols, of the appropriate species on each of the three blank lines.

[3 marks]

**Figure 1**



2 (a) (ii) Table 1 shows some enthalpy data.

Table 1

Enthalpy change	$\Delta H^\ominus/\text{kJ mol}^{-1}$
Enthalpy of atomisation of potassium	+90
First ionisation enthalpy of potassium	+418
Enthalpy of atomisation of oxygen	+248
First electron affinity of oxygen	-142
Second electron affinity of oxygen	+844
Enthalpy of formation of potassium oxide	-362

Use the data in Table 1 to calculate the enthalpy of lattice dissociation of potassium oxide,  $\text{K}_2\text{O}$

[3 marks]

---

---

---

---

2 (b) Explain why the enthalpy of lattice dissociation of potassium oxide is less endothermic than that of sodium oxide.

[2 marks]

---

---

---

---

---

---

Turn over ►



**3** This question is about magnesium chloride.

**3 (a)** Write the equation, including state symbols, for the process corresponding to the enthalpy of solution of magnesium chloride.

[1 mark]

---

**3 (b)** Use these data to calculate the standard enthalpy of solution of magnesium chloride.

Enthalpy of lattice dissociation of  $\text{MgCl}_2$  = +2493  $\text{kJ mol}^{-1}$

Enthalpy of hydration of magnesium ions = -1920  $\text{kJ mol}^{-1}$

Enthalpy of hydration of chloride ions = -364  $\text{kJ mol}^{-1}$

[2 marks]

---

---

---

---

---

**3 (c)** Solubility is the measure of how much of a substance can be dissolved in water to make a saturated solution. A salt solution is saturated when an undissolved solid is in equilibrium with its aqueous ions.

Use your answer to part **(b)** to deduce how the solubility of  $\text{MgCl}_2$  changes as the temperature is increased.

Explain your answer.

[3 marks]

---

---

---

---

---

---



**Turn over for the next question**

**DO NOT WRITE ON THIS PAGE  
ANSWER IN THE SPACES PROVIDED**

**Turn over ►**



4 **Table 2** shows some standard electrode potential data.

**Table 2**

Electrode half-reaction	$E^\ominus / \text{V}$
$\text{Zn}^{2+}(\text{aq}) + 2\text{e}^- \rightarrow \text{Zn}(\text{s})$	-0.76
$\text{Co}^{2+}(\text{aq}) + 2\text{e}^- \rightarrow \text{Co}(\text{s})$	-0.28
$\frac{1}{2}\text{O}_2(\text{g}) + 2\text{H}^+(\text{aq}) + 2\text{e}^- \rightarrow \text{H}_2\text{O}(\text{l})$	+1.23
$\text{Au}^+(\text{aq}) + \text{e}^- \rightarrow \text{Au}(\text{s})$	+1.68
$\text{Co}^{3+}(\text{aq}) + \text{e}^- \rightarrow \text{Co}^{2+}(\text{aq})$	+1.82

4 (a) (i) Identify the weakest oxidising agent in **Table 2**.

[1 mark]

\_\_\_\_\_

4 (a) (ii) Give the conditions under which the electrode potential of the  $\text{Zn}^{2+}/\text{Zn}$  electrode is -0.76 V.

[2 marks]

\_\_\_\_\_  
\_\_\_\_\_  
\_\_\_\_\_

4 (b) Two half-cells, involving species in **Table 2**, are connected together to give a cell with an e.m.f. = +0.48 V.

Use data from **Table 2** to deduce the conventional representation of this cell.  
Write the half-equation for the reaction that occurs at the negative electrode.

[3 marks]

Conventional representation \_\_\_\_\_

\_\_\_\_\_

Half-equation \_\_\_\_\_





**4 (c)** Use data from **Table 2** to identify a cobalt species that can react with water.

Write an equation for the redox reaction that occurs and identify the oxidation product in the reaction.

**[3 marks]**

Cobalt species \_\_\_\_\_

Equation \_\_\_\_\_

\_\_\_\_\_

\_\_\_\_\_

Oxidation product \_\_\_\_\_

**4 (d)** Use data from **Table 2** to explain why gold jewellery is unreactive in moist air.

**[2 marks]**

\_\_\_\_\_

\_\_\_\_\_

\_\_\_\_\_

\_\_\_\_\_

\_\_\_\_\_

\_\_\_\_\_

11

**Turn over for the next question**

**Turn over ►**



- 5 A representation of a hydrogen–oxygen fuel cell that operates in alkaline conditions is



- 5 (a) (i) Write a half-equation for the reaction that occurs at each electrode.  
Use the half-equations to deduce an overall equation for the cell.

[3 marks]

Half-equation at positive electrode \_\_\_\_\_

Half-equation at negative electrode \_\_\_\_\_

Overall equation \_\_\_\_\_

- 5 (a) (ii) State and explain the effect, if any, of increasing the pressure of oxygen on the e.m.f. of this cell.

[2 marks]

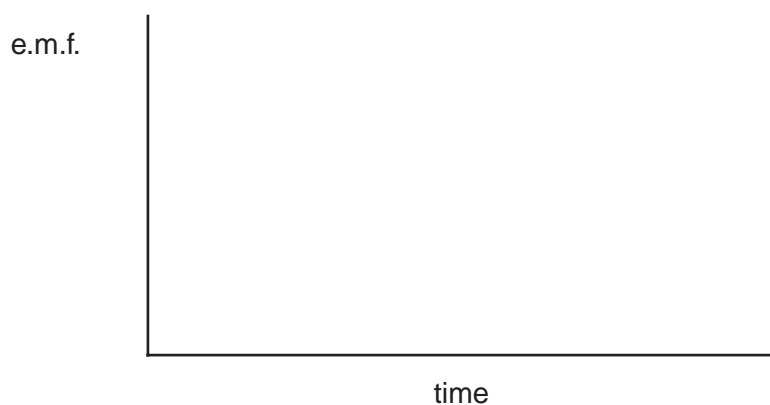
Effect on e.m.f. \_\_\_\_\_

Explanation \_\_\_\_\_

\_\_\_\_\_

- 5 (b) Complete the diagram to show how the e.m.f. of a hydrogen–oxygen fuel cell changes with time.

[1 mark]



**5 (c) (i)** Suggest the effect, if any, on the e.m.f. of this cell if the surface area of each platinum electrode is increased.

[1 mark]

---

**5 (c) (ii)** State the main environmental advantage of using a hydrogen–oxygen fuel cell to power a car.

[1 mark]

---

---

**5 (d)** Suggest why the use of a hydrogen–oxygen fuel cell might not be carbon-neutral.

[1 mark]

---

---

---

---

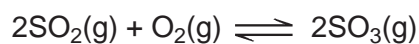
9
---

**Turn over for the next question**

**Turn over ►**



- 6 In the Contact Process sulfur dioxide reacts with oxygen to form sulfur trioxide as shown in the equation.



**Table 3** shows some thermodynamic data.

**Table 3**

	$\Delta H_f^\ominus / \text{kJ mol}^{-1}$	$S^\ominus / \text{J K}^{-1} \text{mol}^{-1}$
$\text{SO}_2(\text{g})$	-297	248
$\text{O}_2(\text{g})$	0	205
$\text{SO}_3(\text{g})$	-395	256

- 6 (a) Use data from **Table 3** to calculate the standard enthalpy change for this reaction. **[2 marks]**

---



---



---



---



---

- 6 (b) Use data from **Table 3** to calculate the standard entropy change for this reaction. **[2 marks]**

---



---



---



---

- 6 (c) State what the sign of the entropy change in your answer to part (b) indicates about the product of this reaction relative to the reactants. **[1 mark]**

---



**6 (d)** Use your answers to parts **(a)** and **(b)** to calculate a value for the free-energy change for this reaction at 50 °C.

(If you were unable to calculate  $\Delta H$  in part **(a)** assume a value of  $-250 \text{ kJ mol}^{-1}$   
If you were unable to calculate  $\Delta S$  in part **(b)** assume a value of  $-250 \text{ J K}^{-1} \text{ mol}^{-1}$   
These are not the correct values.)

**[3 marks]**

---

---

---

---

---

---

---

**6 (e)** Use your answer to part **(d)** to explain whether the reaction is feasible at 50 °C

**[1 mark]**

---

---

**6 (f)** Vanadium(V) oxide acts as a heterogeneous catalyst in the Contact Process.

**6 (f) (i)** State what is meant by the term heterogeneous.

**[1 mark]**

---

**6 (f) (ii)** Write **two** equations that show how this catalyst is involved in the Contact Process.

**[2 marks]**

---

---

---

Turn over ►



**6 (f) (iii)** Suggest why the vanadium(V) oxide is used in small pellet form rather than as large lumps.

**[1 mark]**

---

---

**6 (f) (iv)** State why the reactants should be purified before they come into contact with the vanadium(V) oxide.

**[1 mark]**

---

---

14



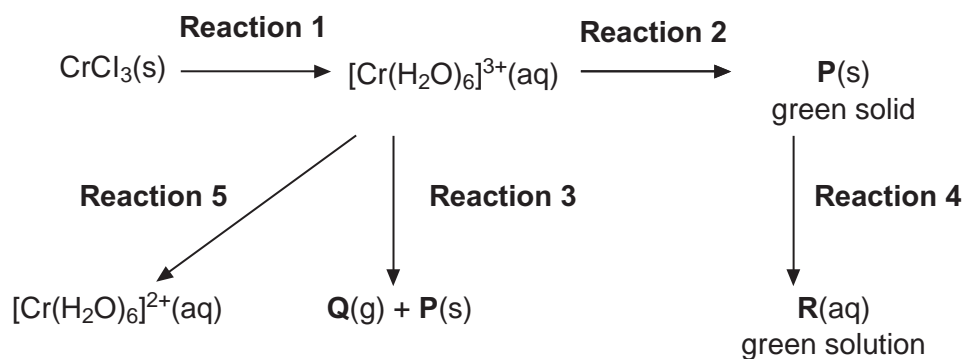
**Turn over for the next question**

**DO NOT WRITE ON THIS PAGE  
ANSWER IN THE SPACES PROVIDED**

**Turn over ►**



7 The following scheme shows some reactions of chromium compounds.



7 (a) Write an equation for **Reaction 1**.

[1 mark]

---

7 (b) For **Reaction 2**, identify the complex **P**, state a reagent and write an equation.

[3 marks]

Identity of **P** \_\_\_\_\_

Reagent \_\_\_\_\_

Equation \_\_\_\_\_

---

7 (c) For **Reaction 3**, identify **Q**, state a reagent and write an equation.

[3 marks]

Identity of **Q** \_\_\_\_\_

Reagent \_\_\_\_\_

Equation \_\_\_\_\_

---





- 7 (d) For **Reaction 4**, identify the complex **R**, state a reagent and write an equation for the formation of **R** from **P**.

[3 marks]

Identity of **R** \_\_\_\_\_

Reagent \_\_\_\_\_

Equation \_\_\_\_\_  
\_\_\_\_\_

- 7 (e) For **Reaction 5** suggest the reagents and state the colour of  $[\text{Cr}(\text{H}_2\text{O})_6]^{2+}(\text{aq})$ .

[2 marks]

Reagents \_\_\_\_\_

Colour \_\_\_\_\_

12

Turn over for the next question

Turn over ►



**Section B**

Answer **all** questions in the spaces provided.

**8** This question is about cobalt chemistry.

**8 (a)** Give the electron configuration of the Co atom and of the  $\text{Co}^{2+}$  ion.

State three characteristic features of the chemistry of cobalt and its compounds.

**[5 marks]**

---

---

---

---

---

---

---

---

---

---



**8 (b)** Ethane-1,2-diamine can act as a bidentate ligand. When  $[\text{Co}(\text{H}_2\text{O})_6]^{2+}(\text{aq})$  ions are treated with an excess of ethane-1,2-diamine, the water ligands are replaced.

Explain what is meant by the term bidentate ligand.

Explain, with the aid of an equation, the thermodynamic reasons why this reaction occurs.

Draw a diagram to show the structure of the complex ion formed.

**[7 marks]**

---

---

---

---

---

---

---



- 9** A student weighed out a 2.29 g sample of impure  $\text{K}_3[\text{Fe}(\text{C}_2\text{O}_4)_3] \cdot 3\text{H}_2\text{O}$  and dissolved it in water.  
This solution was added to a  $250 \text{ cm}^3$  volumetric flask and made up to  $250 \text{ cm}^3$  with distilled water.  
A  $25.0 \text{ cm}^3$  portion was pipetted into a conical flask and an excess of acid was added. The mixture was heated to  $60 \text{ }^\circ\text{C}$  and titrated with  $0.0200 \text{ mol dm}^{-3}$   $\text{KMnO}_4$  solution.  $26.40 \text{ cm}^3$  of  $\text{KMnO}_4$  solution were needed for a complete reaction.  
In this titration only the  $\text{C}_2\text{O}_4^{2-}$  ions react with the  $\text{KMnO}_4$  solution.

- 9 (a)** The reaction between  $\text{C}_2\text{O}_4^{2-}$  ions and  $\text{MnO}_4^-$  ions is autocatalysed.  
Explain what is meant by the term autocatalysed and identify the catalyst in the reaction. **[2 marks]**

---

---

---

---

- 9 (b)** Select from the list the most suitable substance used to acidify the solution in the conical flask.  
Put a tick ( $\checkmark$ ) in the correct box. **[1 mark]**

$\text{H}_2\text{C}_2\text{O}_4$

$\text{H}_2\text{SO}_4$

$\text{HCl}$

$\text{HNO}_3$



- 9 (c)** The reaction between  $\text{C}_2\text{O}_4^{2-}$  ions and  $\text{MnO}_4^-$  ions is very slow at first. Explain why the reaction is initially slow.

**[3 marks]**

---

---

---

---

---

---

---

---

- 9 (d)** Write an equation for the reaction between  $\text{C}_2\text{O}_4^{2-}$  ions and  $\text{MnO}_4^-$  ions in acidic solution.  
Calculate the percentage purity of the original sample of  $\text{K}_3[\text{Fe}(\text{C}_2\text{O}_4)_3] \cdot 3\text{H}_2\text{O}$   
Give your answer to 3 significant figures.

**[7 marks]**

---

---

---

---

---

---

---

---

---

---

---

---

---

---

---

---

---

---

---

---

---

---

---

---

**Turn over ►**



**9 (e)** A solution of  $\text{KMnO}_4$  has an unknown concentration.

Describe briefly how colorimetry can be used to determine the concentration of this solution.

**[3 marks]**

---

---

---

---

---

---

---

16

**END OF QUESTIONS**



**There are no questions printed on this page**

**DO NOT WRITE ON THIS PAGE  
ANSWER IN THE SPACES PROVIDED**



**There are no questions printed on this page**

**DO NOT WRITE ON THIS PAGE  
ANSWER IN THE SPACES PROVIDED**

**Copyright information**

For confidentiality purposes, from the November 2015 examination series, acknowledgements of third party copyright material will be published in a separate booklet rather than including them on the examination paper or support materials. This booklet is published after each examination series and is available for free download from [www.aqa.org.uk](http://www.aqa.org.uk) after the live examination series.

Permission to reproduce all copyright material has been applied for. In some cases, efforts to contact copyright-holders may have been unsuccessful and AQA will be happy to rectify any omissions of acknowledgements. If you have any queries please contact the Copyright Team, AQA, Stag Hill House, Guildford, GU2 7XJ.

Copyright © 2016 AQA and its licensors. All rights reserved.

