

Write your name here

Surname

Other names

Pearson
Edexcel GCSE

Centre Number

--	--	--	--	--

Candidate Number

--	--	--	--

Geography B

Unit 1: Dynamic Planet

Higher Tier

Tuesday 19 May 2015 – Afternoon
Time: 1 hour 15 minutes

Paper Reference

5GB1H/01

You do not need any other materials.

Total Marks

Instructions

- Use **black** ink or ball-point pen.
- **Fill in the boxes** at the top of this page with your name, centre number and candidate number.
- In Section A, answer **all** questions.
- In Section B, answer **either** question 5 **or** 6.
- In Section C, answer **either** question 7 **or** 8.
- Answer the questions in the spaces provided
– *there may be more space than you need.*

Information

- The total mark for this paper is 78.
- The marks for **each** question are shown in brackets
– *use this as a guide as to how much time to spend on each question.*
- Questions labelled with an **asterisk** (*) are ones where the quality of your written communication will be assessed
– *you should take particular care on these questions with your spelling, punctuation and grammar, as well as the clarity of expression.*
- The marks available for spelling, punctuation and grammar are clearly indicated.

Advice

- Read each question carefully before you start to answer it.
- Check your answers if you have time at the end.

Turn over ►

P44723RRA

©2015 Pearson Education Ltd.

4/4/1/1/1/1



PEARSON

SECTION A: INTRODUCTION TO THE DYNAMIC PLANET

Answer ALL questions in this section.

Topic 1: Restless Earth

1 Figure 1 shows a plate boundary.

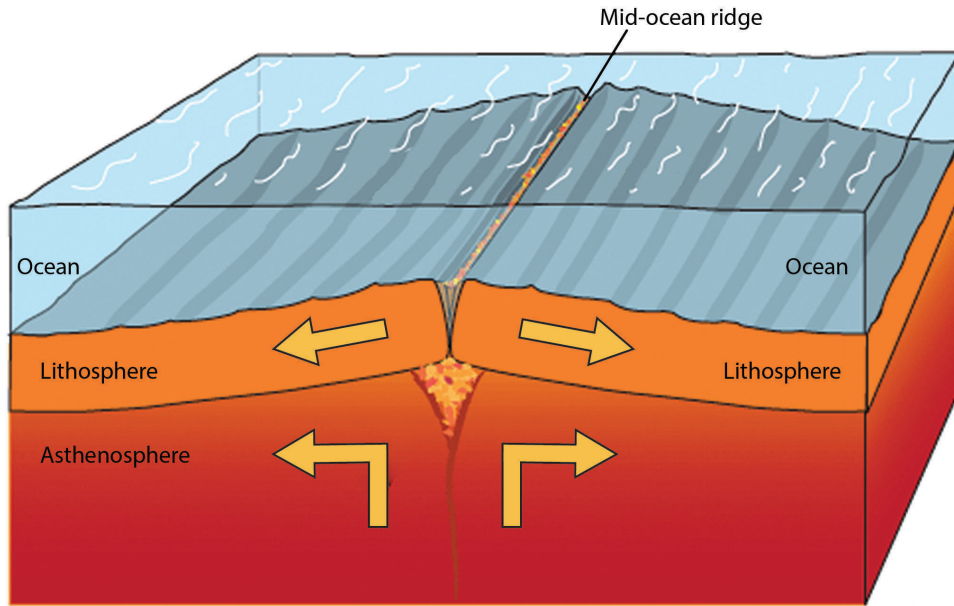


Figure 1

(a) Study Figure 1.

Outline why shield volcanoes form on this type of plate boundary.

(2)

.....

.....

.....

.....



(b) Describe the layered structure of the Earth's interior.

(4)

.....

.....

.....

.....

.....

.....

.....

.....



*(c) Compare the **primary** impacts of earthquakes in two named locations.

(6)

Named location 1:

Named location 2:

.....

.....

.....

.....

.....

.....

.....

.....

.....

.....

.....

.....

.....

.....

.....

.....

.....

.....

.....

(Total for Question 1 = 12 marks)



BLANK PAGE
QUESTION 2 BEGINS ON THE NEXT PAGE.



Topic 2: Changing Climate

- 2 Figure 2 shows the global pattern of carbon dioxide (CO₂) emissions per person in 2010.

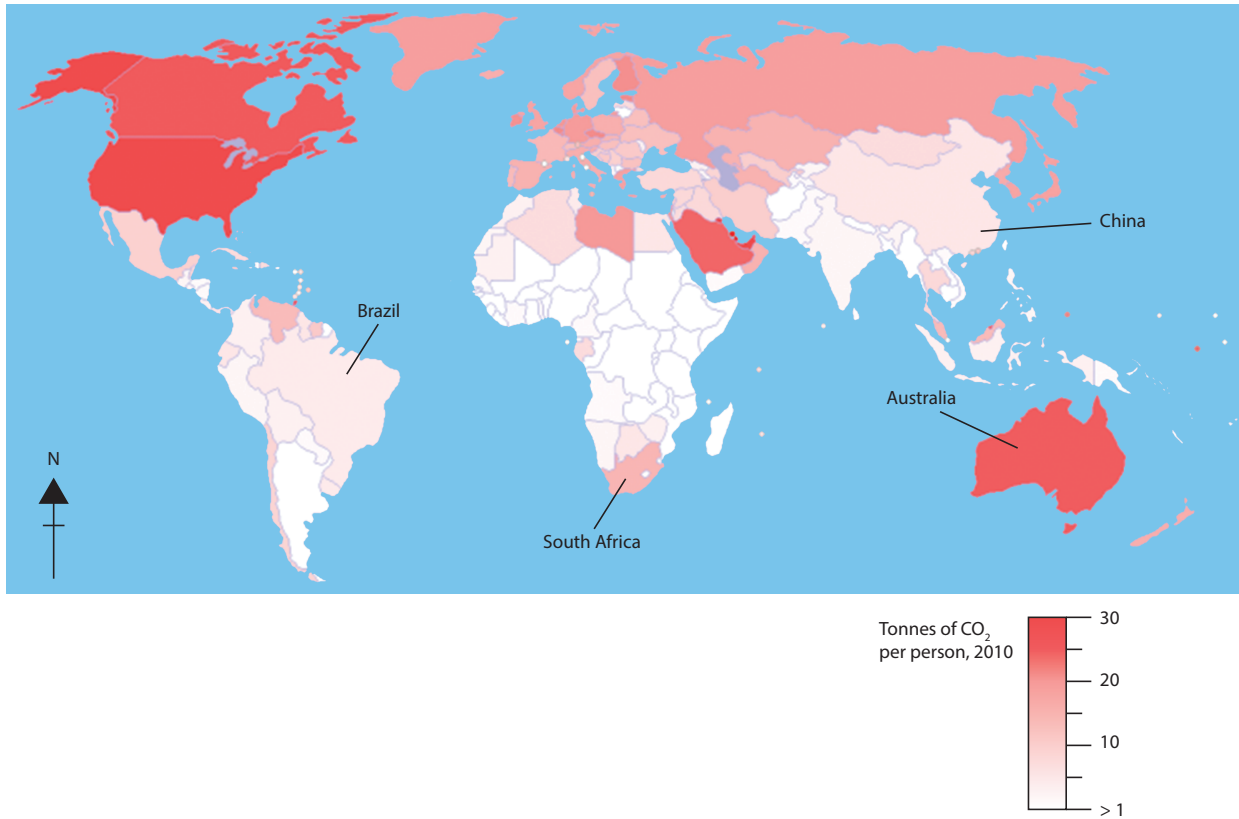


Figure 2

- (a) Study Figure 2.

Describe the difference in CO₂ emissions per person in 2010 between the northern and southern hemispheres.

(2)

.....

.....

.....

.....



(b) Describe the pattern of temperature and rainfall in the UK.

(4)

.....

.....

.....

.....

.....

.....

.....

.....



* (c) Explain the possible **environmental** impacts of future climate change in the UK.

(6)

.....

.....

.....

.....

.....

.....

.....

.....

.....

.....

.....

.....

.....

.....

.....

.....

.....

.....

.....

.....

.....

.....

(Total for Question 2 = 12 marks)

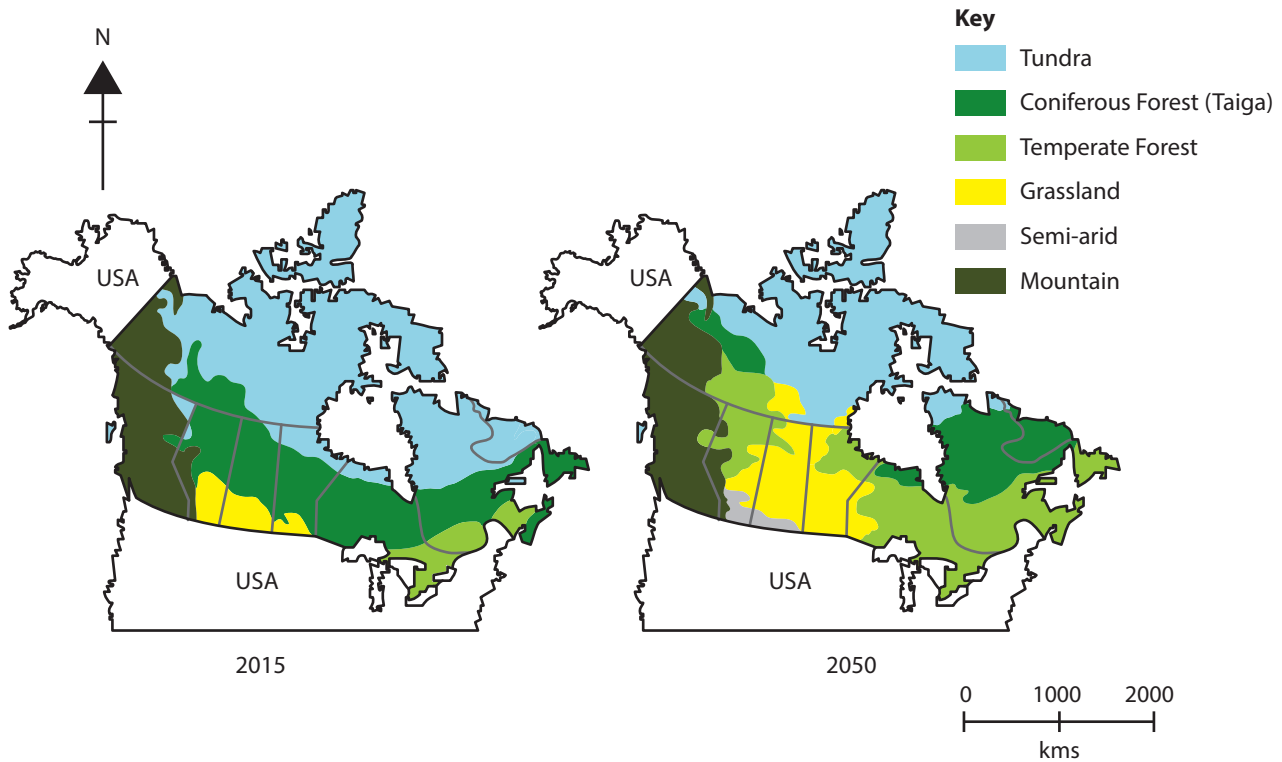


BLANK PAGE
QUESTION 3 BEGINS ON THE NEXT PAGE.



Topic 3: Battle for the Biosphere

3 Figure 3 shows the predicted impact of a change in climate on the location of Canadian biomes.



(Source: Changes in Forest and Grasslands Boundaries, Atmospheric Environment Service.
© Environment Canada, 1991)

Figure 3

(a) Study Figure 3.

Describe how the area of tundra is predicted to change by 2050.

(2)

.....

.....

.....

.....



(b) Explain how human activity is causing the destruction of tropical rainforests.

(4)

.....

.....

.....

.....

.....

.....

.....

.....



BLANK PAGE
QUESTION 4 BEGINS ON THE NEXT PAGE.



Topic 4: Water World

4 Figure 4 shows the causes of river pollution in the USA.

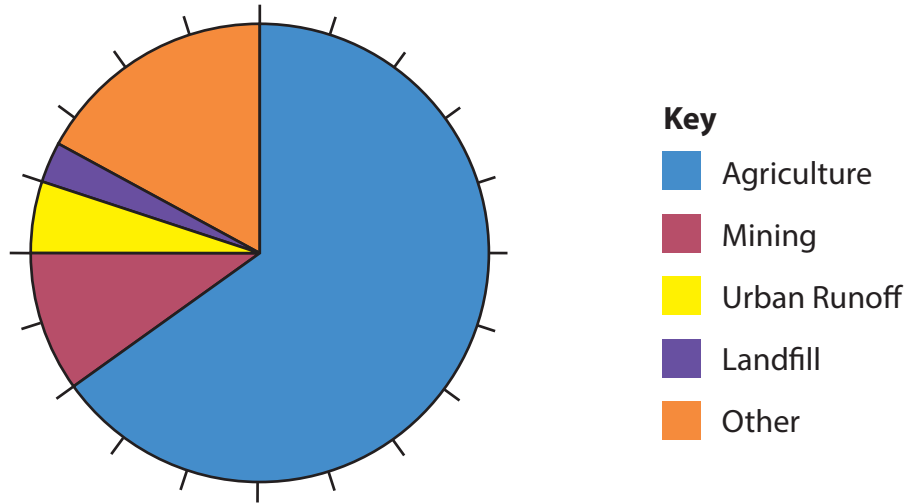


Figure 4

(a) Study Figure 4.

Outline **one** way agriculture causes river pollution.

(2)

.....

.....

.....

.....



(b) Small-scale water management schemes often use intermediate technology.

Using a named example, describe **two** benefits of using intermediate technology.

(4)

Named example:

.....

.....

.....

.....

.....

.....

.....

.....



* (c) For a named vulnerable area, explain the impact on people of an insufficient and unreliable water supply.

(6)

Named vulnerable area:

.....

.....

.....

.....

.....

.....

.....

.....

.....

.....

.....

.....

.....

.....

.....

.....

.....

.....

.....

.....

.....

.....

.....

.....

.....

(Total for Question 4 = 12 marks)

TOTAL FOR SECTION A = 48 MARKS



BLANK PAGE
QUESTION 5 BEGINS ON THE NEXT PAGE.



SECTION B: SMALL-SCALE DYNAMIC PLANET

Answer ONE question in this section.

Topic 5: Coastal Change and Conflict

If you answer Question 5 put a cross in the box .

Spelling, punctuation and grammar will be assessed in 5*(b).

5 Figure 5 shows a stretch of coastline.

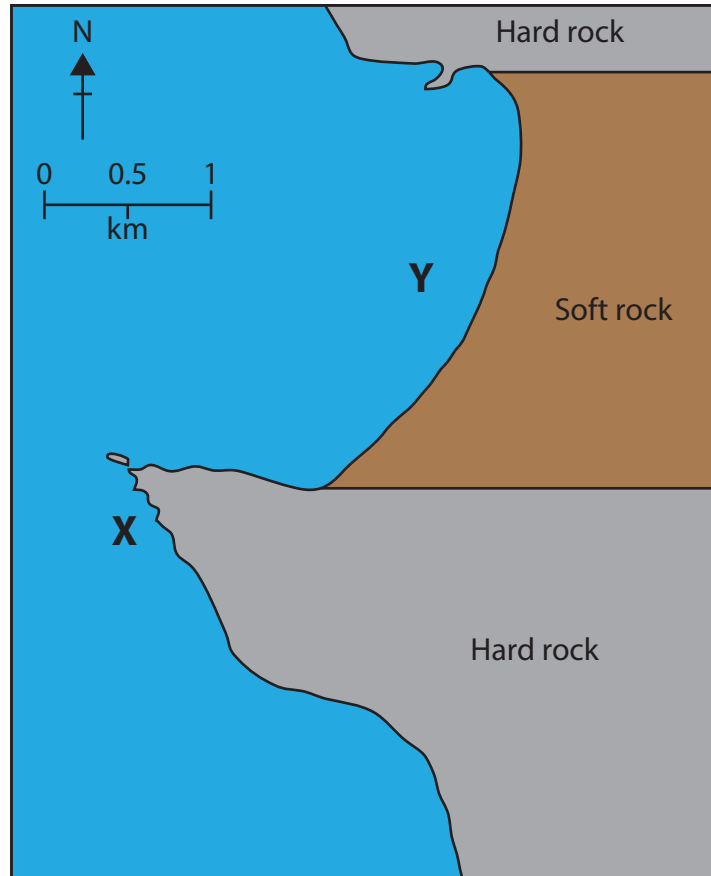


Figure 5

(a) Study Figure 5.

(i) Suggest a coastal landform likely to be found at X.

(1)



(ii) Explain the formation of the bay at Y.

(3)

.....

.....

.....

.....

.....

.....



BLANK PAGE
QUESTION 6 BEGINS ON THE NEXT PAGE.

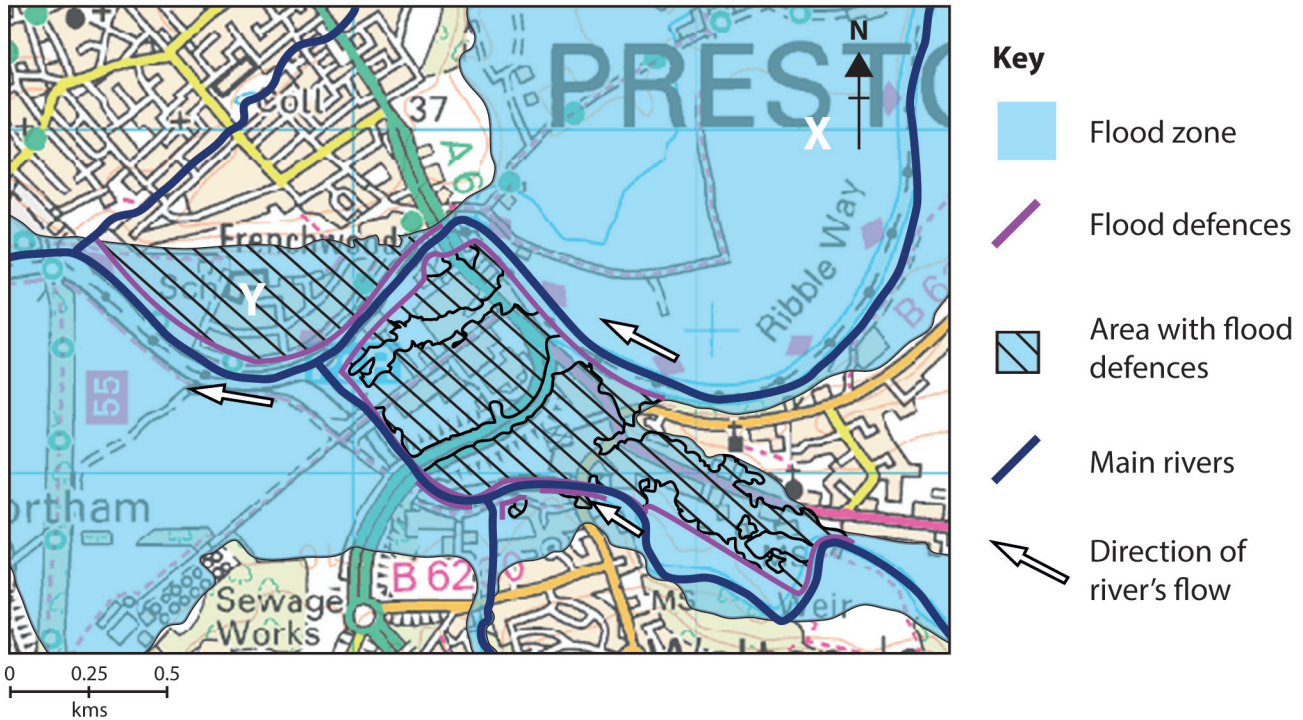


Topic 6: River Processes and Pressures

If you answer Question 6 put a cross in the box .

Spelling, punctuation and grammar will be assessed in 6*(b).

6 Figure 6 shows an Environment Agency flood map for Preston.



(Source: © Environment Agency 2014. © Ordnance Survey Crown copyright)

Figure 6

(a) Study Figure 6.

(i) Suggest **one** reason why location Y has been protected from flooding.

(1)

.....

.....

(ii) X is located on a washland, a method of soft engineering.

Explain why the washland at X will reduce the risk of flooding at Y.

(3)

.....

.....

.....

.....

.....

.....



SECTION C: LARGE-SCALE DYNAMIC PLANET

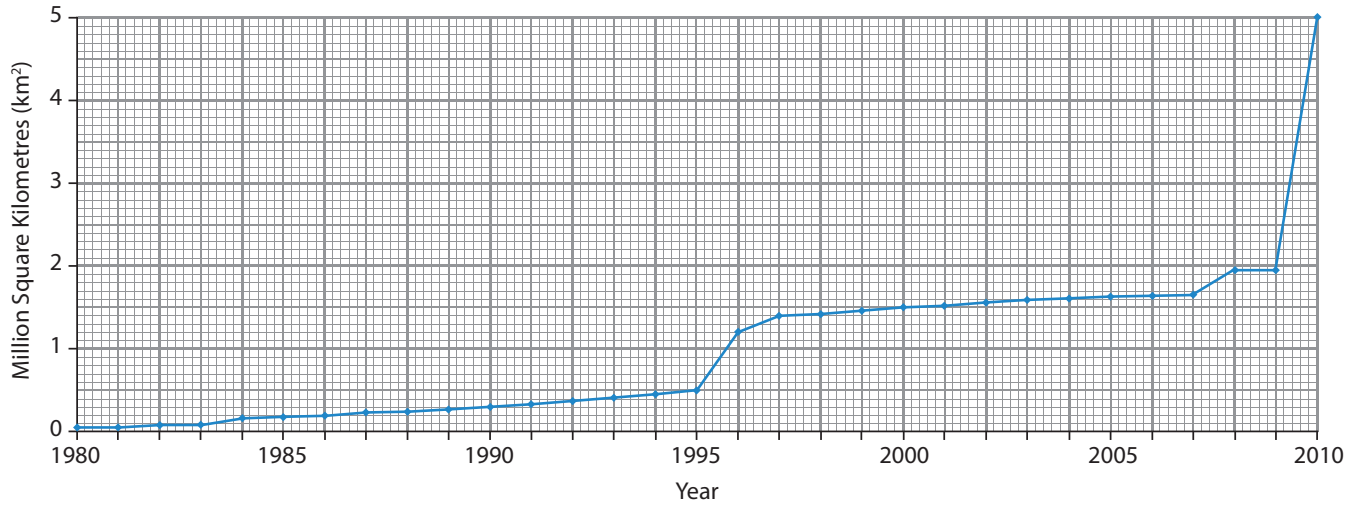
Answer ONE question in this section.

Topic 7: Oceans on the Edge

If you answer Question 7 put a cross in the box .

Spelling, punctuation and grammar will be assessed in 7*(c).

7 Figure 7 shows the total area of marine reserves in UK waters from 1980 to 2010.



(Source of data: JNCC)

Figure 7

(a) Study Figure 7.

Describe the change in the total area of marine reserves between 2000 and 2010.

(2)

.....

.....

.....

.....

(b) Define the term **food web**.

(2)

.....

.....

.....

.....



***(c)** Examine how human activities have affected the global distribution of **either** coral reefs **or** mangrove swamps.

(8)

.....

.....

.....

.....

.....

.....

.....

.....

.....

.....

.....

.....

.....

.....

.....

.....

.....

.....

.....

.....

.....

(Total for spelling, punctuation and grammar = 3 marks)
(Total for Question 7 = 15 marks)



Topic 8: Extreme Environments

If you answer Question 8 put a cross in the box .

Spelling, punctuation and grammar will be assessed in 8*(b).

8 Figure 8 shows the mean monthly maximum temperature in Western Australia.

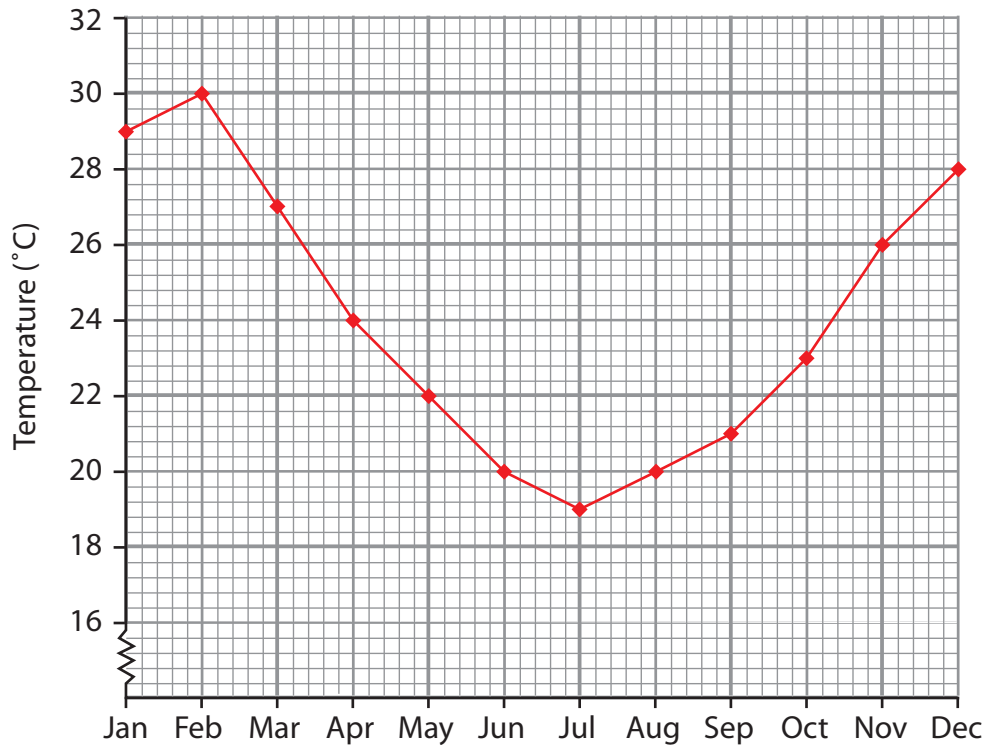


Figure 8

(a) Study Figure 8.

(i) Describe the change in mean monthly maximum temperature between February and July.

(2)

.....

.....

.....

.....



(ii) Define the term **desertification**.

(2)

.....

.....

.....

.....





* (b) Examine the adaptations made by people to help them live in extreme environments.

(8)

Dotted lines for writing

(Total for spelling, punctuation and grammar = 3 marks)
(Total for Question 8 = 15 marks)

TOTAL FOR SECTION C = 15 MARKS
TOTAL FOR PAPER = 78 MARKS

