

Write your name here

Surname

Other names

Pearson
Edexcel GCSE

Centre Number

--	--	--	--	--

Candidate Number

--	--	--	--	--

Geography B

Unit 2: People and the Planet

Higher Tier

Wednesday 3 June 2015 – Afternoon
Time: 1 hour 15 minutes

Paper Reference
5GB2H/01

You do not need any other materials.

Total Marks

Instructions

- Use **black** ink or ball-point pen.
- **Fill in the boxes** at the top of this page with your name, centre number and candidate number.
- In Section A, answer **all** questions.
- In Section B, answer **either** question 5 **or** 6.
- In Section C, answer **either** question 7 **or** 8.
- Answer the questions in the spaces provided
– *there may be more space than you need.*

Information

- The total mark for this paper is 78.
- The marks for **each** question are shown in brackets
– *use this as a guide as to how much time to spend on each question.*
- Questions labelled with an **asterisk** (*) are ones where the quality of your written communication will be assessed
– *you should take particular care on these questions with your spelling, punctuation and grammar, as well as the clarity of expression.*
- The marks available for spelling, punctuation and grammar are clearly indicated.

Advice

- Read each question carefully before you start to answer it.
- Check your answers if you have time at the end.

Turn over ►

P44725A

©2015 Pearson Education Ltd.

4/1/1/1



PEARSON

SECTION A – INTRODUCTION TO PEOPLE AND THE PLANET

Answer ALL questions in this section.

Topic 1 – Population Dynamics

1 Figure 1 shows global population growth, 1850–2010.

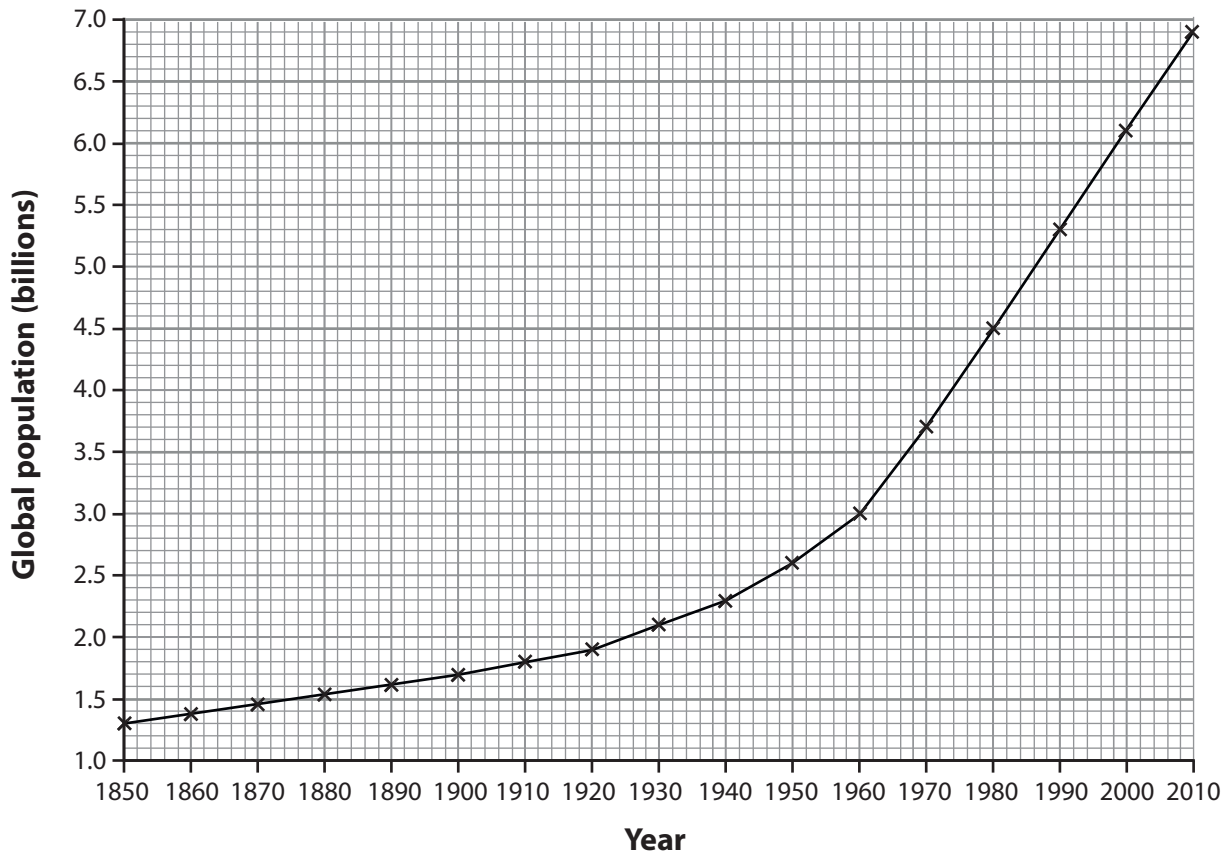


Figure 1

(a) Study Figure 1.

Describe the change in global population growth between 1850 and 2010.

(2)

.....

.....

.....

.....



(b) For a named country, explain how it is attempting to increase the birth rate.

(4)

Named country

.....

.....

.....

.....

.....

.....

.....

.....

.....



*(c) Explain the differences in population pyramids for countries at different levels of development.

You may use diagrams to support your answer.

(6)

.....

.....

.....

.....

.....

.....

.....

.....

.....

.....

.....

.....

.....

.....

.....

.....

.....

.....

.....

.....

.....

.....

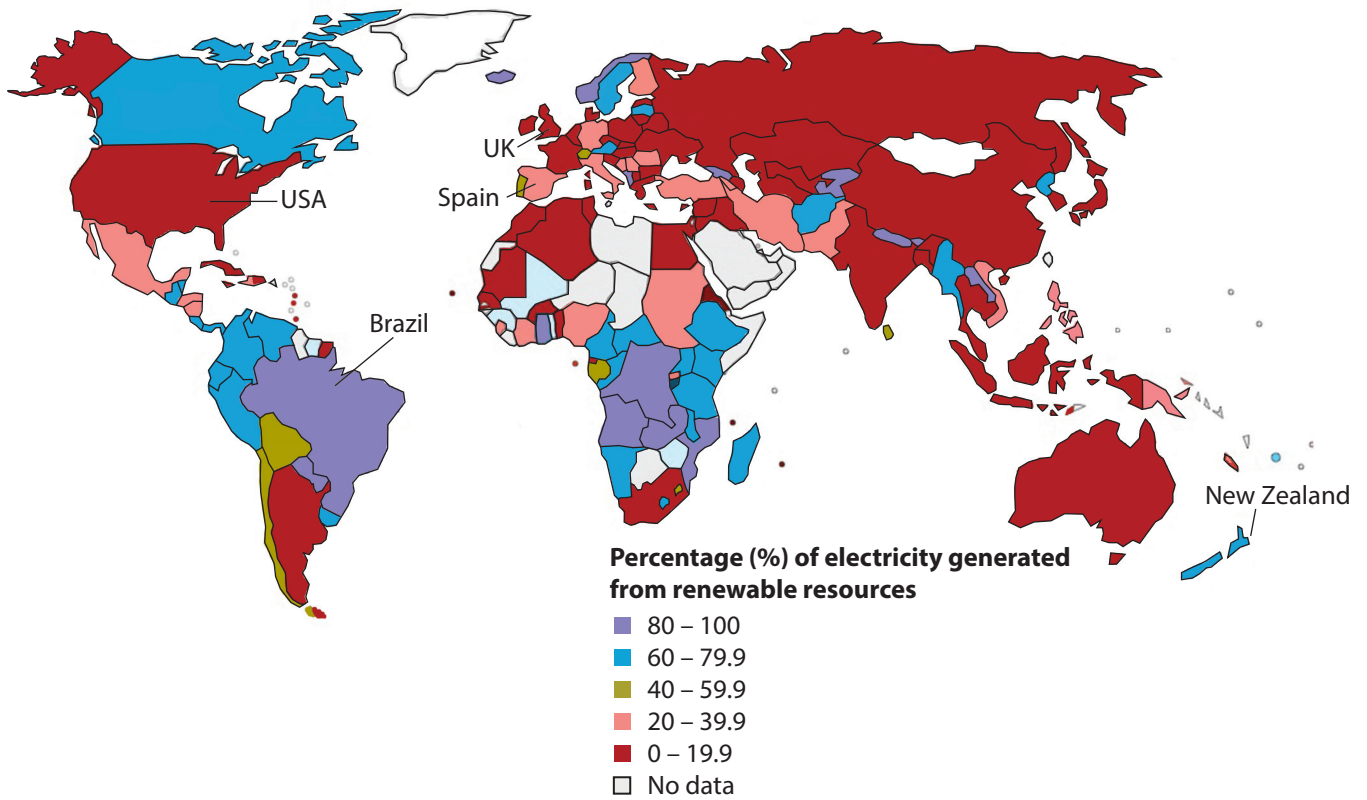
.....

(Total for Question 1 = 12 marks)



Topic 2 – Consuming Resources

2 Figure 2 shows the percentage of electricity generated from renewable resources.



(Source: © <http://www.geocurrents.info/>)

Figure 2

(a) Study Figure 2.

Compare the amount of electricity generated from renewable resources in Brazil and the USA.

(2)

.....

.....

.....

.....



(b) Describe the Malthusian theory about the relationship between population and resources (food supply).

You may use a diagram in your answer.

(4)

.....

.....

.....

.....

.....

.....

.....

.....

.....



* (c) Explain how national and local governments attempt to manage resource consumption.

(6)

.....

.....

.....

.....

.....

.....

.....

.....

.....

.....

.....

.....

.....

.....

.....

.....

.....

.....

.....

(Total for Question 2 = 12 marks)



Topic 3 – Globalisation

3 Figure 3 shows the Clark Fisher model.

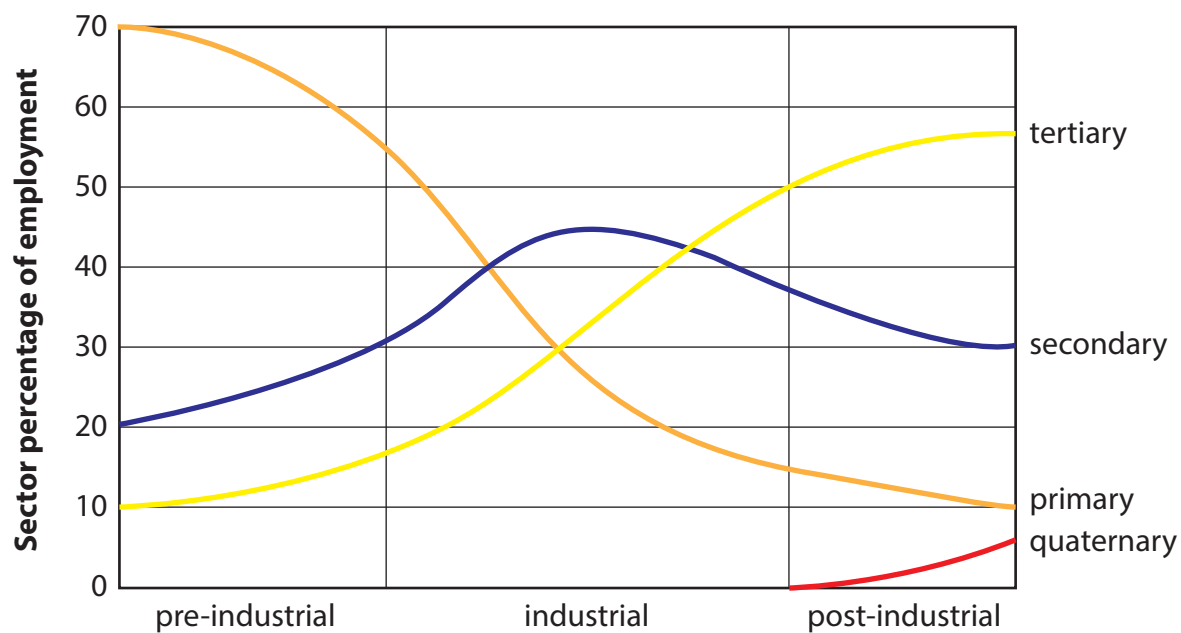


Figure 3

(a) Study Figure 3.

Describe the changes to secondary sector employment.

(2)

.....

.....

.....

.....



(b) Describe the impact of globalisation on different groups of people in the developing world.

(4)

.....

.....

.....

.....

.....

.....

.....

.....

.....



*(c) Explain why there has been growth in international trade over the past 50 years.

(6)

.....

.....

.....

.....

.....

.....

.....

.....

.....

.....

.....

.....

.....

.....

.....

.....

.....

.....

.....

.....

.....

.....

.....

(Total for Question 3 = 12 marks)



Topic 4 – Development Dilemmas

4 Figure 4 shows two indicators used to measure development for selected countries.

	Country			
Development indicator	Argentina	Cameroon	Cuba	Italy
GDP per person (US\$)	18 400	2 400	6 100	30 600
Life expectancy at birth (years)	77	55	79	82

Figure 4

(a) Study Figure 4.

Describe the relationship between GDP per capita and life expectancy at birth shown on Figure 4.

(2)

.....

.....

.....

.....

(b) Suggest **two** reasons for the large difference in development levels between countries.

(4)

1

.....

.....

.....

.....

.....

2

.....

.....

.....



*(c) Compare the characteristics of top-down and bottom-up development strategies.

(6)

Area with horizontal dotted lines for writing the answer.

(Total for Question 4 = 12 marks)

TOTAL FOR SECTION A = 48 MARKS



BLANK PAGE
QUESTION 5 BEGINS ON THE NEXT PAGE.



SECTION B – SMALL-SCALE PEOPLE AND THE PLANET

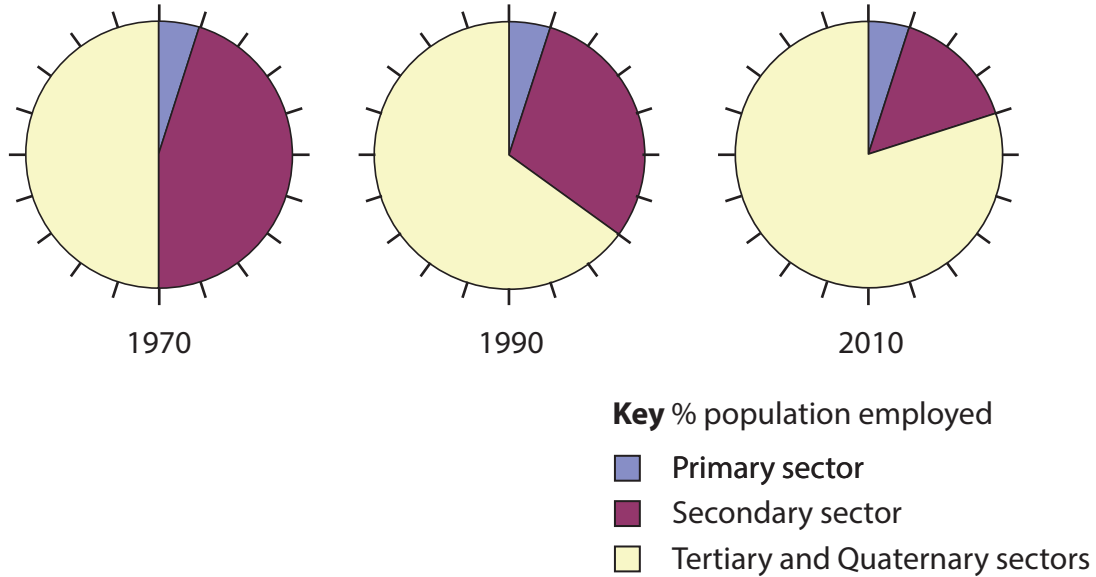
Answer ONE question in this section.

Topic 5 – The Changing Economy of the UK

If you answer Question 5 put a cross in the box .

Spelling, punctuation and grammar will be assessed in 5*(b).

5 Figure 5 shows the changes in employment sectors in the UK, 1970–2010.



(Source: ONS)

Figure 5

(a) Study Figure 5.

(i) Describe the changes in the UK employment structure between 1970 and 2010.

(2)

.....

.....

.....

.....

(ii) Suggest **one** reason for the change in employment in the secondary sector.

(2)

.....

.....

.....

.....



***(b)** For a named urban area, examine the **positive** and **negative** environmental impacts of de-industrialisation.

(8)

Named urban area

(A series of horizontal dotted lines for writing the answer.)

(Total for spelling, punctuation and grammar = 3 marks)

(Total for Question 5 = 15 marks)



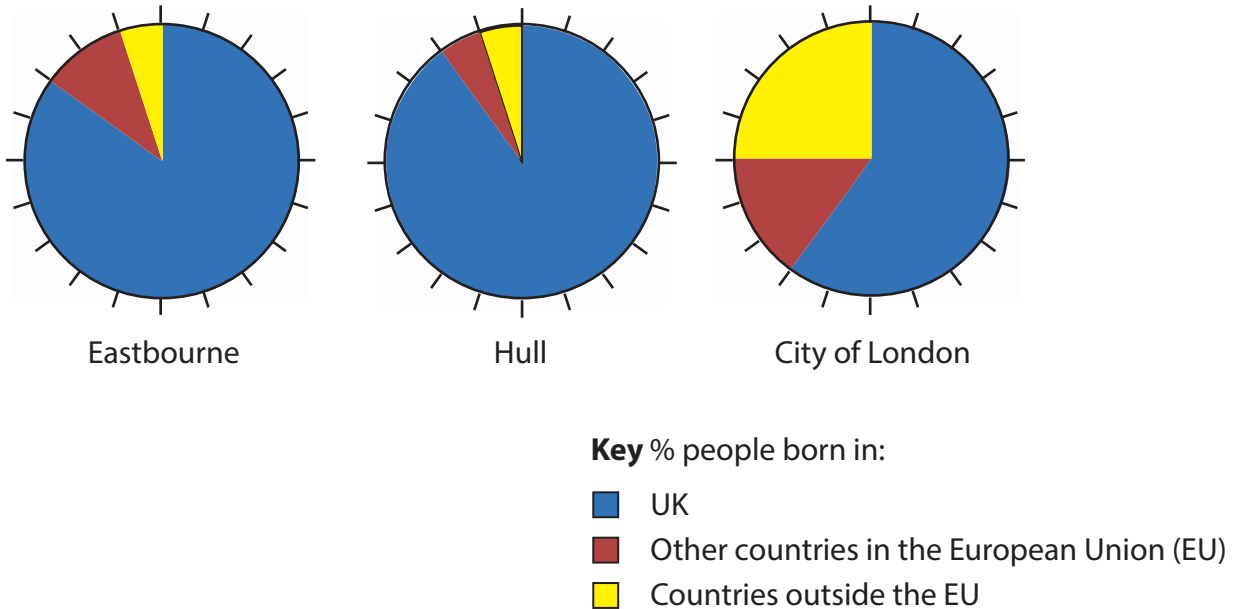
P 4 4 7 2 5 A 0 1 5 2 4

Topic 6 – Changing Settlements in the UK

If you answer Question 6 put a cross in the box .

Spelling, punctuation and grammar will be assessed in 6*(b).

6 Figure 6 shows the countries of birth for the populations of three urban areas in the UK.



(Source: ONS)

Figure 6

(a) Study Figure 6.

(i) Describe the differences in the populations of the three urban areas.

(2)

(ii) Suggest **one** reason for the differences in the populations of the three urban areas.

(2)



SECTION C – LARGE-SCALE PEOPLE AND THE PLANET

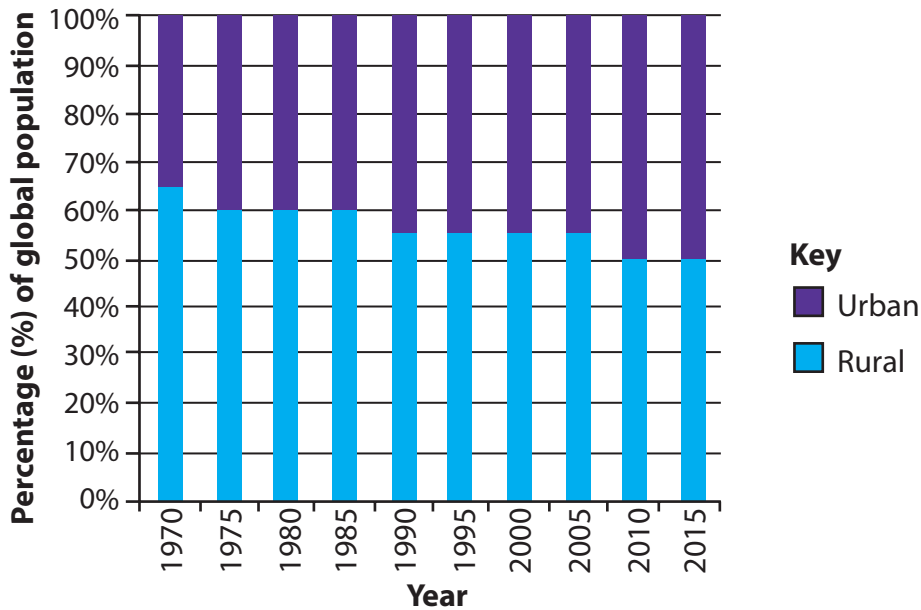
Answer ONE question in this section.

Topic 7 – The Challenges of an Urban World

If you answer Question 7 put a cross in the box .

Spelling, punctuation and grammar will be assessed in 7*(b).

7 Figure 7 shows the past and present world trend in urbanisation, 1970–2015.



(Source: © The Christian Science Monitor 2014)

Figure 7

(a) Study Figure 7.

(i) Outline the evidence for increasing urbanisation between 1970 and 2015.

(2)

.....

.....

.....

.....

(ii) Suggest **one** reason for the changes shown between 1970 and 2015.

(2)

.....

.....

.....

.....



*(b) Examine the success of strategies used to improve the quality of life in cities in the developing world.

(8)

Handwriting practice area consisting of 25 horizontal dotted lines for writing an answer.

(Total for spelling, punctuation and grammar = 3 marks)

(Total for Question 7 = 15 marks)



Topic 8 – The Challenges of a Rural World

If you answer Question 8 put a cross in the box .

Spelling, punctuation and grammar will be assessed in 8*(c).

8 Figure 8 shows the trend in China's rural population, 1970–2015.

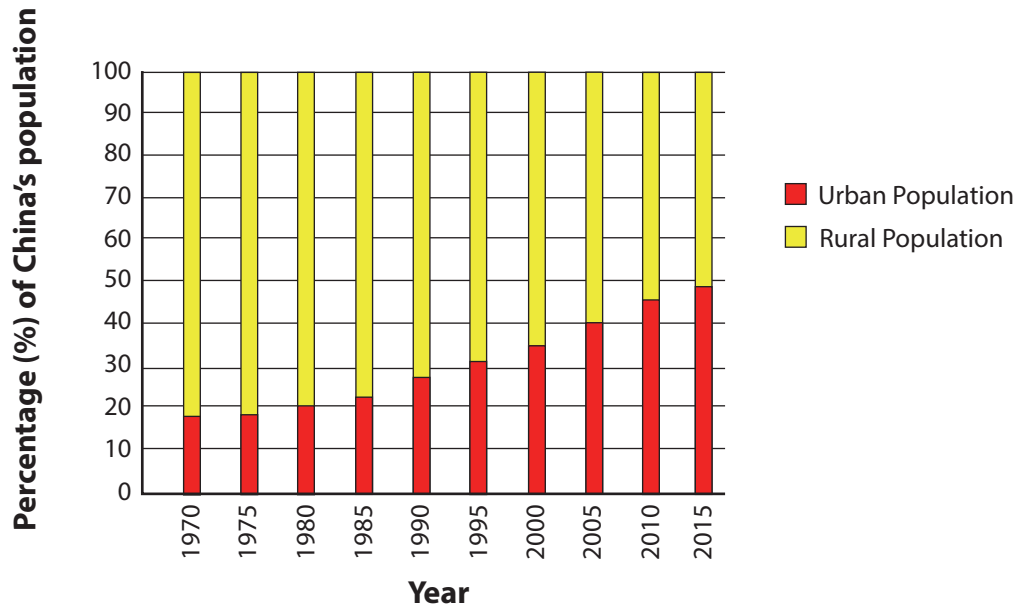


Figure 8

(a) Study Figure 8.

Describe the changes in China's population between 1970 and 2015.

(2)

.....

.....

.....

.....

(b) Suggest **one** reason for rural–urban migration.

(2)

.....

.....

.....

.....



BLANK PAGE



BLANK PAGE



BLANK PAGE

