

Please check the examination details below before entering your candidate information

Candidate surname

Other names

Centre Number

Candidate Number

Pearson Edexcel
Level 1/Level 2 GCSE (9–1)

--	--	--	--	--

--	--	--	--	--

Thursday 16 May 2019

Morning (Time: 1 hour 45 minutes)

Paper Reference **1CH0/1F**

Chemistry

Paper 1

Foundation Tier

You must have:
Calculator, ruler

Total Marks

Instructions

- Use **black** ink or ball-point pen.
- **Fill in the boxes** at the top of this page with your name, centre number and candidate number.
- Answer **all** questions.
- Answer the questions in the spaces provided – *there may be more space than you need.*
- Calculators may be used.
- Any diagrams may NOT be accurately drawn, unless otherwise indicated.
- You must **show all your working out** with **your answer clearly identified** at the **end of your solution**.

Information

- The total mark for this paper is 100
- The marks for **each** question are shown in brackets – *use this as a guide as to how much time to spend on each question.*
- In questions marked with an **asterisk (*)**, marks will be awarded for your ability to structure your answer **logically** showing how the points that you make are related or follow on from each other where appropriate.
- There is a periodic table on the back cover of the paper.

Advice

- Read each question carefully before you start to answer it.
- Try to answer every question.
- Check your answers if you have time at the end.

Turn over ►

P56406A

©2019 Pearson Education Ltd.

1/1/1/1/1/1/




Pearson

Answer ALL questions. Write your answers in the spaces provided.

Some questions must be answered with a cross in a box .
If you change your mind about an answer, put a line through the box and then mark your new answer with a cross .

1 The three states of matter are solid, liquid and gas.

(a) What is the name of the change of state when a liquid changes into a solid? (1)

- A condensation
- B evaporation
- C freezing
- D melting

(b) A gas was left to cool to form a liquid.

Figure 1 shows how the temperature of the substance changed with time.

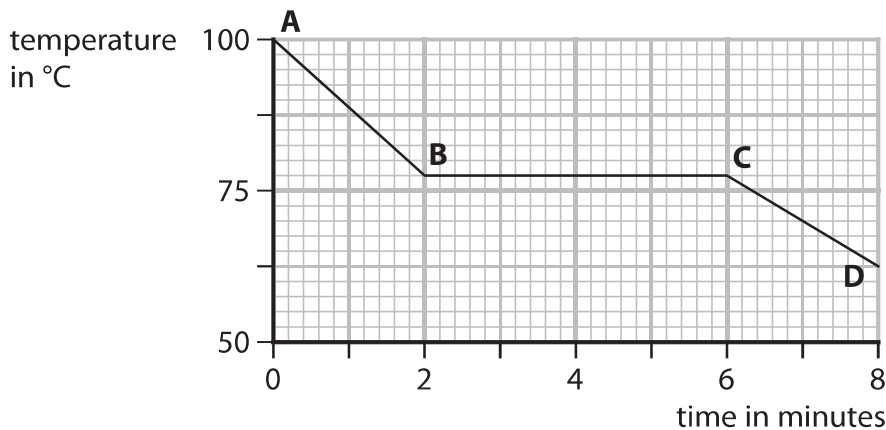


Figure 1

From **A** to **B** the substance is a gas.

From **C** to **D** the substance is a liquid.

(i) State the time when the gas first started to form a liquid.

(1)

..... minutes

(ii) Calculate the number of minutes it took from the gas first starting to form a liquid until the substance was completely liquid.

(1)

..... minutes

DO NOT WRITE IN THIS AREA

DO NOT WRITE IN THIS AREA

DO NOT WRITE IN THIS AREA



(c) Figure 2 shows the melting points and boiling points of four substances, **W**, **X**, **Y** and **Z**.

substance	melting point in °C	boiling point in °C
W	-220	-188
X	-101	-34
Y	-7	59
Z	114	184

Figure 2

Using the information in Figure 2

(i) give the letter of the substance that is a solid at 20°C

(1)

.....

(ii) give the letter of a substance that is a liquid at 50°C

(1)

.....



- (d) The diagrams below show particles in five different structures.
The different circles show different particles.

Draw one straight line from each substance to its structure.

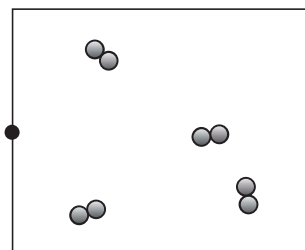
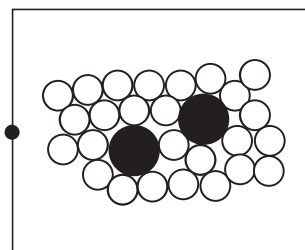
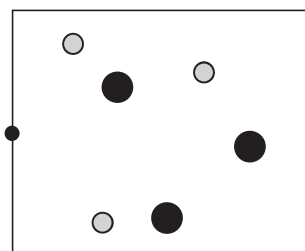
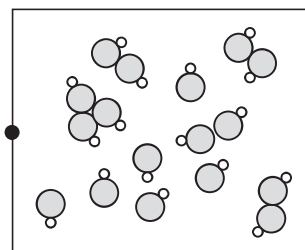
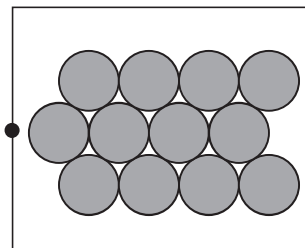
(2)

substance

**particles in
structures**

solid zinc metal, Zn(s)

hydrogen gas, H₂(g)



(Total for Question 1 = 7 marks)



DO NOT WRITE IN THIS AREA

DO NOT WRITE IN THIS AREA

DO NOT WRITE IN THIS AREA

BLANK PAGE



2 Alloys are mixtures of two or more metals.

(a) Alloy steels are formed when other metals are mixed with iron.

Cutlery is made of stainless steel.

Give **two** reasons why cutlery is made of stainless steel rather than iron.


(2)

1

2

(b) Brass is an alloy of copper.

Figure 3 shows the brass pins of an electric plug.



brass pins

(Source: © Adamlee01/Shutterstock)

Figure 3

Brass is harder than copper.

Give a reason why using a harder substance for the pins is an advantage.

(1)

.....

.....



(c) Magnalium is an alloy of magnesium and aluminium.
It is often used for aircraft parts.

(i) Figure 4 shows information about pure aluminium and magnalium.

substance	density in g cm^{-3}	relative strength	resistance to corrosion
aluminium	2.7	low	high
magnalium	2.0	high	very high

Figure 4

Explain, using the information in Figure 4, why magnalium, rather than pure aluminium, is used for aircraft parts.

(3)

(ii) 63.0 g of magnalium contains 3.15 g of magnesium.

Calculate the percentage by mass of magnesium in the magnalium.

(2)

percentage of magnesium in the magnalium =

(Total for Question 2 = 8 marks)



- 3 (a) Transition metals and group 1 metals have many properties in common because they are all metals.

However some properties of transition metals are different from properties of group 1 metals.

Which is a property of transition metals but not of group 1 metals?

(1)

- A good conductor of electricity
- B high melting point
- C malleable
- D shiny when cut or polished

- (b) Copper is a transition metal.

Magnesium reacts with copper sulfate solution to form copper and a solution of magnesium sulfate.

Magnesium sulfate solution is colourless.

Describe **two** changes you would **see** during this reaction.

(2)

1

2

- (c) Rusting is the corrosion of iron.

- (i) Water is one of two substances needed for iron to rust.

Give the name of the **other** substance needed for iron to rust.

(1)

.....



(ii) The rate of rusting can be increased by using sea water.

Describe a simple experiment to compare how much an iron nail rusts in sea water when compared to water.

(3)

.....

.....

.....

.....

.....

.....

(iii) Rusting can be prevented by galvanising iron which involves coating the iron with a layer of zinc.

A small iron bucket was galvanised. The surface area of the bucket was 0.68 m^2 .

Calculate the mass of zinc required to coat the surface of the bucket with a layer of zinc of 200 g m^{-2} .

(1)

.....

.....

.....

mass of zinc = g

(Total for Question 3 = 8 marks)

DO NOT WRITE IN THIS AREA

DO NOT WRITE IN THIS AREA

DO NOT WRITE IN THIS AREA



DO NOT WRITE IN THIS AREA

DO NOT WRITE IN THIS AREA

DO NOT WRITE IN THIS AREA

BLANK PAGE



4 Mixtures of substances can be separated using different techniques.

(a) Which of the following is a mixture of substances?

(1)

- A air
- B carbon dioxide
- C gold
- D titanium

(b) Figure 5 shows the apparatus that a student set up to obtain pure water from ink.

There are three mistakes in the way the apparatus has been set up.

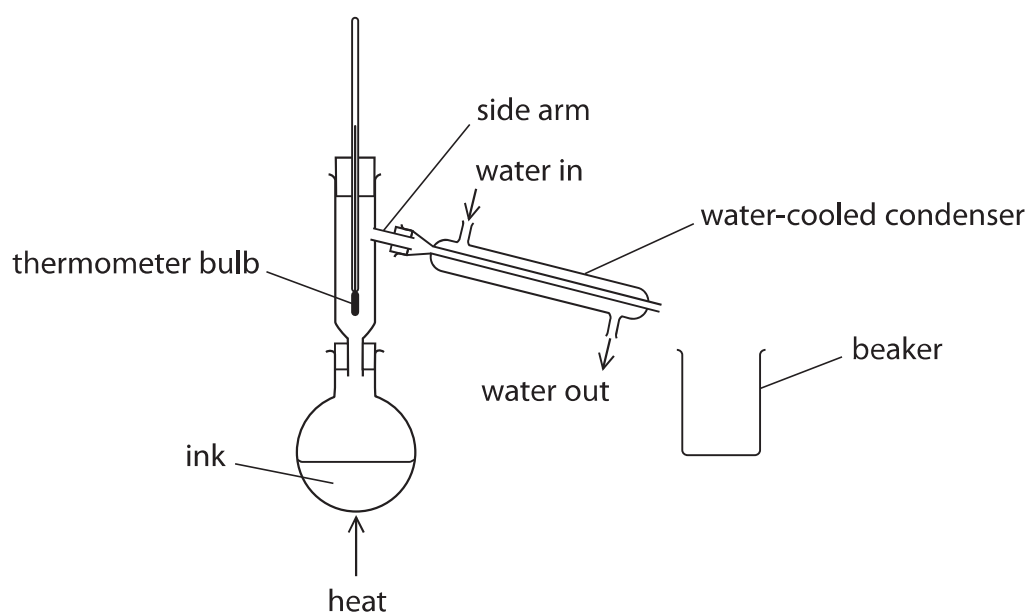


Figure 5

(i) One mistake is that the bulb of the thermometer is too low.

The bulb of the thermometer should be level with the side arm.

Give a reason why the bulb of the thermometer should be level with the side arm.

(1)

(ii) State **one** other mistake in Figure 5.

(1)



- (c) Paper chromatography is used to separate the substances in five different food colourings, **P**, **Q**, **R**, **S** and **T**.

Figure 6 shows the chromatogram at the end of the experiment.

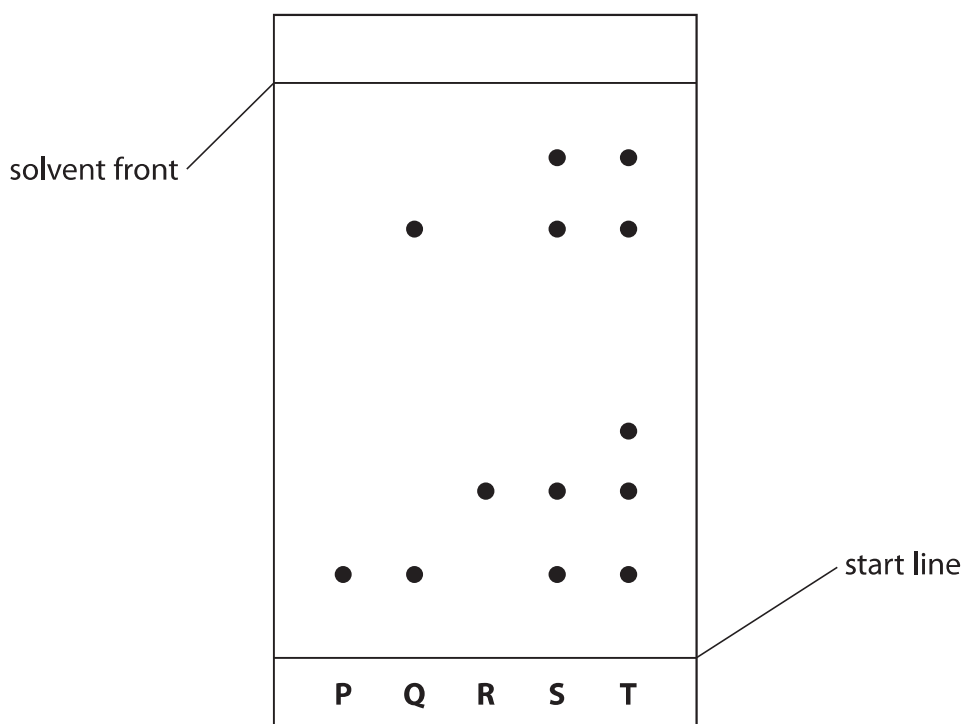


Figure 6

- (i) The steps needed to carry out the chromatography experiment are listed below. They are not in the correct order.

- 1 leave the solvent to rise up the paper
- 2 put solvent in the beaker
- 3 draw a start line on the piece of paper
- 4 place the paper in the beaker
- 5 remove the paper when the solvent is near the top
- 6 put small spots of the food colourings on the start line

List the steps in the correct order.

The first two steps have been done for you.

(2)

2	3				
---	---	--	--	--	--



(ii) Explain, using Figure 6, which food colouring contains the greatest number of coloured substances.

(2)

.....

.....

.....

.....

(iii) During chromatography of the food colourings, the solvent front moved 8.00 cm and the food colouring **R** moved 2.30 cm.

Calculate the R_f value for food colouring **R**.
Give your answer to two significant figures.

(2)

.....

.....

.....

.....

R_f value =

(Total for Question 4 = 9 marks)

DO NOT WRITE IN THIS AREA

DO NOT WRITE IN THIS AREA

DO NOT WRITE IN THIS AREA



5 (a) The reactivity of copper, magnesium and zinc was investigated. Each metal was placed separately in dilute hydrochloric acid. The amount of effervescence was observed.

(i) The same mass of metal was used in each experiment. Which piece of apparatus should be used to find the mass of metal used? (1)

A a balance

B a pipette

C a stopwatch

D a thermometer

(ii) State **two** variables, apart from the mass of the metals, that should be controlled in this investigation. (2)

1

2

(iii) Magnesium produces the most vigorous effervescence. Copper does not produce any effervescence.

Give the reason why copper does not produce any effervescence. (1)

(iv) The magnesium reacts with dilute hydrochloric acid to form magnesium chloride solution and hydrogen gas.

The equation for the reaction is



Fill in the missing state symbols in the spaces provided. (2)



(b) Potassium carbonate reacts with dilute sulfuric acid to form potassium sulfate.

(i) Potassium sulfate contains potassium ions, K^+ , and sulfate ions, SO_4^{2-} .

Write the formula of potassium sulfate.

(1)

(ii) Equal volumes of a solution of potassium carbonate were reacted separately with an excess of dilute sulfuric acid solution. Pure dry samples of potassium sulfate were obtained from the resulting solutions.

The experiment was repeated three times using the same conditions.

The masses of potassium sulfate obtained were

- experiment 1 = 5.22 g
- experiment 2 = 5.24 g
- experiment 3 = 5.21 g

Calculate the mean mass of potassium sulfate obtained, giving your answer to two decimal places.

(2)

.....

.....

.....

.....

mean mass of potassium sulfate = g

(Total for Question 5 = 9 marks)



6 Metals are extracted from substances naturally occurring in the Earth's crust.

(a) Which of these metals is usually found uncombined in the Earth's crust?

(1)

- A calcium
- B gold
- C iron
- D magnesium

(b) Zinc can be extracted by heating zinc oxide with carbon.

The products are zinc and carbon dioxide.

(i) Write the word equation for this reaction.

(2)

(ii) In this reaction zinc oxide loses oxygen.

State the type of reaction taking place when an oxide loses oxygen.

(1)

(c) Aluminium is extracted from aluminium oxide by electrolysis.
Aluminium oxide is made up of ions.

(i) The formula of aluminium oxide is Al_2O_3 .

Give the number of ions in the formula Al_2O_3 .

(1)

(ii) Complete the balanced equation for the overall reaction by putting numbers in the spaces.

(2)



(d) (i) The environmental impact of a product is assessed in a life-cycle assessment.

The stages in this assessment are given below.
They are not in the correct order.

- A disposal of the product
- B manufacturing the product
- C obtaining and processing the raw materials
- D using the product

List the stages of the life-cycle assessment, using letters **A, B, C, D**, in the correct order from start to finish.

(2)

--	--	--	--

(ii) Aluminium can be obtained by recycling aluminium waste.

Give **two** advantages of obtaining aluminium by recycling aluminium waste rather than mining the raw material and extracting aluminium from that raw material.

(2)

1

.....

2

.....

(Total for Question 6 = 11 marks)



7 (a) Fertilisers contain compounds that promote plant growth.


(i) State the name of an element in these compounds that promotes plant growth. (1)

.....

(ii) Potassium nitrate is present in some fertilisers.

Potassium nitrate is formed by the reaction of potassium hydroxide solution with nitric acid.

Complete the balanced equation for this reaction. (2)



(b) In the Haber process, hydrogen and nitrogen react to form ammonia.



(i) The \rightleftharpoons symbol in the word equation shows that the reaction goes forwards and backwards at the same time.

Give the name of this type of reaction. (1)

.....

(ii) State the formula of a molecule of ammonia. (1)

.....



(iii) Figure 7 shows a graph of world ammonia production, in millions of tonnes, from 1945 to 2015.

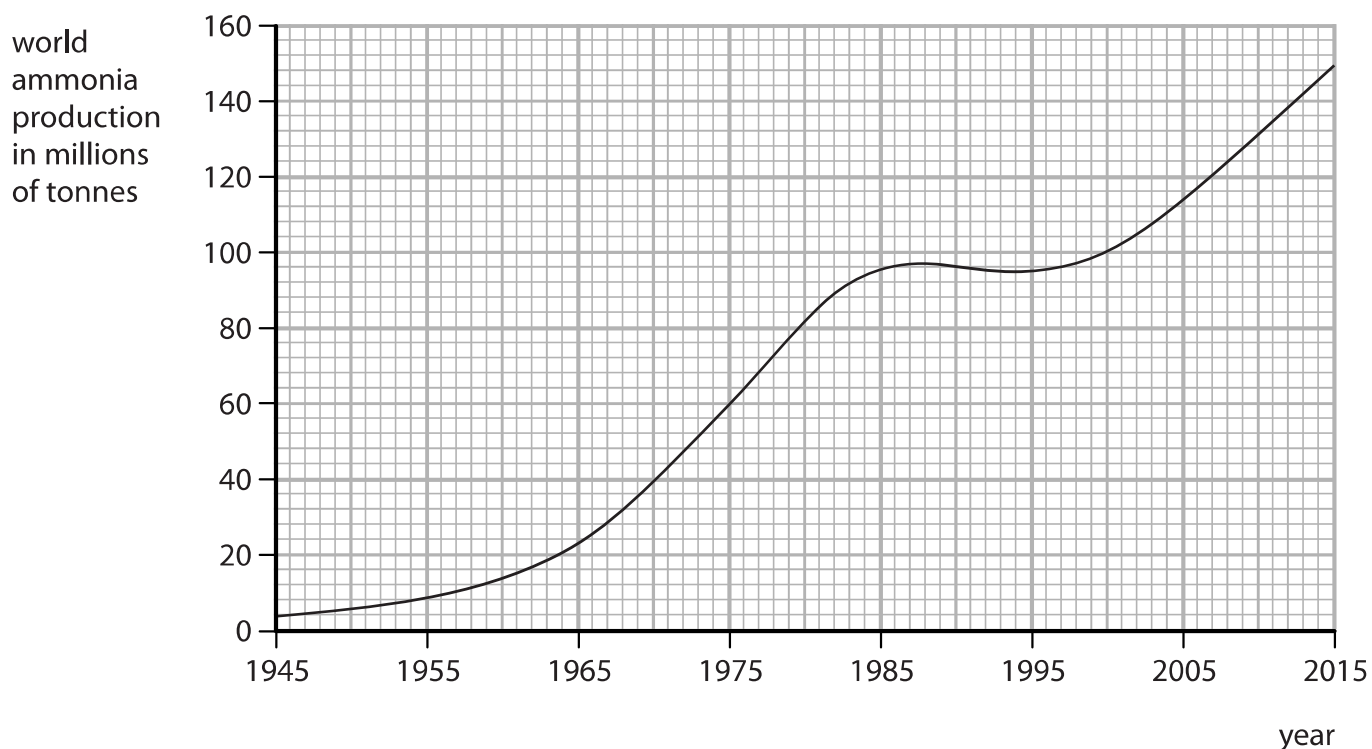


Figure 7

State the overall trend in world ammonia production from 1945 to 2015.

(1)

.....

.....

.....

(c) Hydrogen can also be used in a hydrogen-oxygen fuel cell.

Give the name of the product formed in this fuel cell.

(1)

.....



DO NOT WRITE IN THIS AREA

DO NOT WRITE IN THIS AREA

DO NOT WRITE IN THIS AREA

Handwriting practice area with 28 horizontal dotted lines.

(Total for Question 7 = 13 marks)



(ii) All atoms of element **E** in this sample contain

(1)

A 5 protons

B 5 neutrons

C 6 protons

D 6 neutrons

(c) Element **X** has an atomic number of 18.

State the electronic configuration of an atom of element **X**.

(1)

(d) In an experiment, 3.5 g of element **A** reacted with 4.0 g of element **G** to form a compound.

Calculate the empirical formula of this compound.
(relative atomic masses: **A** = 7, **G** = 16)

You must show your working.

(3)

empirical formula of this compound =



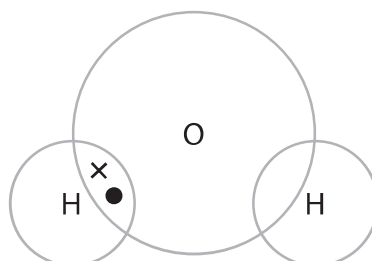
(e) An oxygen atom has six electrons in its outer shell.

A hydrogen atom has one electron in its outer shell.

Complete the dot and cross diagram of a molecule of water, H_2O .

Show outer shell electrons only.

(2)



(Total for Question 8 = 12 marks)



DO NOT WRITE IN THIS AREA

DO NOT WRITE IN THIS AREA

DO NOT WRITE IN THIS AREA

BLANK PAGE



9 (a) Water, acidified with sulfuric acid, is decomposed by electrolysis.
The water is decomposed to produce hydrogen and oxygen.

(i) A sample of hydrogen is mixed with air and ignited.

State what would happen.

(1)

(ii) Throughout the experiment the volume of hydrogen and the volume of oxygen are measured at two-minute intervals.

The results are shown in Figure 9.

time in minutes	volume of hydrogen in cm^3	volume of oxygen in cm^3
0	0	0
2	4	2
4	8	4
6	12	6
8	16	8

Figure 9

Describe, using the data in Figure 9, what the results show about the volumes of hydrogen and of oxygen produced in this experiment.

(2)



(b) Molten lead bromide is electrolysed.

The products of this electrolysis are

(1)

- A hydrogen and bromine
- B hydrogen and oxygen
- C lead and bromine
- D lead and oxygen

(c) Calcium nitrate and calcium carbonate are both ionic compounds.

Calcium nitrate mixed with water behaves as an electrolyte.

Calcium carbonate mixed with water does not behave as an electrolyte.

Explain, in terms of solubility and movement of ions, this difference in behaviour.

(2)

.....

.....

.....

.....



*(d) Impure copper can be purified using electrolysis.

In this electrolysis

- the anode is made of impure copper
- the cathode is made from pure copper
- the electrolyte is copper sulfate solution.

The apparatus at the start of the experiment is shown in Figure 10.

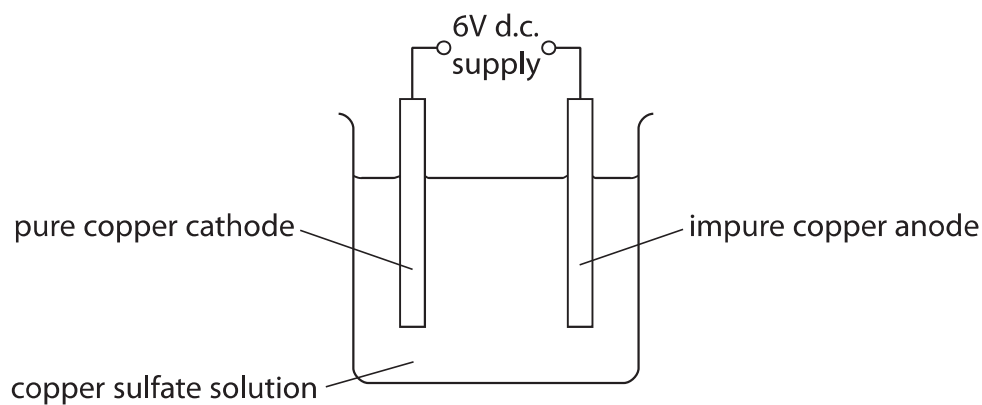


Figure 10

During the electrolysis three observations are made

- the sizes of both the anode and the cathode change
- a solid appears directly beneath the anode
- the colour of the copper sulfate solution does not change.

Explain all three observations.

(6)



DO NOT WRITE IN THIS AREA

DO NOT WRITE IN THIS AREA

DO NOT WRITE IN THIS AREA

Handwriting practice area with 20 horizontal dotted lines.

(Total for Question 9 = 12 marks)



10 Calcium carbonate decomposes on heating to form calcium oxide and carbon dioxide.



- (a) 8.000 g of CaCO_3 was heated strongly for about 10 minutes. 6.213 g of solid remained. Calculate the mass of carbon dioxide gas given off.

(1)

.....
.....
.....

mass of carbon dioxide = g

- (b) A second sample of calcium carbonate is strongly heated in a crucible until there is no further loss in mass. The mass of calcium oxide remaining in the crucible is 5.450 g.

- (i) The theoretical yield of calcium oxide in this experiment is 5.600 g.

Calculate the percentage yield of calcium oxide.

(2)

.....
.....
.....
.....
.....

percentage yield =

- (ii) The mass of solid left in the crucible is less than the theoretical mass of calcium oxide that should be obtained.

A possible reason for this is that

(1)

- A some solid was lost from the crucible
 B the solid remaining absorbed some water from the air
 C some carbon dioxide remained in the crucible
 D the decomposition was incomplete



- (c) Another sample of calcium carbonate is heated and the mass of solid remaining is measured each minute.

The results are shown in Figure 11.

time in minutes	0	1	2	3	4	5	6	7
mass of solid remaining in g	9.0	8.1	7.2	6.4	6.0	5.6	5.3	5.2

Figure 11

- (i) Explain the trend shown by the data in Figure 11.

(2)

.....

.....

.....

.....

- (ii) It is impossible to be sure from this data that the reaction is complete.

State why.

(1)

.....

.....

.....



- (d) (i) Calculate the relative formula mass of calcium carbonate, CaCO_3 .
(relative atomic masses: C = 12, O = 16, Ca = 40)

(2)

relative formula mass =

- (ii) Calculate the atom economy for the formation of calcium oxide in this reaction.



You must show your working.

(relative atomic masses: C = 12, O = 16, Ca = 40;
relative formula mass: calcium oxide = 56)

(2)

atom economy = %

(Total for Question 10 = 11 marks)**TOTAL FOR PAPER = 100 MARKS**

DO NOT WRITE IN THIS AREA

DO NOT WRITE IN THIS AREA

DO NOT WRITE IN THIS AREA

BLANK PAGE



DO NOT WRITE IN THIS AREA

DO NOT WRITE IN THIS AREA

DO NOT WRITE IN THIS AREA

BLANK PAGE



DO NOT WRITE IN THIS AREA

DO NOT WRITE IN THIS AREA

DO NOT WRITE IN THIS AREA

BLANK PAGE



The periodic table of the elements

1	2	3	4	5	6	7	0	
7 Li lithium 3	9 Be beryllium 4	23 Na sodium 11	24 Mg magnesium 12	39 K potassium 19	40 Ca calcium 20	85 Rb rubidium 37	88 Sr strontium 38	133 Cs caesium 55
56 Fe iron 26	55 Mn manganese 25	59 Co cobalt 27	59 Ni nickel 28	63.5 Cu copper 29	65 Zn zinc 30	101 Ru ruthenium 44	103 Rh rhodium 45	106 Pd palladium 46
45 Sc scandium 21	48 Ti titanium 22	51 V vanadium 23	52 Cr chromium 24	91 Zr zirconium 40	93 Nb niobium 41	96 Mo molybdenum 42	108 Ag silver 47	112 Cd cadmium 48
133 Cs caesium 55	137 Ba barium 56	139 La* lanthanum 57	178 Hf hafnium 72	181 Ta tantalum 73	184 W tungsten 74	186 Re rhenium 75	190 Os osmium 76	192 Ir iridium 77
111 B boron 5	12 C carbon 6	14 N nitrogen 7	16 O oxygen 8	19 F fluorine 9	20 Ne neon 10	27 Al aluminium 13	28 Si silicon 14	31 P phosphorus 15
115 In indium 49	119 Sn tin 50	122 Sb antimony 51	128 Te tellurium 52	127 I iodine 53	131 Xe xenon 54	204 Tl thallium 81	207 Pb lead 82	209 Bi bismuth 83
70 Ga gallium 31	73 Ge germanium 32	75 As arsenic 33	79 Se selenium 34	80 Br bromine 35	84 Kr krypton 36	201 Hg mercury 80	197 Au gold 79	195 Pt platinum 78
101 Ru ruthenium 44	103 Rh rhodium 45	106 Pd palladium 46	112 Cd cadmium 48	108 Ag silver 47	112 Cd cadmium 48	204 Tl thallium 81	207 Pb lead 82	209 Bi bismuth 83
190 Os osmium 76	192 Ir iridium 77	195 Pt platinum 78	201 Hg mercury 80	197 Au gold 79	201 Hg mercury 80	[210] At astatine 85	[209] Po polonium 84	[222] Rn radon 86
103 Rh rhodium 45	106 Pd palladium 46	108 Ag silver 47	112 Cd cadmium 48	127 I iodine 53	131 Xe xenon 54	115 In indium 49	119 Sn tin 50	122 Sb antimony 51
101 Ru ruthenium 44	103 Rh rhodium 45	106 Pd palladium 46	112 Cd cadmium 48	108 Ag silver 47	112 Cd cadmium 48	115 In indium 49	119 Sn tin 50	122 Sb antimony 51
101 Ru ruthenium 44	103 Rh rhodium 45	106 Pd palladium 46	112 Cd cadmium 48	108 Ag silver 47	112 Cd cadmium 48	115 In indium 49	119 Sn tin 50	122 Sb antimony 51
101 Ru ruthenium 44	103 Rh rhodium 45	106 Pd palladium 46	112 Cd cadmium 48	108 Ag silver 47	112 Cd cadmium 48	115 In indium 49	119 Sn tin 50	122 Sb antimony 51
101 Ru ruthenium 44	103 Rh rhodium 45	106 Pd palladium 46	112 Cd cadmium 48	108 Ag silver 47	112 Cd cadmium 48	115 In indium 49	119 Sn tin 50	122 Sb antimony 51
101 Ru ruthenium 44	103 Rh rhodium 45	106 Pd palladium 46	112 Cd cadmium 48	108 Ag silver 47	112 Cd cadmium 48	115 In indium 49	119 Sn tin 50	122 Sb antimony 51
101 Ru ruthenium 44	103 Rh rhodium 45	106 Pd palladium 46	112 Cd cadmium 48	108 Ag silver 47	112 Cd cadmium 48	115 In indium 49	119 Sn tin 50	122 Sb antimony 51
101 Ru ruthenium 44	103 Rh rhodium 45	106 Pd palladium 46	112 Cd cadmium 48	108 Ag silver 47	112 Cd cadmium 48	115 In indium 49	119 Sn tin 50	122 Sb antimony 51
101 Ru ruthenium 44	103 Rh rhodium 45	106 Pd palladium 46	112 Cd cadmium 48	108 Ag silver 47	112 Cd cadmium 48	115 In indium 49	119 Sn tin 50	122 Sb antimony 51
101 Ru ruthenium 44	103 Rh rhodium 45	106 Pd palladium 46	112 Cd cadmium 48	108 Ag silver 47	112 Cd cadmium 48	115 In indium 49	119 Sn tin 50	122 Sb antimony 51
101 Ru ruthenium 44	103 Rh rhodium 45	106 Pd palladium 46	112 Cd cadmium 48	108 Ag silver 47	112 Cd cadmium 48	115 In indium 49	119 Sn tin 50	122 Sb antimony 51
101 Ru ruthenium 44	103 Rh rhodium 45	106 Pd palladium 46	112 Cd cadmium 48	108 Ag silver 47	112 Cd cadmium 48	115 In indium 49	119 Sn tin 50	122 Sb antimony 51
101 Ru ruthenium 44	103 Rh rhodium 45	106 Pd palladium 46	112 Cd cadmium 48	108 Ag silver 47	112 Cd cadmium 48	115 In indium 49	119 Sn tin 50	122 Sb antimony 51
101 Ru ruthenium 44	103 Rh rhodium 45	106 Pd palladium 46	112 Cd cadmium 48	108 Ag silver 47	112 Cd cadmium 48	115 In indium 49	119 Sn tin 50	122 Sb antimony 51
101 Ru ruthenium 44	103 Rh rhodium 45	106 Pd palladium 46	112 Cd cadmium 48	108 Ag silver 47	112 Cd cadmium 48	115 In indium 49	119 Sn tin 50	122 Sb antimony 51
101 Ru ruthenium 44	103 Rh rhodium 45	106 Pd palladium 46	112 Cd cadmium 48	108 Ag silver 47	112 Cd cadmium 48	115 In indium 49	119 Sn tin 50	122 Sb antimony 51
101 Ru ruthenium 44	103 Rh rhodium 45	106 Pd palladium 46	112 Cd cadmium 48	108 Ag silver 47	112 Cd cadmium 48	115 In indium 49	119 Sn tin 50	122 Sb antimony 51
101 Ru ruthenium 44	103 Rh rhodium 45	106 Pd palladium 46	112 Cd cadmium 48	108 Ag silver 47	112 Cd cadmium 48	115 In indium 49	119 Sn tin 50	122 Sb antimony 51
101 Ru ruthenium 44	103 Rh rhodium 45	106 Pd palladium 46	112 Cd cadmium 48	108 Ag silver 47	112 Cd cadmium 48	115 In indium 49	119 Sn tin 50	122 Sb antimony 51
101 Ru ruthenium 44	103 Rh rhodium 45	106 Pd palladium 46	112 Cd cadmium 48	108 Ag silver 47	112 Cd cadmium 48	115 In indium 49	119 Sn tin 50	122 Sb antimony 51
101 Ru ruthenium 44	103 Rh rhodium 45	106 Pd palladium 46	112 Cd cadmium 48	108 Ag silver 47	112 Cd cadmium 48	115 In indium 49	119 Sn tin 50	122 Sb antimony 51
101 Ru ruthenium 44	103 Rh rhodium 45	106 Pd palladium 46	112 Cd cadmium 48	108 Ag silver 47	112 Cd cadmium 48	115 In indium 49	119 Sn tin 50	122 Sb antimony 51
101 Ru ruthenium 44	103 Rh rhodium 45	106 Pd palladium 46	112 Cd cadmium 48	108 Ag silver 47	112 Cd cadmium 48	115 In indium 49	119 Sn tin 50	122 Sb antimony 51
101 Ru ruthenium 44	103 Rh rhodium 45	106 Pd palladium 46	112 Cd cadmium 48	108 Ag silver 47	112 Cd cadmium 48	115 In indium 49	119 Sn tin 50	122 Sb antimony 51
101 Ru ruthenium 44	103 Rh rhodium 45	106 Pd palladium 46	112 Cd cadmium 48	108 Ag silver 47	112 Cd cadmium 48	115 In indium 49	119 Sn tin 50	122 Sb antimony 51
101 Ru ruthenium 44	103 Rh rhodium 45	106 Pd palladium 46	112 Cd cadmium 48	108 Ag silver 47	112 Cd cadmium 48	115 In indium 49	119 Sn tin 50	122 Sb antimony 51
101 Ru ruthenium 44	103 Rh rhodium 45	106 Pd palladium 46	112 Cd cadmium 48	108 Ag silver 47	112 Cd cadmium 48	115 In indium 49	119 Sn tin 50	122 Sb antimony 51
101 Ru ruthenium 44	103 Rh rhodium 45	106 Pd palladium 46	112 Cd cadmium 48	108 Ag silver 47	112 Cd cadmium 48	115 In indium 49	119 Sn tin 50	122 Sb antimony 51
101 Ru ruthenium 44	103 Rh rhodium 45	106 Pd palladium 46	112 Cd cadmium 48	108 Ag silver 47	112 Cd cadmium 48	115 In indium 49	119 Sn tin 50	122 Sb antimony 51
101 Ru ruthenium 44	103 Rh rhodium 45	106 Pd palladium 46	112 Cd cadmium 48	108 Ag silver 47	112 Cd cadmium 48	115 In indium 49	119 Sn tin 50	122 Sb antimony 51
101 Ru ruthenium 44	103 Rh rhodium 45	106 Pd palladium 46	112 Cd cadmium 48	108 Ag silver 47	112 Cd cadmium 48	115 In indium 49	119 Sn tin 50	122 Sb antimony 51
101 Ru ruthenium 44	103 Rh rhodium 45	106 Pd palladium 46	112 Cd cadmium 48	108 Ag silver 47	112 Cd cadmium 48	115 In indium 49	119 Sn tin 50	122 Sb antimony 51
101 Ru ruthenium 44	103 Rh rhodium 45	106 Pd palladium 46	112 Cd cadmium 48	108 Ag silver 47	112 Cd cadmium 48	115 In indium 49	119 Sn tin 50	122 Sb antimony 51
101 Ru ruthenium 44	103 Rh rhodium 45	106 Pd palladium 46	112 Cd cadmium 48	108 Ag silver 47	112 Cd cadmium 48	115 In indium 49	119 Sn tin 50	122 Sb antimony 51
101 Ru ruthenium 44	103 Rh rhodium 45	106 Pd palladium 46	112 Cd cadmium 48	108 Ag silver 47	112 Cd cadmium 48	115 In indium 49	119 Sn tin 50	122 Sb antimony 51
101 Ru ruthenium 44	103 Rh rhodium 45	106 Pd palladium 46	112 Cd cadmium 48	108 Ag silver 47	112 Cd cadmium 48	115 In indium 49	119 Sn tin 50	122 Sb antimony 51
101 Ru ruthenium 44	103 Rh rhodium 45	106 Pd palladium 46	112 Cd cadmium 48	108 Ag silver 47	112 Cd cadmium 48	115 In indium 49	119 Sn tin 50	122 Sb antimony 51
101 Ru ruthenium 44	103 Rh rhodium 45	106 Pd palladium 46	112 Cd cadmium 48	108 Ag silver 47	112 Cd cadmium 48	115 In indium 49	119 Sn tin 50	122 Sb antimony 51
101 Ru ruthenium 44	103 Rh rhodium 45	106 Pd palladium 46	112 Cd cadmium 48	108 Ag silver 47	112 Cd cadmium 48	115 In indium 49	119 Sn tin 50	122 Sb antimony 51
101 Ru ruthenium 44	103 Rh rhodium 45	106 Pd palladium 46	112 Cd cadmium 48	108 Ag silver 47	112 Cd cadmium 48	115 In indium 49	119 Sn tin 50	122 Sb antimony 51
101 Ru ruthenium 44	103 Rh rhodium 45	106 Pd palladium 46	112 Cd cadmium 48	108 Ag silver 47	112 Cd cadmium 48	115 In indium 49	119 Sn tin 50	122 Sb antimony 51
101 Ru ruthenium 44	103 Rh rhodium 45	106 Pd palladium 46	112 Cd cadmium 48	108 Ag silver 47	112 Cd cadmium 48	115 In indium 49	119 Sn tin 50	122 Sb antimony 51
101 Ru ruthenium 44	103 Rh rhodium 45	106 Pd palladium 46	112 Cd cadmium 48	108 Ag silver 47	112 Cd cadmium 48	115 In indium 49	119 Sn tin 50	122 Sb antimony 51
101 Ru ruthenium 44	103 Rh rhodium 45	106 Pd palladium 46	112 Cd cadmium 48	108 Ag silver 47	112 Cd cadmium 48	115 In</		