

GCSE (9–1) Chemistry A (Gateway Science)

J248/04 Paper 4 (Higher Tier)

Sample Question Paper

H

Date – Morning/Afternoon

Time allowed: 1 hour 45 minutes

You must have:

- the Data Sheet

You may use:

- a scientific or graphical calculator
- a ruler



First name					
Last name					
Centre number					
Candidate number					

INSTRUCTIONS

- Use black ink. You may use an HB pencil for graphs and diagrams.
- Complete the boxes above with your name, centre number and candidate number.
- Answer **all** the questions.
- Write your answer to each question in the space provided.
- Additional paper may be used if required but you must clearly show your candidate number, centre number and question number(s).
- Do **not** write in the bar codes.

INFORMATION

- The total mark for this paper is **90**.
- The marks for each question are shown in brackets [].
- Quality of extended response will be assessed in questions marked with an asterisk (*).
- This document consists of **32** pages. Any blank pages are indicated.

SECTION A

Answer **all** the questions.

You should spend a maximum of 30 minutes on this section.

1 Which statement is correct for a Group 1 element?

A It dissolves in water to form a bleach.

B It is a non-metal.

C It is an inert gas.

D It reacts with water to form hydrogen.

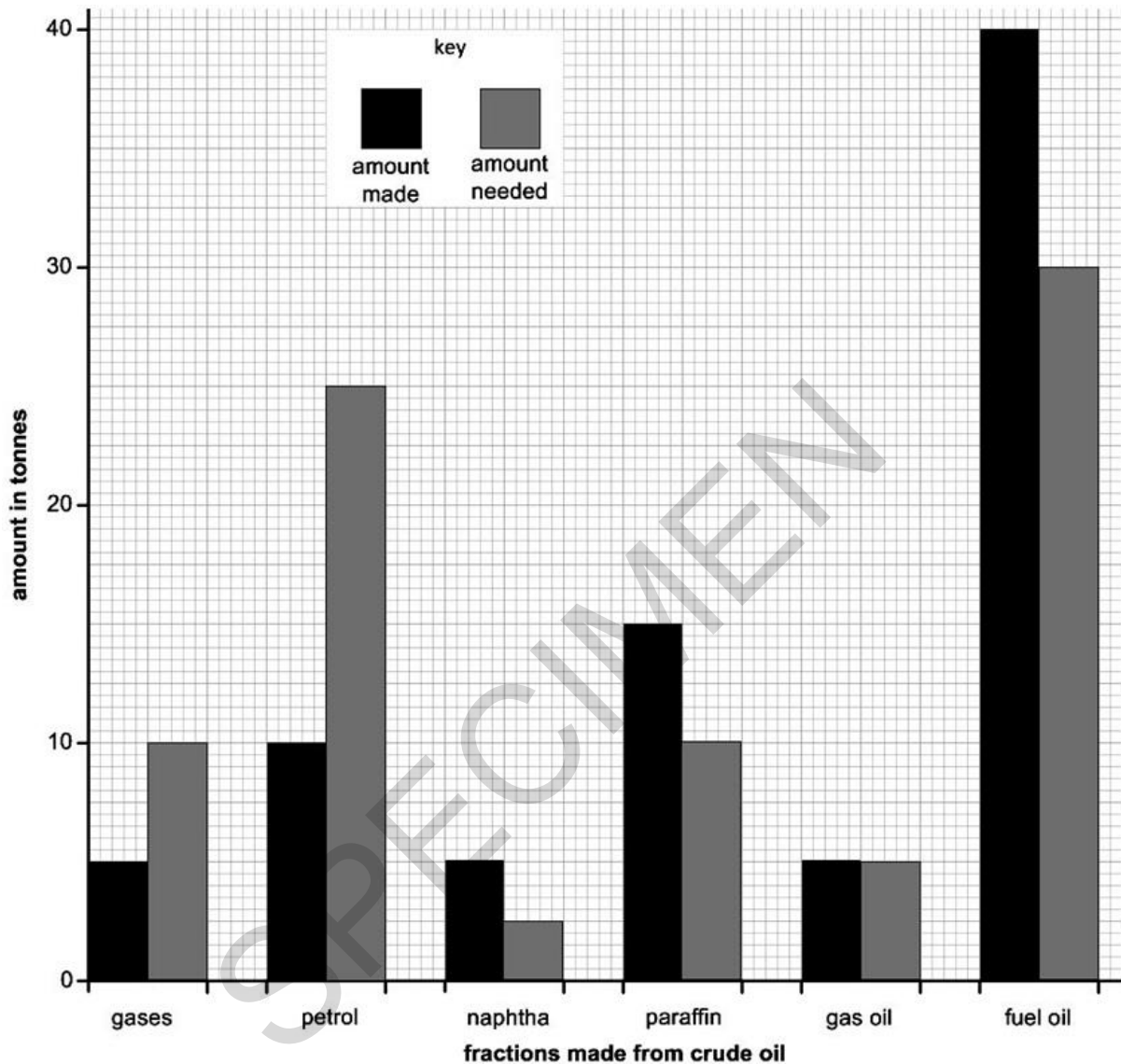
Your answer

[1]

SPECIMEN

- 2 The bar chart shows the amount of some of the fractions made from 100 tonnes of crude oil by fractional distillation.

It also shows the amount of each fraction needed for everyday uses.



Cracking converts large molecules into smaller more useful molecules to make the supply match the demand.

Which fractions are most likely to be cracked to make the supply match the demand?

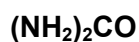
- A gas oil and fuel oil
- B gas oil and petrol
- C naphtha, paraffin and fuel oil
- D petrol and gases

Your answer

[1]

3 Urea is a fertiliser.

The formula for urea is:



A student makes 1 mole of urea from 2 moles of ammonia.

What is the mass of urea that the student makes?

- A 43.0 g
- B 44.0 g
- C 58.0 g
- D 60.0 g

Your answer

[1]

4 A student is testing sodium carbonate solution.

She adds barium chloride solution followed by excess dilute hydrochloric acid.

Which of these observations would **not** be seen?

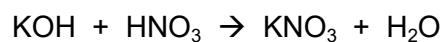
- A colourless solution at the end
- B gas bubbles when the dilute acid is added
- C white precipitate formed when the dilute acid is added
- D white precipitate formed when the barium chloride solution is added

Your answer

[1]

- 5 A student is making a fertiliser called potassium nitrate, KNO_3 .

Look at the equation for the reaction she uses.



The relative formula masses, M_r , of each compound are shown in the table.

Compound	Formula	Relative formula mass
potassium hydroxide	KOH	56.1
nitric acid	HNO_3	63.0
potassium nitrate	KNO_3	101.1
water	H_2O	18.0

What is the atom economy for the reaction to make potassium nitrate?

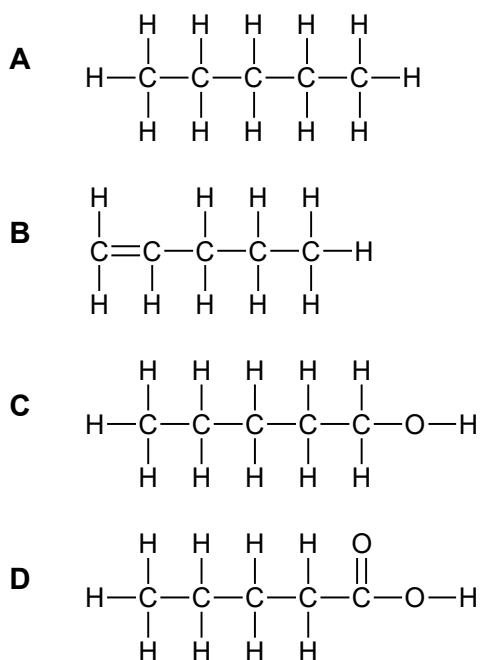
Assume that water is a waste product.

- A** 15.1%
- B** 47.1%
- C** 52.9%
- D** 84.9%

Your answer

[1]

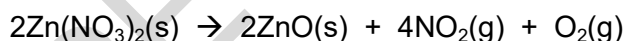
6 Which displayed formula includes the functional group of an alcohol?



Your answer

[1]

7 Zinc nitrate thermally decomposes to give two gases.



A student heats 1.89 g of zinc nitrate until there is no further reaction.

What is the total volume of gas, measured at room temperature and pressure, made in this reaction?

Assume that one mole of gas occupies a volume of 24 dm^3 at room temperature and pressure.

The molar mass of zinc nitrate is 189 g/mol .

A 0.12 dm^3

B 0.48 dm^3

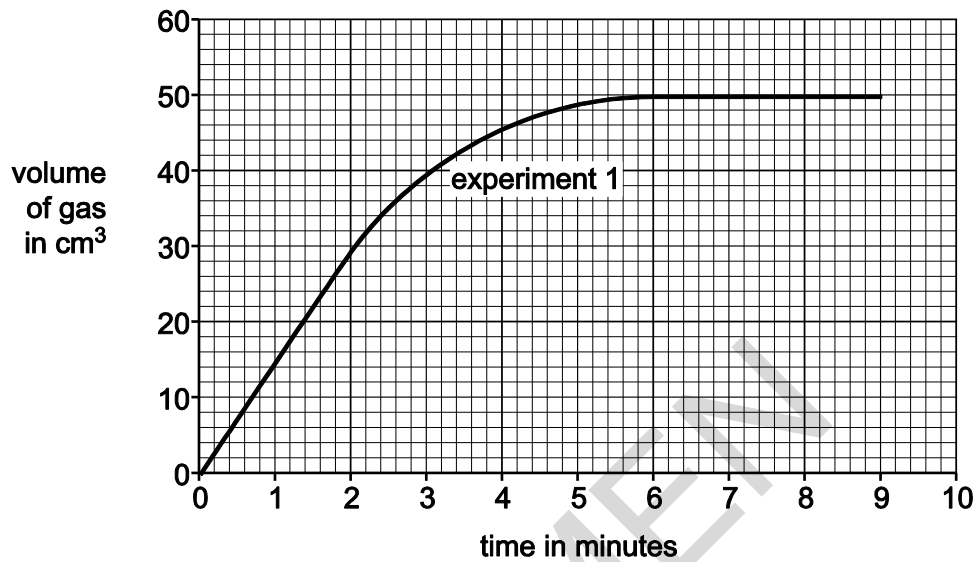
C 0.60 dm^3

D 1.20 dm^3

Your answer

[1]

- 8 A student investigates the reaction between calcium carbonate and hydrochloric acid. He measures the volume of gas made every minute. Look at the graph. It shows his results for the experiment.



What is the rate of reaction between 0 and 2 minutes in cm³/minute?

- A 7.5 cm³/min
- B 15 cm³/min
- C 30 cm³/min
- D 60 cm³/min

Your answer

[1]

- 9 A student investigates the reaction between 1.0 g of calcium carbonate and 20 cm³ of 1.0 mol/dm³ hydrochloric acid at 25°C.

The student does two experiments. He uses different sized pieces of calcium carbonate for each experiment.

The rate of reaction is greater in the first experiment.

Which is the best explanation for this?

- A Small pieces of calcium carbonate have a larger surface area resulting in less frequent collisions.
- B Large pieces of calcium carbonate have a larger surface area resulting in less frequent collisions.
- C Large pieces of calcium carbonate have a smaller surface area resulting in more frequent collisions.
- D Small pieces of calcium carbonate have a larger surface area resulting in more frequent collisions.

Your answer

[1]

- 10 These statements explain how scientists think our modern-day atmosphere was formed.

- 1 Plants evolved and used carbon dioxide during photosynthesis to make oxygen.
- 2 As the Earth cooled down water fell as rain resulting in the formation of the oceans.
- 3 The atmosphere today consists of nitrogen, oxygen and a small amount of carbon dioxide.
- 4 Volcanoes gave out ammonia and carbon dioxide as well as methane and water vapour.
- 5 Ammonia was changed by bacteria in the soil into nitrogen gas.

What is the correct order that these events happened?

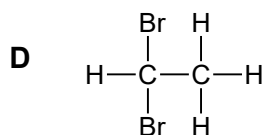
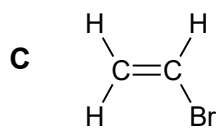
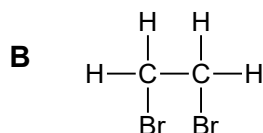
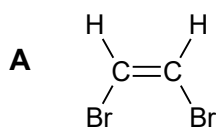
- A 4, 2, 5, 1, 3
- B 2, 4, 5, 3, 1
- C 4, 1, 5, 2, 3
- D 1, 4, 2, 5, 3

Your answer

[1]

- 11 A student bubbles ethene gas into bromine water.

Which displayed formula shows the product of this reaction?



Your answer

[1]

- 12 Which of the following procedures is the most suitable for preparing a 0.100 mol/dm^3 solution of sodium carbonate?

The relative formula mass, M_r , of sodium carbonate is 106.

- A** Dissolving 10.6 g of sodium carbonate in water to make 1.0 dm^3 of solution.
B Dissolving 10.6 g of sodium carbonate in 0.10 dm^3 of water.
C Dissolving 10.6 g of sodium carbonate in 1.0 dm^3 of water.
D Dissolving 106 g of sodium carbonate in water to make 1.0 dm^3 of solution.

Your answer

[1]

- 13 A student reacts some metals with different salt solutions and records her results.

She places a tick (✓) in her results table if she sees a chemical change and a cross (x) if there is no reaction.

Some of the boxes are blanked out.

	Magnesium chloride	Silver nitrate	Copper(II) sulfate	Iron(II) sulfate
Magnesium		✓	✓	✓
Silver	x		x	x
Copper	x	✓		x
Iron	x	✓	✓	

Which metal has the **least** tendency to form a positive ion?

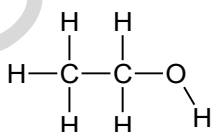
- A copper
 B iron
 C magnesium
 D silver

Your answer

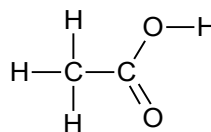
[1]

- 14 A student heats compound X with acidified potassium manganate(VII) solution.

The product of the reaction is compound Y.



X



Y

What is the colour change seen during this reaction?

- A colourless to orange
 B colourless to purple
 C orange to colourless
 D purple to colourless

Your answer

[1]

15 A condensation polymer is made from two monomers.

One of the monomers has two –OH groups in its molecules.

The other monomer has two –COOH groups in its molecule.

Which one of the following is the polymer?

- A** polyamide
- B** poly(chloroethene)
- C** polyester
- D** DNA

Your answer

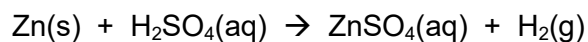
[1]

SPECIMEN

SECTION B

Answer **all** the questions.

- 16 Zinc and dilute sulfuric acid react to make hydrogen.



Inga measures the rate of this reaction by measuring the **loss in mass** of the reaction mixture.

She finds that the change in mass is very small and difficult to measure.

- (a) Draw a labelled diagram to show a **better way** of measuring the rate of this reaction.

[3]

- (b) The reaction between zinc and dilute sulfuric acid is slow.

Inga decides to try and find a catalyst for this reaction.

She tests four possible substances.

Each time she adds 0.5 g of the substance to 1.0 g of zinc and 25 cm³ of dilute sulfuric acid.

Look at her table of results.

Substance	Colour of substance at start	Colour of substance at end	Relative rate of reaction
no substance			1
calcium sulfate powder	white	white	1
copper powder	pink	pink	10
copper(II) sulfate powder	blue	pink	30
manganese(IV) oxide powder	black	black	1

(i) It is important to do the reaction with **only** zinc and dilute sulfuric acid.

Explain why.

.....
..... [1]

(ii) It is important to do all of the reactions with the same concentration of acid.

Explain why.

.....
..... [1]

(iii) Which of the substances could be a catalyst for the reaction between zinc and dilute sulfuric acid?

.....

Explain your answer.

.....
.....
.....
..... [2]

(iv) There is not enough evidence to confirm which substance is a catalyst.

Suggest an extra piece of experimental evidence that could be collected to confirm which substance is a catalyst.

.....
..... [1]

(v) Inga does the experiment with copper, zinc and dilute sulfuric acid again.

This time she uses a lump of copper rather than copper powder.

Predict, with reasons, the relative rate of reaction.

.....

.....

..... [2]

SPECIMEN

BLANK PAGE

PLEASE TURN OVER FOR THE NEXT QUESTION

SPECIMEN

17 The Group 7 elements are known as the halogens.

The halogens have similar chemical properties.

Their physical properties vary with increasing atomic number.

(a) Look at the table of information about the halogens.

Halogen	Atomic symbol	Atomic number	Molecular formula	Atomic radius in pm	Reaction of halogen with sodium iodide solution
fluorine	F	9	F ₂	64	Makes iodine and sodium fluoride
chlorine	Cl	17	Cl ₂	99	Makes iodine and sodium chloride
bromine	Br	35	Br ₂	114
iodine	I	53	I ₂	133	No reaction
astatine	At	85	No reaction

(i) Predict the molecular formula and atomic radius of astatine.

Put your answers in the table.

[2]

(ii) Predict the reaction of bromine with sodium iodide solution.

Put your answer in the table.

[1]

(iii) Explain your answer to (ii) in terms of the reactivity of the halogens.

.....

..... [1]

(b) All halogens react with alkali metals to make a salt.

(i) All halogens have similar chemical reactions.

Explain why in terms of electronic structure.

.....
..... [1]

(ii) Sodium reacts with bromine to make sodium bromide, NaBr.

Construct the **balanced symbol** equation for this reaction.

..... [2]

(iii) What is the formula of the product of the reaction between astatine and potassium?

..... [1]

18 Chemical tests are used to identify gases, anions and cations.

Leila has an unknown solution.

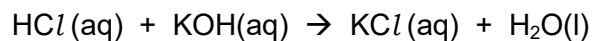
She thinks that the solution contains copper(II) ions and bromide ions.

Describe the chemical tests she does to confirm the presence of these two ions in the solution.

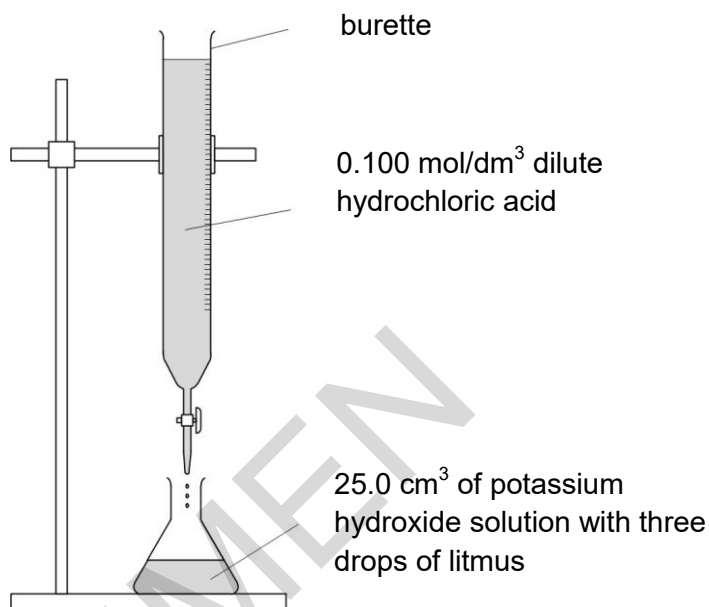
.....
.....
.....
.....
.....
.....
.....
.....
..... [4]

19 Sarah does three titrations with dilute hydrochloric acid and potassium hydroxide solution.

Hydrochloric acid neutralises the alkali potassium hydroxide.

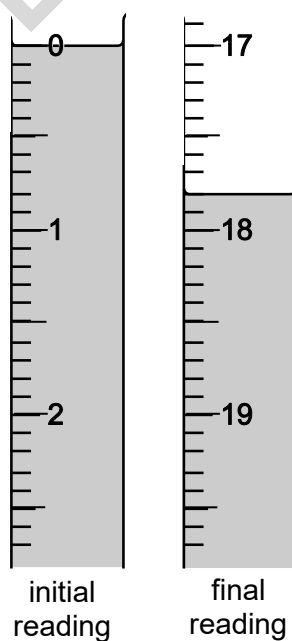


Look at the apparatus she uses.



Look at the diagrams. They show parts of the burette during the first titration.

First titration



Here is Sarah's results table:

Titration number	1	2	3
final reading (cm ³)		37.5	32.1
initial reading (cm ³)		20.4	15.0
titre (volume of acid added) (cm ³)		17.1	17.1

- (a) Use the diagrams and table to help you calculate the mean titre.

Explain your answer.

.....

Mean titre = cm³

[2]

- (b) Sarah uses 25.0 cm³ of potassium hydroxide solution, KOH.

She also uses hydrochloric acid with a concentration of 0.100 mol/dm³.

Calculate the concentration, in mol/dm³, of the KOH(aq).

Concentration of KOH(aq) = mol/dm³

[2]

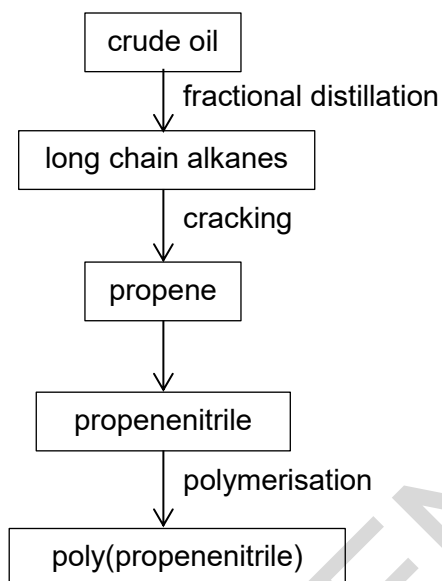
- (c) Use your answer to (b) to calculate the concentration of the KOH(aq) in g/dm³.

Concentration of KOH(aq) = g/dm³

[2]

20 Poly(propenenitrile) is an addition polymer.

Look at the flow chart. It shows how poly(propenenitrile) is made from crude oil.



(a) Crude oil is a complex mixture of hydrocarbons.

Fractional distillation separates this mixture.

Explain, in terms of intermolecular forces, fractional distillation.

.....

.....

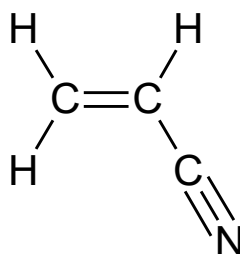
.....

.....

.....

[2]

(b) Look at the displayed formula for propenenitrile.



Propenenitrile is an unsaturated compound.

How you can tell from the displayed formula?

.....

.....

[1]

- 21 The reversible reaction between carbon dioxide and hydrogen makes methane and water.



- (a) In a sealed container this reversible reaction forms a **dynamic equilibrium**.

What is meant by the term dynamic equilibrium?

Refer to both concentration and rate of reaction in your answer.

.....

.....

.....

..... [2]

- (b) Kayvan investigates this reaction.

He predicts that 11.0 g of carbon dioxide should make 4.0 g of methane.

In an experiment, he finds that 11.0 g of carbon dioxide makes 2.2 g of methane.

Calculate the percentage yield of methane.

.....

.....

.....

Percentage yield =% [2]

22 Ammonium sulfate, $(\text{NH}_4)_2\text{SO}_4$, is a fertiliser.

Ammonium sulfate can be manufactured from ammonia and sulfuric acid.

(a) The Haber Process is used to manufacture ammonia. Scientists think that the Haber Process is one of the most important chemical reactions.

Explain the importance of the Haber Process in agriculture.

.....
.....
..... **[2]**

(b) The Contact Process is used to manufacture sulfuric acid.

The Contact Process involves the reaction between sulfur dioxide and oxygen.

The conditions used are 450°C and about 10 atmospheres pressure.

(i) If the temperature is increased to 500°C the rate of reaction changes.

Describe and explain this change in rate of reaction.

.....
.....
..... **[2]**

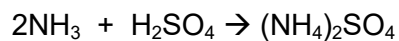
(ii) If the pressure is reduced to 5 atmospheres the rate of reaction changes.

Describe and explain this change in rate of reaction.

.....
.....
..... **[2]**

- (c) Ammonium sulfate is a salt.

It is made using the reaction between the alkali ammonia and sulfuric acid.



- (i) Describe how a sample of solid ammonium sulfate is prepared in a laboratory.

Explain why this method is not suitable to be used industrially.

.....

.....

.....

.....

.....

.....

.....

[4]

- (ii) Predict the maximum mass of ammonium sulfate that can be made from 51 tonnes of ammonia.

Maximum mass = tonnes

[2]

23 Carbon dioxide is one of several greenhouse gases.

It is made by the combustion of fossil fuels such as coal, gas and oil.

Look at the table. It shows the amount of carbon dioxide produced in a large city in the years 2010 and 2016.

Between the years 2010 and 2016 the percentage increase of atmospheric carbon dioxide has been about 2.5%. During the same time, the increase in mean global temperature has been only 0.05°C.

Source of carbon dioxide	Carbon dioxide produced (tonnes)		Percentage increase (%)
	in 2010	in 2016	
Homes	500 000	600 000	20
Factories and industry	500 000	750 000	50
Transport	1 000 000	1 000 000	0
Electricity generation	750 000	900 000

(a) Look at the row for electricity generation.

Calculate the percentage increase of carbon dioxide produced.

Percentage increase = % **[2]**

(b) Some scientists think there is a link between the amount of fossil fuels burnt and climate change.

The data in the table does **not** support this view.

Suggest reasons why.

.....

.....

.....

..... **[2]**

24 Kasia investigates the corrosion of different metals.

She places a small strip of each metal in different samples of air.

She leaves the metals for one week before collecting her results.

Look at her table of results.

Metal	Original appearance of metal	Appearance of metal after one week in			
		moist acidic air	moist alkaline air	dry air	moist air
aluminium	shiny silver	dull silver	dull silver	shiny silver	shiny silver
copper	shiny red-orange	dull red-orange	green red-orange	shiny red-orange	dull red-orange
iron	shiny silver	brown coating	brown coating	shiny silver	brown coating
magnesium	shiny silver	whitish coating	dull silver	shiny silver	dull silver
zinc	shiny silver	dark coating	dark coating	shiny silver	dull silver

(a) Suggest, with a reason, one change to the experimental procedure that would improve the quality of the results.

.....
 [1]

(b) Explain the conclusions that can be made from Kasia's results.

.....

 [3]

25 Aluminium is extracted from its ore using electrolysis.

Copper is extracted from its ore by heating with carbon.

(a) Explain why different methods are used to extract aluminium and copper.

.....

.....

.....

..... [2]

(b) Molten aluminium oxide contains Al^{3+} and O^{2-} ions.

The electrolysis of molten aluminium oxide makes aluminium and oxygen.

(i) Write the **balanced symbol** equation for the electrode reaction that happens at the cathode.

Use the symbol e^- to represent an electron.

..... [1]

(ii) Solid aluminium oxide cannot be electrolysed.

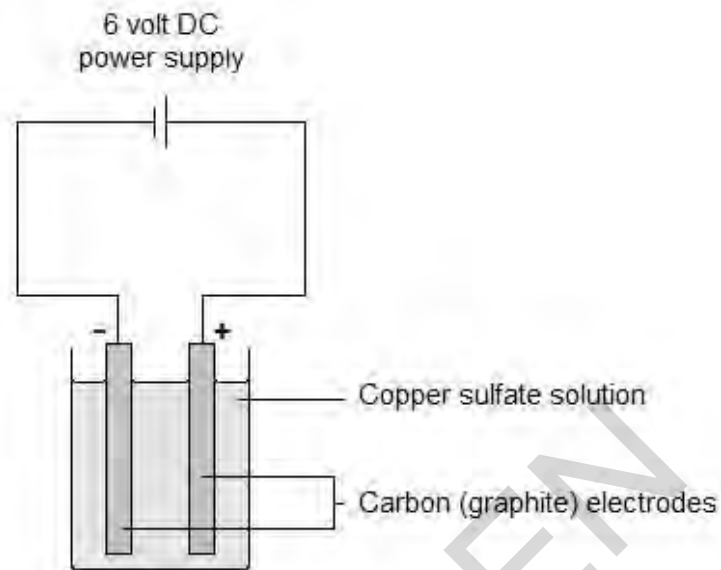
Explain why.

.....

..... [1]

(c) Copper is also made by electrolysis of copper sulfate solution.

Look at the diagram of the apparatus used in this electrolysis.



Describe what you would **see** at each of the electrodes.

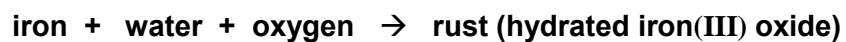
At the anode:

At the cathode:

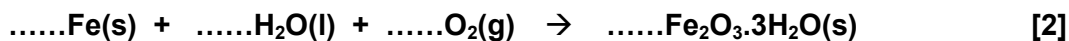
[2]

26 Iron rusts when it gets wet.

(a) The word equation for rusting is



Balance the symbol equation for the formation of rust.



(b) A 1.0 kg iron bar is left outside in the rain.

All of the iron turns to rust.

The rust forms at a rate of 60 g per day.

Calculate how long it will take for the iron bar to turn completely to rust.

Give your answer to the nearest day.

..... days

[6]

END OF QUESTION PAPER