

Please check the examination details below before entering your candidate information

Candidate surname

Other names

**Pearson Edexcel
Level 3 GCE**

Centre Number

--	--	--	--	--

Candidate Number

--	--	--	--	--

Tuesday 4 June 2019

Afternoon (Time: 1 hour 45 minutes)

Paper Reference **9CH0/01**

Chemistry

Advanced

Paper 1: Advanced Inorganic and Physical Chemistry

**Candidates must have: Data Booklet
Scientific calculator
Ruler**

Total Marks

Instructions

- Use **black** ink or **black** ball-point pen.
- **Fill in the boxes** at the top of this page with your name, centre number and candidate number.
- Answer **all** questions.
- Answer the questions in the spaces provided
– *there may be more space than you need.*

Information

- The total mark for this paper is 90.
- The marks for **each** question are shown in brackets
– *use this as a guide as to how much time to spend on each question.*
- For the question marked with an **asterisk** (*), marks will be awarded for your ability to structure your answer logically showing the points that you make are related or follow on from each other where appropriate.
- A Periodic Table is printed on the back cover of this paper.

Advice

- Read each question carefully before you start to answer it.
- Show all your working in calculations and include units where appropriate.
- Check your answers if you have time at the end.

Turn over ►

P58306A

©2019 Pearson Education Ltd.

1/2/1/1/



Pearson

Answer ALL questions.

Some questions must be answered with a cross in a box .
If you change your mind about an answer, put a line through the box
and then mark your new answer with a cross .

1 This question is about atoms, molecules and ions.

(a) The numbers of subatomic particles in an ^{18}O atom are

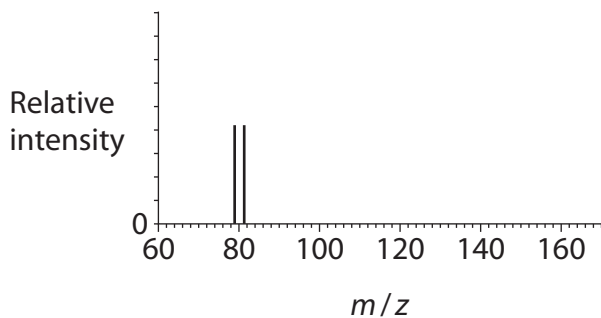
(1)

- A 8 protons, 10 neutrons and 8 electrons
 B 9 protons, 9 neutrons and 9 electrons
 C 10 protons, 8 neutrons and 10 electrons
 D 18 protons, 18 neutrons and 18 electrons

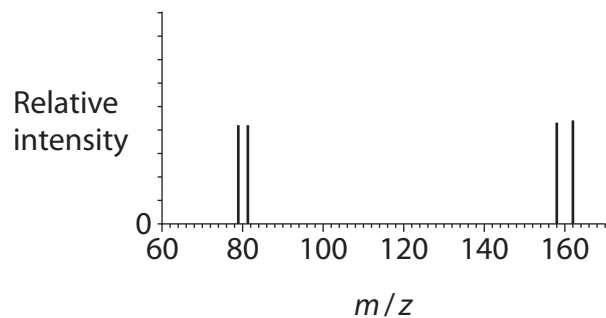
(b) The mass spectrum of a sample of bromine **molecules** with approximately equal proportions of the ^{79}Br and ^{81}Br isotopes is

(1)

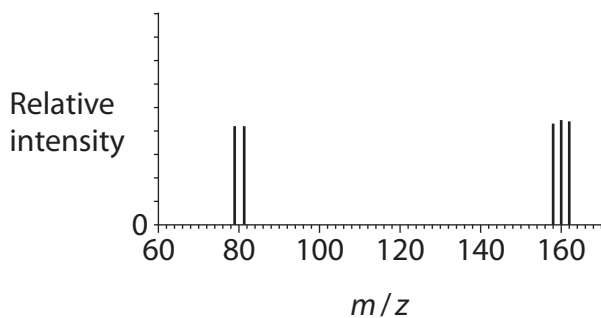
A



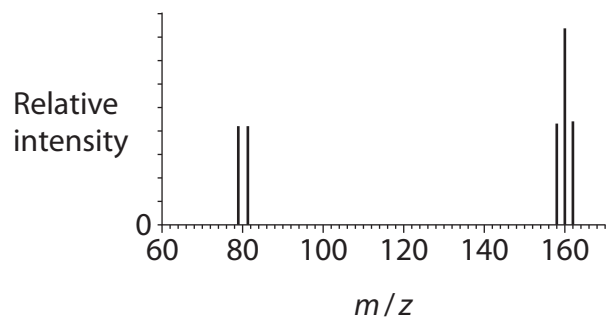
B



C



D



DO NOT WRITE IN THIS AREA

DO NOT WRITE IN THIS AREA

DO NOT WRITE IN THIS AREA



(c) The total number of electrons in **all** the occupied **p** orbitals in a chloride ion, Cl^- , is (1)

- A 5
- B 6
- C 12
- D 18

(d) Which of these isoelectronic ions has the largest ionic radius? (1)

- A N^{3-}
- B O^{2-}
- C Na^+
- D Al^{3+}

(Total for Question 1 = 4 marks)



2 This question is about some redox reactions of chlorine, bromine and iodine.

(a) An **excess** of aqueous potassium bromide was added to chlorine water and the solution turned orange.

(i) Write an equation for this reaction. State symbols are not required.

(1)

(ii) Silver nitrate solution was added to the mixture in (a) and excess dilute ammonia solution was then added to the precipitate formed. Only some of the precipitate dissolved.

Deduce why only **some** of the precipitate dissolved.

(3)

.....

.....

.....

.....

.....

.....

(iii) Aqueous potassium bromide was added to aqueous iodine, instead of chlorine water. There was no reaction.

Give a reason why no reaction occurred.

(1)

.....


.....



(b) Chlorine undergoes disproportionation when it reacts with **hot** aqueous sodium hydroxide solution.

- (i) Complete the ionic equation for this reaction.
State symbols are not required.

(1)



- (ii) Explain, in terms of oxidation numbers, why this is a disproportionation reaction.

(2)

.....

.....

.....

.....

.....

.....

.....

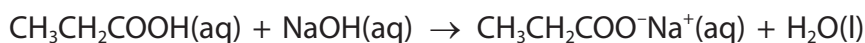
(Total for Question 2 = 8 marks)



3 The standard molar enthalpy change of neutralisation is the enthalpy change when an acid and an alkali react under standard conditions to form one mole of water.

- (a) An experiment was carried out to determine the enthalpy change of neutralisation for the reaction between propanoic acid and sodium hydroxide.

The equation for this reaction is



50.0 cm³ of sodium hydroxide solution, of concentration 1.00 mol dm⁻³, was placed in a polystyrene cup. The initial temperature was measured.

- (i) Which piece of equipment has the **smallest** measurement uncertainty for the measurement of 50.0 cm³ of sodium hydroxide solution?

(1)

	Equipment	Measurement uncertainty for each reading
<input type="checkbox"/>	A burette	±0.05 cm ³
<input type="checkbox"/>	B 50 cm ³ measuring cylinder	±1 cm ³
<input type="checkbox"/>	C 25 cm ³ pipette	±0.06 cm ³
<input type="checkbox"/>	D 50 cm ³ pipette	±0.08 cm ³

- (ii) 50.0 cm³ of propanoic acid solution, of concentration 1.00 mol dm⁻³, was added and thoroughly mixed with the sodium hydroxide solution in the polystyrene cup.

The maximum temperature rise was 6.5 °C.

Calculate the enthalpy change of neutralisation for propanoic acid, in kJ mol⁻¹, giving your answer to the **nearest whole number**.

[Assume density of the mixture = 1.00 g cm⁻³, specific heat capacity of the mixture = 4.18 J g⁻¹ °C⁻¹]

(3)

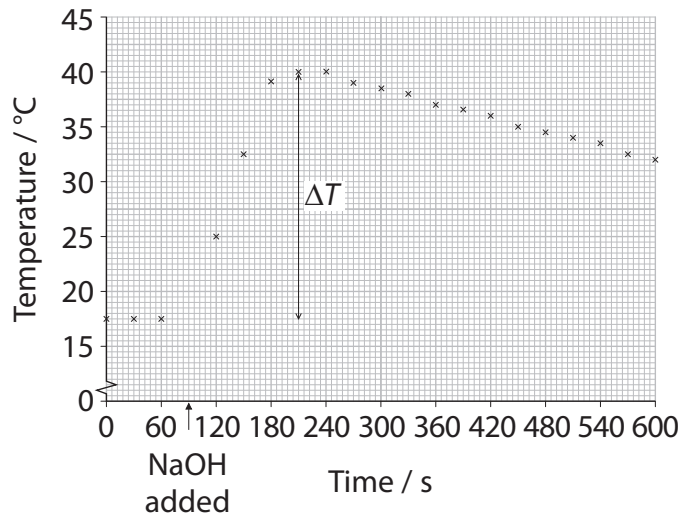


(b) Another experiment was carried out with a solution of ethanoic acid and sodium hydroxide solution of the same concentration.

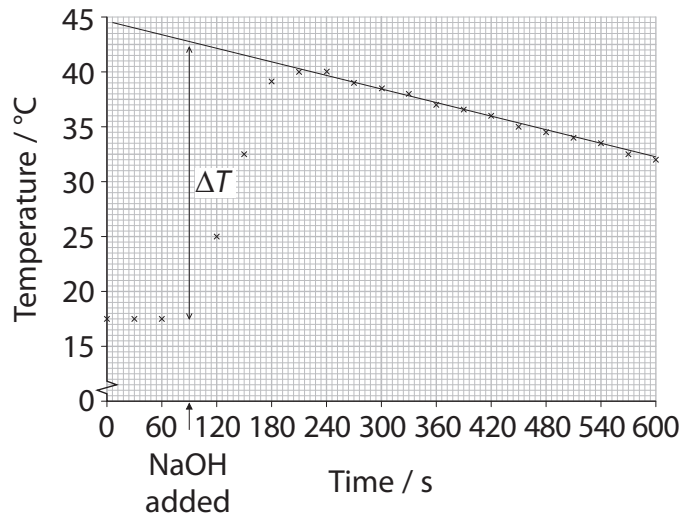
- (i) Which graph shows the correct way that the maximum temperature rise should be determined?

(1)

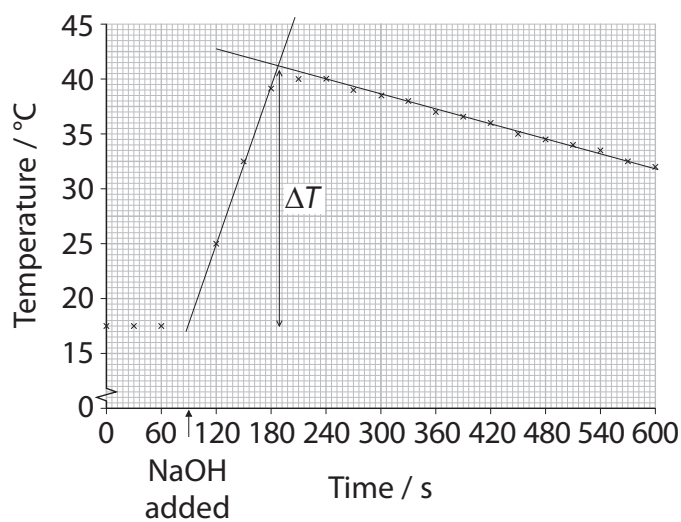
A



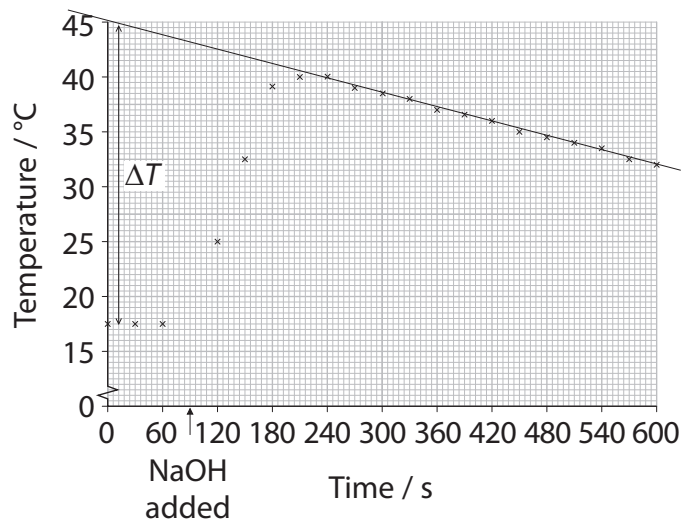
B



C



D



(ii) Explain why the data book value for the standard enthalpy change of neutralisation of ethanoic acid with sodium hydroxide is $-55.2 \text{ kJ mol}^{-1}$ but the value for hydrochloric acid is $-57.1 \text{ kJ mol}^{-1}$.

(2)

.....

.....

.....

.....

.....

.....

.....

(Total for Question 3 = 7 marks)

DO NOT WRITE IN THIS AREA

DO NOT WRITE IN THIS AREA

DO NOT WRITE IN THIS AREA



DO NOT WRITE IN THIS AREA

DO NOT WRITE IN THIS AREA

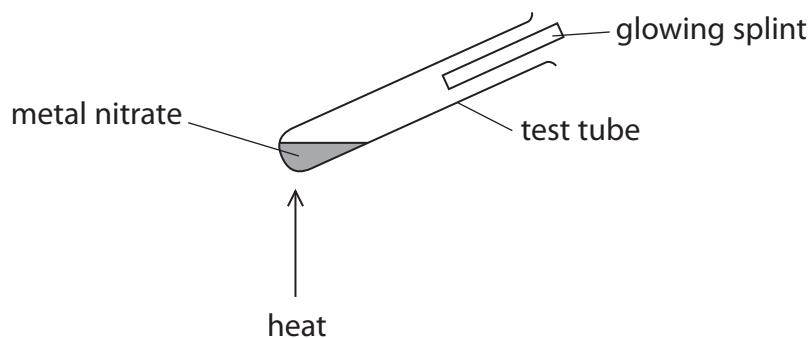
DO NOT WRITE IN THIS AREA

BLANK PAGE



4 Thermal decomposition is the breaking down of a substance by heat.

(a) An experiment was carried out to investigate the thermal decomposition of a metal nitrate using the apparatus shown.



(i) The glowing splint is used as a test for one of the gases given off in this experiment. Identify this gas and the positive result of the test.

(1)

(ii) Give the name and appearance of the other gas given off in this experiment when a Group 2 nitrate is heated.

(1)

(iii) Write the equation for the decomposition if the Group 1 compound, sodium nitrate, was used in this experiment. State symbols are not required.

(1)



(iv) Describe the apparatus that would be used to compare the decomposition of metal carbonates. Include how the rate of decomposition would be compared.

(2)

DO NOT WRITE IN THIS AREA

DO NOT WRITE IN THIS AREA

DO NOT WRITE IN THIS AREA

DO NOT WRITE IN THIS AREA

DO NOT WRITE IN THIS AREA

DO NOT WRITE IN THIS AREA

DO NOT WRITE IN THIS AREA

DO NOT WRITE IN THIS AREA

DO NOT WRITE IN THIS AREA

DO NOT WRITE IN THIS AREA

(b) Explain why magnesium carbonate decomposes much more readily on heating than barium carbonate.

(3)

DO NOT WRITE IN THIS AREA

DO NOT WRITE IN THIS AREA

DO NOT WRITE IN THIS AREA

DO NOT WRITE IN THIS AREA

DO NOT WRITE IN THIS AREA

DO NOT WRITE IN THIS AREA

DO NOT WRITE IN THIS AREA

DO NOT WRITE IN THIS AREA

DO NOT WRITE IN THIS AREA

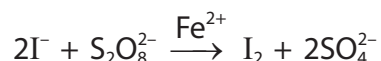
DO NOT WRITE IN THIS AREA

(Total for Question 4 = 8 marks)



5 This is a question about catalysis.

(a) The reaction between iodide ions and peroxodisulfate ions is catalysed by iron(II) ions.



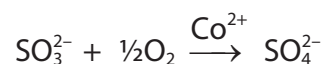
(i) Give a reason why the reaction between iodide ions and peroxodisulfate ions has a high activation energy and is therefore very slow without a catalyst.

(1)

(ii) Explain, with the aid of two equations, how the iron(II) ions catalyse this reaction. State symbols are not required.

(3)

(b) The oxidation of sulfate(IV) ions to sulfate(VI) ions is catalysed by cobalt(II) ions in **acidic** solution. The role of cobalt(II) ions is similar to that of iron(II) ions in (a).

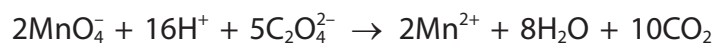


Deduce two ionic equations to show how cobalt(II) ions catalyse the reaction in **acidic** solution. State symbols are not required.

(2)



- (c) The rate of oxidation of ethanedioate ions by manganate(VII) ions starts slowly and then rapidly increases.



What is the catalyst in this reaction?

(1)

- A CO_2
 B H^+
 C Mn^{2+}
 D MnO_4^-

- (d) The trend in the strength of gaseous adsorption by three transition elements is

tungsten > platinum > silver

Silver is not suitable as a replacement for platinum in a catalytic converter because the adsorption of gases is too weak to allow significant chemical reaction.

Give a possible reason why tungsten would also **not** be a suitable replacement for platinum in a catalytic converter. Refer to the mechanism of heterogenous catalysis in your answer.

(1)

.....

.....

.....

.....

(Total for Question 5 = 8 marks)



DO NOT WRITE IN THIS AREA

DO NOT WRITE IN THIS AREA

DO NOT WRITE IN THIS AREA

(b) Explain why both water and carbon dioxide molecules have polar bonds but only water is a polar molecule.

(4)

.....

.....

.....

.....

.....

.....

.....

.....

.....

.....

.....

.....

.....

.....

.....

.....

.....

.....

.....

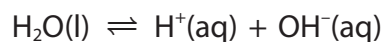
.....

(c) Pure water ionises to form H_3O^+ and OH^- ions, although only to a very small extent. Draw the dot-and-cross diagrams of these ions. Use dots (•) for the hydrogen electrons and crosses (×) for the oxygen electrons.

(2)



(d) An equation for the ionisation of water is



The expression for the ionic product of water is

$$K_w = [\text{H}^+(\text{aq})][\text{OH}^-(\text{aq})]$$

The value of K_w at 310 K is $2.40 \times 10^{-14} \text{ mol}^2 \text{ dm}^{-6}$

(i) Calculate the pH of water at 310 K.

Give your answer to **two** decimal places.

(2)

(ii) Predict, with a reason, whether water is acidic, alkaline or neutral at 310 K.

(2)

.....

.....

.....

.....

(iii) Predict, with a reason, the sign of the enthalpy change for the ionisation of water.

(1)

.....

.....

.....

.....

(Total for Question 6 = 15 marks)



DO NOT WRITE IN THIS AREA

DO NOT WRITE IN THIS AREA

DO NOT WRITE IN THIS AREA

BLANK PAGE



*7 Colour is often used in chemistry to identify substances.

Compare and contrast the origin of the colour of a copper(II) complex with the origin of the colour of the copper(II) ion in a flame test.

You do not need to state any specific colours.

(6)

Area with horizontal dotted lines for writing the answer.

DO NOT WRITE IN THIS AREA

DO NOT WRITE IN THIS AREA

DO NOT WRITE IN THIS AREA



DO NOT WRITE IN THIS AREA

DO NOT WRITE IN THIS AREA

DO NOT WRITE IN THIS AREA

(Total for Question 7 = 6 marks)

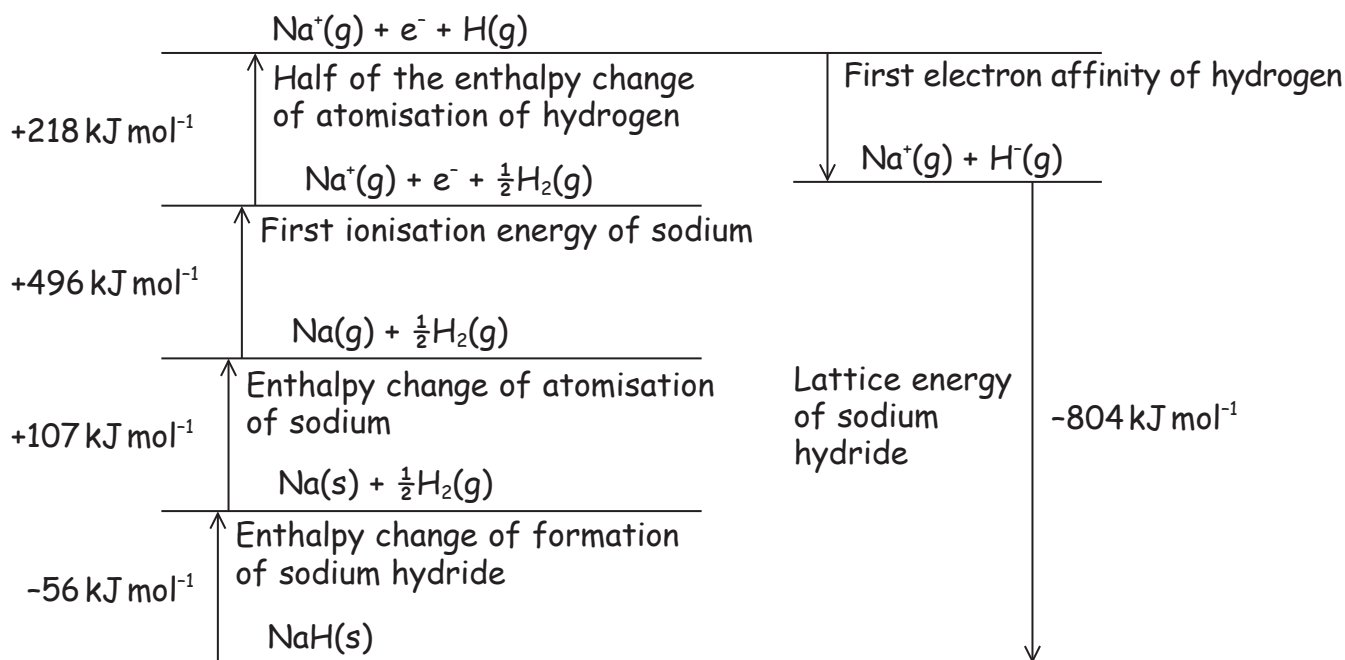


P 5 8 3 0 6 A 0 1 9 2 8

8 Sodium hydride, NaH, can be used to generate hydrogen for fuel cells.

(a) In order to calculate the first electron affinity of hydrogen, a student was asked to draw a Born-Haber cycle for sodium hydride.

The cycle had **two** errors but the numerical data were correct.



(i) Identify and correct the **two** errors in this Born-Haber cycle.

(2)

.....

.....

.....

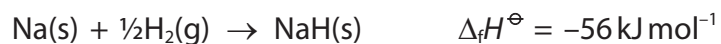
.....

(ii) Calculate the first electron affinity, in kJ mol^{-1} , of hydrogen, using the values given in the cycle.

(1)



(b) The equation for the formation of sodium hydride is



The standard entropy change of the system, $\Delta S_{\text{system}}^\ominus$, for this reaction is $-76.5 \text{ J K}^{-1} \text{ mol}^{-1}$.

- (i) Deduce the feasibility of this reaction at 298 K by calculating the free energy change, ΔG .

(2)

- (ii) Calculate the temperature at which $\Delta G = 0$.

(1)

DO NOT WRITE IN THIS AREA

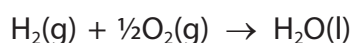
DO NOT WRITE IN THIS AREA

DO NOT WRITE IN THIS AREA

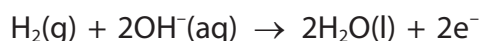


- (c) The sodium hydride is crushed in the presence of water to release the hydrogen gas for a fuel cell.

The overall equation for the reaction occurring in the fuel cell is



In an alkaline fuel cell the oxidation half-equation is



Deduce the reduction half-equation for the alkaline fuel cell.

State symbols are not required.

(1)

- (d) Lattice energies provide an indication of ionic bond strength.

Which are the lattice energies of the hydrides NaH, KH and MgH₂?

(1)

Lattice energy / kJ mol ⁻¹			
	Sodium hydride, NaH	Potassium hydride, KH	Magnesium hydride, MgH ₂
<input type="checkbox"/> A	-804	-711	-1018
<input type="checkbox"/> B	-804	-711	-2718
<input type="checkbox"/> C	-804	-911	-1018
<input type="checkbox"/> D	-804	-911	-2718

(Total for Question 8 = 8 marks)



9 This is a question about buffer solutions.

(a) A buffer solution always

(1)

- A keeps the pH less than 7.
- B contains equimolar amounts of acid and its conjugate base.
- C keeps the pH constant if small quantities of acid or base are added.
- D resists changes in pH if small quantities of acid or base are added.

(b) A buffer solution with a pH of 3.90 is required.

Calculate the **mass**, in grams, of sodium ethanoate that should be added to 50.0 cm³ of an ethanoic acid solution of concentration 0.800 mol dm⁻³ to form this buffer solution.

Give your answer to an appropriate number of significant figures.

[K_a for ethanoic acid = 1.74×10^{-5} mol dm⁻³]

(5)

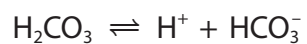


DO NOT WRITE IN THIS AREA

DO NOT WRITE IN THIS AREA

DO NOT WRITE IN THIS AREA

(c) One of the systems controlling the pH of blood is the carbonic acid-hydrogencarbonate buffer system.



Explain how this buffer system helps to control the pH of blood when extra carbon dioxide is present due to strenuous exercise.

(3)

.....

.....

.....

.....

.....

.....

.....

.....

.....

.....



DO NOT WRITE IN THIS AREA

DO NOT WRITE IN THIS AREA

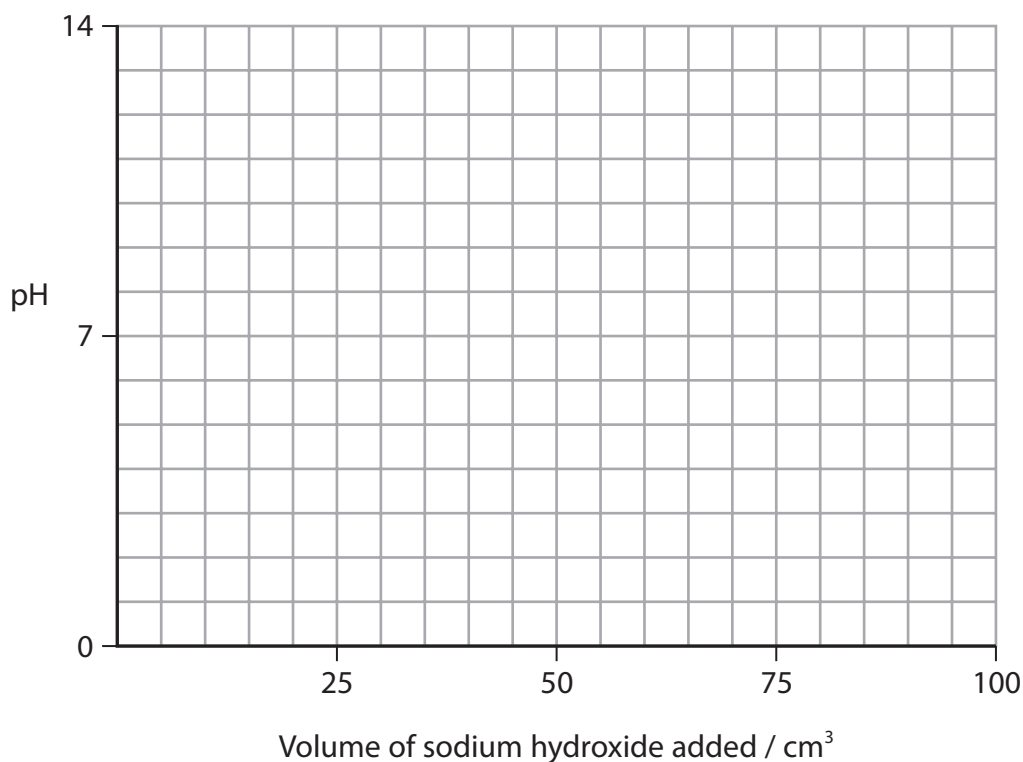
DO NOT WRITE IN THIS AREA

(d) A weak acid-strong base titration curve can be used to demonstrate buffer action.

- (i) Draw a titration curve for the addition of 100 cm³ of sodium hydroxide solution of concentration 0.100 mol dm⁻³ to 40.0 cm³ of propanoic acid solution of concentration 0.100 mol dm⁻³ which has a pH of 3.0.

Show the part of the curve that demonstrates buffer action.

(4)



- (ii) Describe, without calculation, how you would use your curve to determine the value of K_a for propanoic acid.

(2)

.....

.....

.....

.....

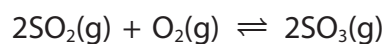
.....

(Total for Question 9 = 15 marks)



10 This question is about equilibrium systems.

(a) Sulfur dioxide and oxygen form an equilibrium with sulfur trioxide.



The composition of an equilibrium mixture at 698 K and a total pressure of 2.40 atm is shown in the table.

Substance	$\text{SO}_2(\text{g})$	$\text{O}_2(\text{g})$	$\text{SO}_3(\text{g})$
Number of moles /mol	0.0160	0.0120	0.772

(i) Calculate the value of K_p at this temperature.

Include units, if appropriate.

(5)

(ii) Calculate the number of sulfur dioxide molecules present in this equilibrium mixture.

(1)



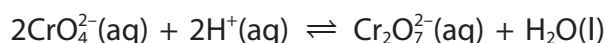
- (iii) Deduce, by referring to K_p , how the number of sulfur dioxide molecules will change if more oxygen is added to the equilibrium mixture. (2)

.....

.....

.....

- (b) An equilibrium exists in aqueous solution between the chromate(VI) ions and the dichromate(VI) ions.



Explain any change in the position of equilibrium if a few drops of sodium hydroxide solution are added to this equilibrium system. (2)

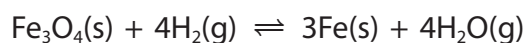
.....

.....

.....

.....

- (c) The equilibrium for the reaction between hydrogen gas and an oxide of iron is



The K_c expression for this equilibrium is (1)

A $K_c = \frac{[\text{Fe}] \times [\text{H}_2\text{O}]}{[\text{Fe}_3\text{O}_4] \times [\text{H}_2]}$

B $K_c = \frac{[\text{Fe}]^3 \times [\text{H}_2\text{O}]^4}{[\text{Fe}_3\text{O}_4] \times [\text{H}_2]^4}$

C $K_c = \frac{[\text{H}_2\text{O}]}{[\text{H}_2]}$

D $K_c = \frac{[\text{H}_2\text{O}]^4}{[\text{H}_2]^4}$

(Total for Question 10 = 11 marks)

TOTAL FOR PAPER = 90 MARKS

DO NOT WRITE IN THIS AREA

DO NOT WRITE IN THIS AREA

DO NOT WRITE IN THIS AREA



The Periodic Table of Elements

1	2	3	4	5	6	7	0 (8)														
(1) 6.9 Li lithium 3	(2) 9.0 Be beryllium 4	(3) 45.0 Sc scandium 21	(4) 47.9 Ti titanium 22	(5) 50.9 V vanadium 23	(6) 52.0 Cr chromium 24	(7) 54.9 Mn manganese 25	(8) 55.8 Fe iron 26	(9) 58.9 Co cobalt 27	(10) 58.7 Ni nickel 28	(11) 63.5 Cu copper 29	(12) 65.4 Zn zinc 30	(13) 10.8 B boron 5	(14) 12.0 C carbon 6	(15) 14.0 N nitrogen 7	(16) 16.0 O oxygen 8	(17) 19.0 F fluorine 9	(18) 4.0 He helium 2				
23.0 Na sodium 11	24.3 Mg magnesium 12	39.1 K potassium 19	37.0 Ca calcium 20	88.9 Y yttrium 39	87.6 Sr strontium 38	91.2 Zr zirconium 40	92.9 Nb niobium 41	95.9 Mo molybdenum 42	[98] Tc technetium 43	101.1 Ru ruthenium 44	102.9 Rh rhodium 45	106.4 Pd palladium 46	107.9 Ag silver 47	112.4 Cd cadmium 48	114.8 In indium 49	118.7 Sn tin 50	121.8 Sb antimony 51	126.9 Te tellurium 52	127.6 I iodine 53	131.3 Xe xenon 54	
132.9 Cs caesium 55	137.3 Ba barium 56	178.5 Hf hafnium 72	173.0 Ta tantalum 73	180.9 W tungsten 74	186.2 Re rhenium 75	190.2 Os osmium 76	192.2 Ir iridium 77	195.1 Pt platinum 78	197.0 Au gold 79	200.6 Hg mercury 80	204.4 Tl thallium 81	207.2 Pb lead 82	209.0 Bi bismuth 83	208.9 Po polonium 84	210 At astatine 85	[222] Rn radon 86					
[223] Fr francium 87	[226] Ra radium 88	[227] Ac* actinium 89	[261] Rf rutherfordium 104	[262] Db dubnium 105	[266] Sg seaborgium 106	[264] Bh bohrium 107	[277] Hs hassium 108	[268] Mt meitnerium 109	[271] Ds darmstadtium 110	[272] Rg roentgenium 111											

Elements with atomic numbers 112-116 have been reported but not fully authenticated

Key

relative atomic mass
atomic symbol
name
atomic (proton) number

1.0
H
hydrogen
1

* Lanthanide series

* Actinide series

140 Ce cerium 58	141 Pr praseodymium 59	144 Nd neodymium 60	[147] Pm promethium 61	150 Sm samarium 62	152 Eu europium 63	157 Gd gadolinium 64	163 Dy dysprosium 66	165 Ho holmium 67	167 Er erbium 68	169 Tm thulium 69	173 Yb ytterbium 70	175 Lu lutetium 71
232 Th thorium 90	[231] Pa protactinium 91	238 U uranium 92	[237] Np neptunium 93	[242] Pu plutonium 94	[243] Am americium 95	[247] Cm curium 96	[251] Cf californium 98	[254] Es einsteinium 99	[253] Fm fermium 100	[256] Md mendelevium 101	[254] No nobelium 102	[257] Lr lawrencium 103

DO NOT WRITE IN THIS AREA

DO NOT WRITE IN THIS AREA

DO NOT WRITE IN THIS AREA

