

Please check the examination details below before entering your candidate information

Candidate surname

Other names

**Pearson Edexcel**  
**Level 3 GCE**

Centre Number

--	--	--	--	--

Candidate Number

--	--	--	--	--

**Tuesday 11 June 2019**

Afternoon (Time: 1 hour 45 minutes)

Paper Reference **9CH0/02**

**Chemistry**

**Advanced**

**Paper 2: Advanced Organic and Physical Chemistry**

**Candidates must have: Scientific calculator**  
**Data Booklet**  
**Ruler**

Total Marks

### Instructions

- Use **black** ink or **black** ball-point pen.
- **Fill in the boxes** at the top of this page with your name, centre number and candidate number.
- Answer **all** questions.
- Answer the questions in the spaces provided  
– *there may be more space than you need.*

### Information

- The total mark for this paper is 90.
- The marks for **each** question are shown in brackets  
– *use this as a guide as to how much time to spend on each question.*
- For the question marked with an asterisk (\*), marks will be awarded for your ability to structure your answer logically showing the points that you make are related or follow on from each other where appropriate.
- A Periodic Table is printed on the back cover of this paper.

### Advice

- Read each question carefully before you start to answer it.
- Show all your working in calculations and include units where appropriate.
- Check your answers if you have time at the end.

Turn over ►

P58307A

©2019 Pearson Education Ltd.

1/1/1/1/1/1/



  
**Pearson**

Answer ALL questions.

Some questions must be answered with a cross .  
If you change your mind about an answer, put a line through the box   
and then mark your new answer with a cross .

1 This question is about some reactions of alcohols.

(a) (i) Which alcohol **cannot** be oxidised by acidified potassium dichromate(VI)?

(1)

- A hexan-2-ol
- B 2-methylpentan-2-ol
- C hexan-3-ol
- D 2-methylpentan-3-ol

(ii) Which alcohol reacts with iodine in the presence of alkali to form a yellow solid?

(1)

- A hexan-2-ol
- B 2-methylpentan-2-ol
- C hexan-3-ol
- D 2-methylpentan-3-ol

(b) Which reagent is used with iodine to prepare iodoalkanes from alcohols?

(1)

- A red phosphorus
- B concentrated phosphoric acid
- C sulfur
- D concentrated sulfuric acid

(Total for Question 1 = 3 marks)

DO NOT WRITE IN THIS AREA

DO NOT WRITE IN THIS AREA

DO NOT WRITE IN THIS AREA



DO NOT WRITE IN THIS AREA

DO NOT WRITE IN THIS AREA

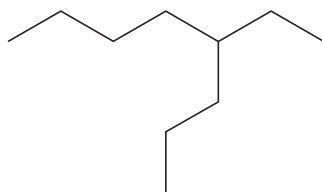
DO NOT WRITE IN THIS AREA

**BLANK PAGE**



2 This question is about alkanes and their reactions.

(a) What is the IUPAC name for this alkane?



(1)

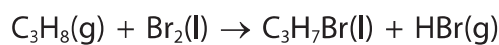
- A 4-ethyloctane
- B 5-ethyloctane
- C 3-propylheptane
- D 5-propylheptane

(b) What is the name of the process that could be used to produce propane,  $C_3H_8$ , from decane,  $C_{10}H_{22}$ ?

(1)

- A substitution
- B reforming
- C fractional distillation
- D cracking

(c) A student researched the reaction of propane with bromine and found that the reaction could be used to make 1-bromopropane.



(i) The first step of the reaction involves

(1)

- A heterolytic bond fission to form free radicals
- B heterolytic bond fission to form ions
- C homolytic bond fission to form free radicals
- D homolytic bond fission to form ions



(ii) Calculate the atom economy by mass for the formation of 1-bromopropane in the reaction in (c).

(2)

(iii) A source from the internet gave the percentage yield for this reaction as 31.0%. The best explanation for the low percentage yield of 1-bromopropane in this reaction is

(1)

- A bromine is very unreactive
- B a gaseous reactant always gives a low yield
- C the reaction is very slow
- D the reaction produces a mixture of organic products

(iv) Calculate the volume of propane, in  $\text{dm}^3$ , measured at room temperature and pressure, that is needed to produce 14.7 g of 1-bromopropane, assuming a percentage yield of 31.0%.

Give your answer to an appropriate number of significant figures.

[Molar gas volume at r.t.p. =  $24.0 \text{ dm}^3 \text{ mol}^{-1}$ ]

(3)

(Total for Question 2 = 9 marks)



3 This question is about compounds of Group 5 elements.

(a) Phosphorus forms two chlorides with the formulae  $\text{PCl}_3$  and  $\text{PCl}_5$ .

(i) Explain the shape of the  $\text{PCl}_3$  molecule. The bond angle is not required.

(3)

.....  
.....  
.....

(ii) Draw a diagram to show the three-dimensional shape of the  $\text{PCl}_5$  molecule in the gas phase.

Include bond angles and the name of the shape.

(3)

(iii) Explain why phosphorus forms  $\text{PCl}_5$  but nitrogen does not form  $\text{NCl}_5$ .

(2)

.....  
.....  
.....  
.....  
.....



DO NOT WRITE IN THIS AREA

DO NOT WRITE IN THIS AREA

DO NOT WRITE IN THIS AREA

(b) Nitrogen trichloride,  $\text{NCl}_3$ , has a boiling temperature of 344 K, and nitrogen trifluoride,  $\text{NF}_3$ , has a boiling temperature of 144 K.

Explain this difference in boiling temperatures, by referring to all the intermolecular forces present.

(5)

.....

.....

.....

.....

.....

.....

.....

.....

.....

.....

.....

.....

.....

.....

.....

.....

.....

.....

.....

.....

.....

.....

.....

.....

(c) Which of these compounds produces hydrogen chloride when it reacts with  $\text{PCl}_5$ ?

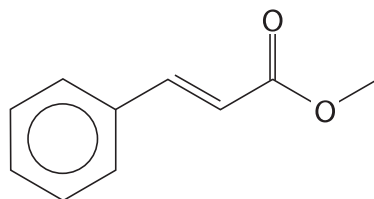
(1)

- A propanal
- B propan-1-ol
- C propanone
- D propyl propanoate

(Total for Question 3 = 14 marks)



4 Methyl cinnamate,  $C_{10}H_{10}O_2$ , is a white crystalline solid used in the perfume industry.



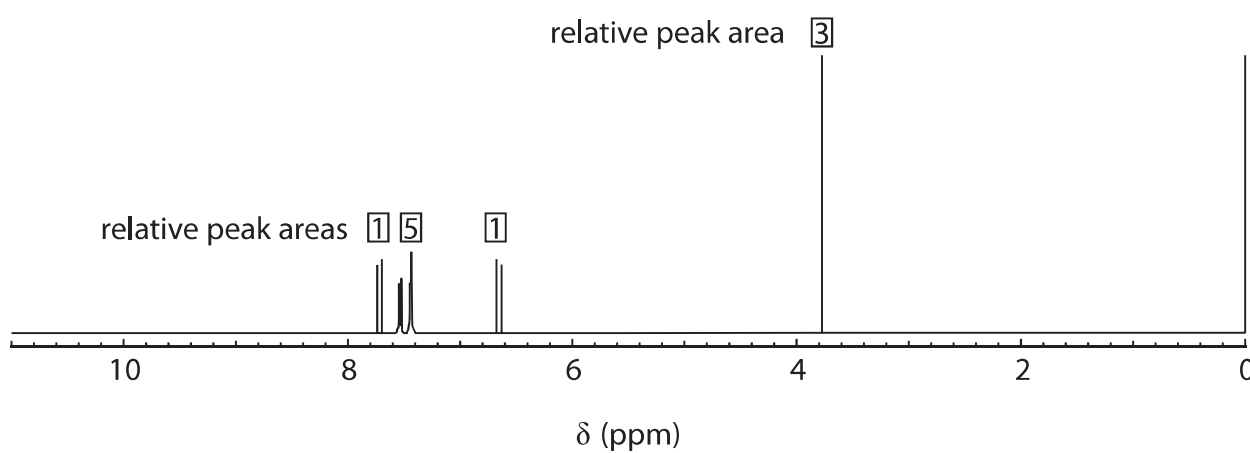
methyl cinnamate

(a) Calculate the mass of carbon in 2.34 g of methyl cinnamate.

(2)

(b) A sample of methyl cinnamate was analysed by high resolution proton NMR spectroscopy.

A simplified spectrum is shown.



(i) Name the compound responsible for the peak at a chemical shift of 0 ppm, stating its purpose.

(2)

.....

.....

.....

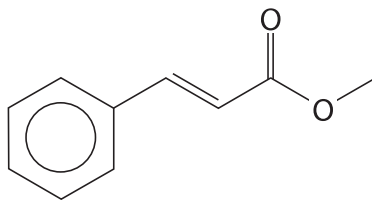
.....





- (ii) Identify the proton environment that causes the peak at a chemical shift of 3.8 ppm by circling it on the diagram shown. Fully justify your answer.

(3)



.....

.....

.....

.....

- (c) Methyl cinnamate undergoes an addition reaction in the dark with bromine.

- (i) Draw the mechanism for the reaction between methyl cinnamate and bromine, Br<sub>2</sub>.  
Include curly arrows, and relevant lone pairs and dipoles.

(4)

DO NOT WRITE IN THIS AREA

DO NOT WRITE IN THIS AREA

DO NOT WRITE IN THIS AREA



(ii) Deduce the number of optical isomers of the addition product that can exist.

(1)

- A 2
- B 3
- C 4
- D 8

(iii) When plane-polarised light is passed through an optical isomer, the plane of polarisation is

(1)

- A diffracted
- B reflected
- C refracted
- D rotated

(Total for Question 4 = 13 marks)

DO NOT WRITE IN THIS AREA

DO NOT WRITE IN THIS AREA

DO NOT WRITE IN THIS AREA



DO NOT WRITE IN THIS AREA

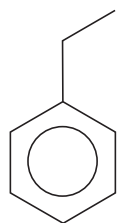
DO NOT WRITE IN THIS AREA

DO NOT WRITE IN THIS AREA

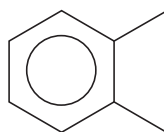
**BLANK PAGE**



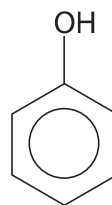
- 5 This question is about the arenes, ethylbenzene, xylene, and phenol, which can be identified in wine samples using gas chromatography.



ethylbenzene



xylene



phenol

- (a) Ethylbenzene can be formed by the reaction of a chloroalkane with benzene, catalysed by aluminium chloride,  $\text{AlCl}_3$ .
- (i) Draw the **displayed** formula of the chloroalkane required for this reaction. (1)
- (ii) Draw the mechanism for this reaction. Include equations showing the role of the catalyst and how it is regenerated. (5)



(iii) Explain whether phenol is likely to be less or more reactive than benzene with the chloroalkane from (a)(i).

(3)

.....

.....

.....

.....

.....

.....

.....

.....

DO NOT WRITE IN THIS AREA

DO NOT WRITE IN THIS AREA

DO NOT WRITE IN THIS AREA



(b) A student carried out an experiment to determine the molar mass of xylene.

The student's sample of xylene vapour had a mass of 0.271 g.

At a temperature of 165 °C and a pressure of 118 kPa, this sample had a volume of 70.5 cm<sup>3</sup>.

Use the Ideal Gas Equation to calculate the molar mass, in g mol<sup>-1</sup>, of this sample.

Give your answer to an appropriate number of significant figures.

You **must** show your working.

(4)



DO NOT WRITE IN THIS AREA

DO NOT WRITE IN THIS AREA

DO NOT WRITE IN THIS AREA

(c) The time taken for a compound to pass through the column in gas chromatography is called the retention time.

Explain why different compounds will have different retention times in the same column, under the same conditions.

(2)

.....

.....

.....

.....

.....

.....

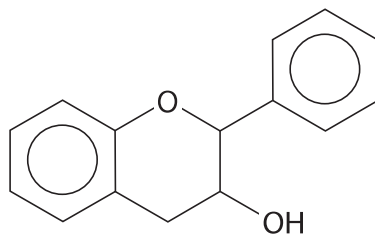
.....

.....

**(Total for Question 5 = 15 marks)**



6 The compound flavan-3-ol is found in tea, fruit and wine.



(a) Clearly label all the chiral carbon atoms in flavan-3-ol. (1)

(b) Give the molecular formula for flavan-3-ol. (1)

\*(c) A sample of flavan-3-ol extracted from wine contained some ethanol. The sample was left in a flask, open to the air for several days. The contents were then analysed to identify any new compounds formed. Several new compounds were found to be present, including some with a distinctive fruity smell.

Identify **four** new organic compounds that could form under these conditions by considering the chemistry of alcohols. Justify your answers. Include the structure of two compounds formed from flavan-3-ol, one of which has a fruity smell. (6)





DO NOT WRITE IN THIS AREA

DO NOT WRITE IN THIS AREA

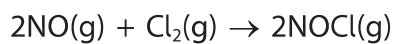
DO NOT WRITE IN THIS AREA

Handwriting practice area with 28 horizontal dotted lines.

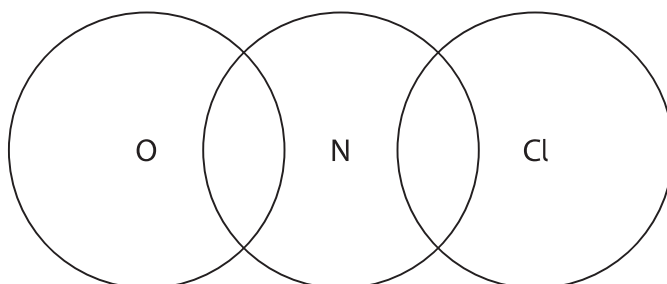
**(Total for Question 6 = 8 marks)**



7 Nitrogen monoxide and chlorine react together to form nitrosyl chloride.



(a) Draw a dot-and-cross diagram for nitrosyl chloride, showing only the outer shell electrons.



(2)

(b) The rate equation for the formation of nitrosyl chloride is

$$\text{Rate} = k[\text{NO}]^2[\text{Cl}_2]$$

(i) Complete the table by adding the missing values.

Experiment	$[\text{NO}] / \text{mol dm}^{-3}$	$[\text{Cl}_2] / \text{mol dm}^{-3}$	Rate / $\text{mol dm}^{-3} \text{ s}^{-1}$
1	0.122	0.241	$1.09 \times 10^{-2}$
2		0.482	$8.72 \times 10^{-2}$
3	0.366		$4.91 \times 10^{-2}$

(2)



(ii) Calculate the rate constant,  $k$ , using data from Experiment 1.  
Include units with your answer.

(3)

(iii) Explain how using a catalyst increases the rate constant,  $k$ .

(2)

.....

.....

.....

.....

DO NOT WRITE IN THIS AREA

DO NOT WRITE IN THIS AREA

DO NOT WRITE IN THIS AREA



(iv) The heterogeneous catalyst palladium was suggested for use in this reaction. Explain how impurities in the gaseous reactants could make the catalyst less effective.

(3)

.....

.....

.....

.....

.....

.....

.....

.....

.....

.....

**(Total for Question 7 = 12 marks)**

DO NOT WRITE IN THIS AREA

DO NOT WRITE IN THIS AREA

DO NOT WRITE IN THIS AREA



8 Gentian violet is a purple crystalline solid used as an antifungal treatment.

It can be synthesised from dimethylphenylamine,  $C_6H_5N(CH_3)_2$ .

(a) The dimethylphenylamine used in the synthesis can be made by the stepwise reaction of phenylamine with chloromethane.



The reaction mechanism for Step 1 between phenylamine and chloromethane is the same as that in the reaction between ammonia and chloromethane.

(i) What is the reaction type and mechanism in Step 1?

(1)

- A electrophilic addition
- B electrophilic substitution
- C nucleophilic addition
- D nucleophilic substitution

(ii) Draw the mechanism for the reaction in Step 1.  
Include curly arrows, and relevant lone pairs and dipoles.

(4)



(iii) Describe, in outline, how a sample of a solid, such as gentian violet, is purified by recrystallisation.

Specific details of the solvent used are not required.

(4)

.....

.....

.....

.....

.....

.....

.....

.....

(b) The rate constant for the reaction between a solution of gentian violet and aqueous sodium hydroxide was determined at different temperatures.

Temperature ( $T$ ) / K	1 / Temperature ( $1/T$ ) / K <sup>-1</sup>	Rate constant, $k$ / dm <sup>3</sup> mol <sup>-1</sup> s <sup>-1</sup>	ln $k$
283.5	$3.53 \times 10^{-3}$	$2.71 \times 10^{-3}$	-5.91
287.5	$3.48 \times 10^{-3}$	$3.55 \times 10^{-3}$	
291.5		$4.75 \times 10^{-3}$	-5.35
295.0	$3.39 \times 10^{-3}$	$6.10 \times 10^{-3}$	-5.10
298.5	$3.35 \times 10^{-3}$	$7.60 \times 10^{-3}$	-4.88

(i) Complete the data in the table.

(1)

(ii) Plot a graph and use it to determine the activation energy for the reaction in kJ mol<sup>-1</sup>.

You should include the value and units of the gradient of the line.

The Arrhenius equation can be shown as

$$\ln k = -\frac{E_a}{R} \times \frac{1}{T} + \text{constant}$$


(6)



DO NOT WRITE IN THIS AREA

DO NOT WRITE IN THIS AREA

DO NOT WRITE IN THIS AREA



Gradient

.....

Activation energy

.....

**(Total for Question 8 = 16 marks)**

**TOTAL FOR PAPER = 90 MARKS**



# The Periodic Table of Elements

1	2	3	4	5	6	7	0 (8)
6.9 <b>Li</b> lithium 3	9.0 <b>Be</b> beryllium 4	10.8 <b>B</b> boron 5	12.0 <b>C</b> carbon 6	14.0 <b>N</b> nitrogen 7	16.0 <b>O</b> oxygen 8	19.0 <b>F</b> fluorine 9	20.2 <b>Ne</b> neon 10
23.0 <b>Na</b> sodium 11	24.3 <b>Mg</b> magnesium 12	27.0 <b>Al</b> aluminium 13	28.1 <b>Si</b> silicon 14	31.0 <b>P</b> phosphorus 15	32.1 <b>S</b> sulfur 16	35.5 <b>Cl</b> chlorine 17	39.9 <b>Ar</b> argon 18
39.1 <b>K</b> potassium 19	40.1 <b>Ca</b> calcium 20	47.9 <b>Ti</b> titanium 22	47.9 <b>Ti</b> titanium 22	50.9 <b>V</b> vanadium 23	52.0 <b>Cr</b> chromium 24	54.9 <b>Mn</b> manganese 25	55.8 <b>Fe</b> iron 26
85.5 <b>Rb</b> rubidium 37	87.6 <b>Sr</b> strontium 38	91.2 <b>Zr</b> zirconium 40	91.2 <b>Zr</b> zirconium 40	92.9 <b>Nb</b> niobium 41	95.9 <b>Mo</b> molybdenum 42	[98] <b>Tc</b> technetium 43	101.1 <b>Ru</b> ruthenium 44
132.9 <b>Cs</b> caesium 55	137.3 <b>Ba</b> barium 56	178.5 <b>Hf</b> hafnium 72	178.5 <b>Hf</b> hafnium 72	180.9 <b>Ta</b> tantalum 73	183.8 <b>W</b> tungsten 74	186.2 <b>Re</b> rhenium 75	190.2 <b>Os</b> osmium 76
[223] <b>Fr</b> francium 87	[226] <b>Ra</b> radium 88	[261] <b>Rf</b> rutherfordium 104	[261] <b>Rf</b> rutherfordium 104	[262] <b>Db</b> dubnium 105	[266] <b>Sg</b> seaborgium 106	[264] <b>Bh</b> bohrium 107	[277] <b>Hs</b> hassium 108
		[272] <b>Rg</b> roentgenium 111	[272] <b>Rg</b> roentgenium 111	[271] <b>Ds</b> darmstadtium 110	[271] <b>Ds</b> darmstadtium 110	[271] <b>Ds</b> darmstadtium 110	[272] <b>Rg</b> roentgenium 111
		197.0 <b>Au</b> gold 79	197.0 <b>Au</b> gold 79	195.1 <b>Pt</b> platinum 78	195.1 <b>Pt</b> platinum 78	192.2 <b>Ir</b> iridium 77	190.2 <b>Os</b> osmium 76
		200.6 <b>Hg</b> mercury 80	200.6 <b>Hg</b> mercury 80	204.4 <b>Tl</b> thallium 81	207.2 <b>Pb</b> lead 82	209.0 <b>Bi</b> bismuth 83	209.0 <b>Po</b> polonium 84
		114.8 <b>In</b> indium 49	114.8 <b>In</b> indium 49	118.7 <b>Sn</b> tin 50	118.7 <b>Sn</b> tin 50	121.8 <b>Sb</b> antimony 51	126.9 <b>Te</b> tellurium 52
		65.4 <b>Zn</b> zinc 30	65.4 <b>Zn</b> zinc 30	63.5 <b>Cu</b> copper 29	63.5 <b>Cu</b> copper 29	58.9 <b>Co</b> cobalt 27	58.9 <b>Co</b> cobalt 27
		69.7 <b>Ga</b> gallium 31	69.7 <b>Ga</b> gallium 31	58.7 <b>Ni</b> nickel 28	58.7 <b>Ni</b> nickel 28	55.8 <b>Fe</b> iron 26	55.8 <b>Fe</b> iron 26
		72.6 <b>Ge</b> germanium 32	72.6 <b>Ge</b> germanium 32	106.4 <b>Pd</b> palladium 46	106.4 <b>Pd</b> palladium 46	102.9 <b>Rh</b> rhodium 45	102.9 <b>Rh</b> rhodium 45
		79.9 <b>Br</b> bromine 35	79.9 <b>Br</b> bromine 35	107.9 <b>Ag</b> silver 47	107.9 <b>Ag</b> silver 47	101.1 <b>Ru</b> ruthenium 44	101.1 <b>Ru</b> ruthenium 44
		83.8 <b>Kr</b> krypton 36	83.8 <b>Kr</b> krypton 36	192.2 <b>Ir</b> iridium 77	192.2 <b>Ir</b> iridium 77	186.2 <b>Re</b> rhenium 75	186.2 <b>Re</b> rhenium 75
		131.3 <b>Xe</b> xenon 54	131.3 <b>Xe</b> xenon 54	192.2 <b>Os</b> osmium 76	192.2 <b>Os</b> osmium 76	186.2 <b>Re</b> rhenium 75	186.2 <b>Re</b> rhenium 75
		[222] <b>Rn</b> radon 86	[222] <b>Rn</b> radon 86	204.4 <b>Tl</b> thallium 81	204.4 <b>Tl</b> thallium 81	209.0 <b>Bi</b> bismuth 83	209.0 <b>Po</b> polonium 84

Elements with atomic numbers 112-116 have been reported but not fully authenticated

140 <b>Ce</b> cerium 58	141 <b>Pr</b> praseodymium 59	144 <b>Nd</b> neodymium 60	150 <b>Sm</b> samarium 62	152 <b>Eu</b> europium 63	157 <b>Gd</b> gadolinium 64	163 <b>Dy</b> dysprosium 66	165 <b>Ho</b> holmium 67	167 <b>Er</b> erbium 68	169 <b>Tm</b> thulium 69	173 <b>Yb</b> ytterbium 70	175 <b>Lu</b> lutetium 71
232 <b>Th</b> thorium 90	[231] <b>Pa</b> protactinium 91	238 <b>U</b> uranium 92	[242] <b>Pu</b> plutonium 94	[243] <b>Am</b> americium 95	[247] <b>Cm</b> curium 96	[251] <b>Cf</b> californium 98	[254] <b>Es</b> einsteinium 99	[253] <b>Fm</b> fermium 100	[256] <b>Md</b> mendelevium 101	[254] <b>No</b> nobelium 102	[257] <b>Lr</b> lawrencium 103

\* Lanthanide series

\* Actinide series

