

Surname	Centre Number	Candidate Number
First name(s)		2

GCE A LEVEL



A410U20-1



O20-A410U20-1



TUESDAY, 13 OCTOBER 2020 – MORNING

CHEMISTRY – A level component 2

Organic Chemistry and Analysis

2 hours 30 minutes

For Examiner's use only		
Question	Maximum Mark	Mark Awarded
Section A 1. to 5.	15	
Section B 6.	13	
7.	18	
8.	19	
9.	22	
10.	19	
11.	14	
Total	120	

A410U201
01

ADDITIONAL MATERIALS

In addition to this examination paper, you will need a:

- calculator;
- **Data Booklet** supplied by WJEC.

INSTRUCTIONS TO CANDIDATES

Use black ink or black ball-point pen.

Write your name, centre number and candidate number in the spaces at the top of this page.

Section A Answer **all** questions in the spaces provided.

Section B Answer **all** questions in the spaces provided.

Candidates are advised to allocate their time appropriately between **Section A (15 marks)** and **Section B (105 marks)**.

INFORMATION FOR CANDIDATES

The number of marks is given in brackets at the end of each question or part-question.

The maximum mark for this paper is 120.

Your answers must be relevant and must make full use of the information given to be awarded full marks for a question.

The assessment of the quality of extended response (QER) will take place in **Q.8(a)** and **Q.11(b)**.

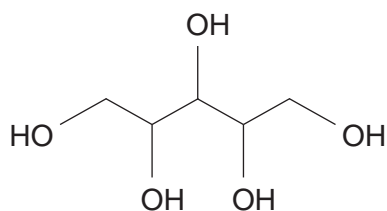
If you run out of space, use the additional page(s) at the back of the booklet, taking care to number the question(s) correctly.

SECTION A

Answer **all** questions in the spaces provided.

1. Give the structure of a compound containing four carbon atoms that will give a red precipitate with Fehling's reagent. [1]

2. A stick of chewing gum for diabetics contains xylitol.



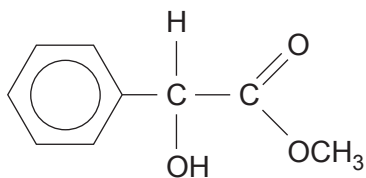
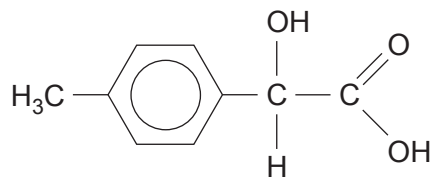
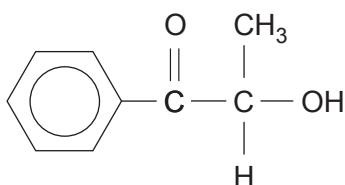
- (a) Give the molecular formula of xylitol. [1]

.....

- (b) State the number of signals in the ^{13}C NMR spectrum of xylitol. Give your reasoning. [2]

.....
.....
.....
.....

3. The formulae of three compounds are shown below.

compound **A**compound **B**compound **C**

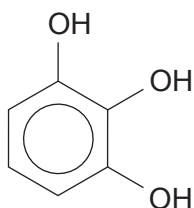
- (a) State which **one** of the compounds can be reduced by sodium tetrahydridoborate(III). [1]

.....

- (b) Complete each box in the table by giving an observation. If there is no observation, write 'no reaction'. [3]

Compound	Reagent added		
	Aqueous sodium hydrogencarbonate	Acidified potassium dichromate	Aqueous 2,4-dinitrophenylhydrazine
A			
B			
C			

4. Benzene-1,2,3-triol can be used to find the percentage of oxygen in a gas mixture.



- (a) Give the empirical formula of benzene-1,2,3-triol.

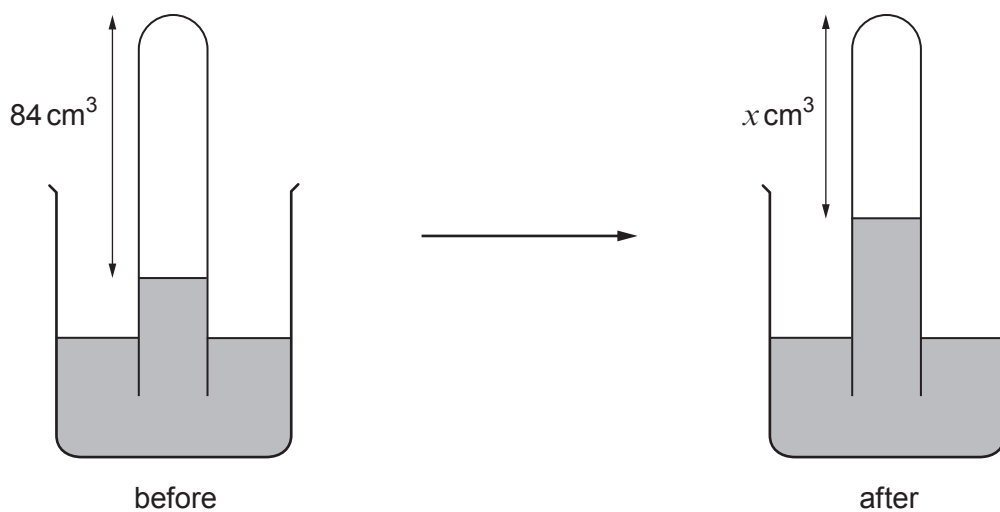
[1]

.....

- (b) Oxygen reacts with an alkaline solution of benzene-1,2,3-triol.

A gas mixture contains 26% of oxygen by volume, with the remaining gas being largely nitrogen with a smaller amount of helium.

When 84 cm^3 of this mixture reacts with alkaline benzene-1,2,3-triol, its volume is reduced to $x \text{ cm}^3$ as shown in the diagram.

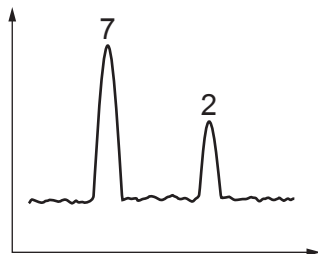


- (i) Use the information given to calculate the value x in cm^3 .

[1]

$x = \dots\dots\dots \text{cm}^3$

- (ii) After removal of oxygen the remaining gas was passed through a gas chromatograph and gave the following result, where the figures are relative peak areas.

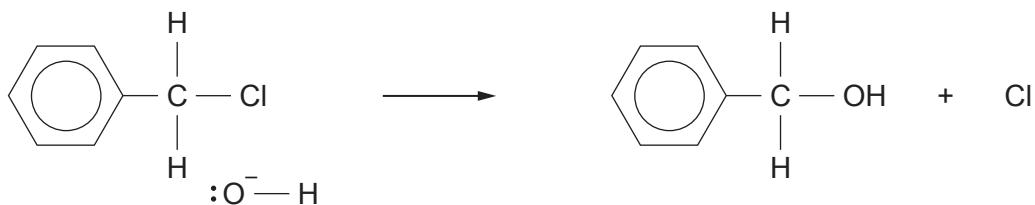


Use your answer to part (i) and the chromatogram to calculate the volumes of helium and nitrogen in the original gas mixture. [2]

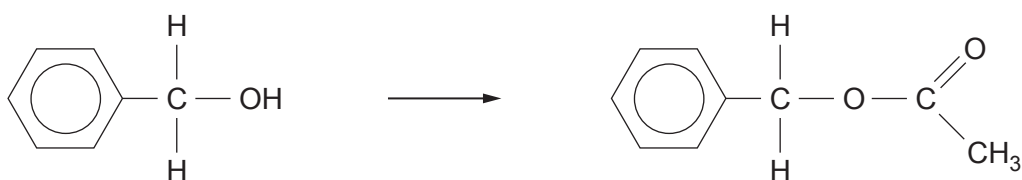
Volume of nitrogen = cm^3

Volume of helium = cm^3

5. (a) Complete the mechanism for the reaction below by adding suitable curly arrows and partial/full charges. You do **not** need to show lone pairs of electrons. [2]



- (b) State a reagent for the following reaction. [1]

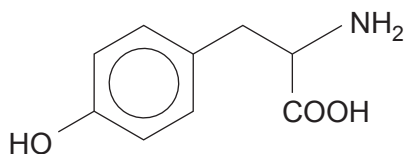


BLANK PAGE

SECTION B

Answer **all** questions in the spaces provided.

6. (a) Tyrosine is an α -amino acid that occurs in many foods.



- (i) In an aqueous solution tyrosine exists largely as the zwitterion.

Give the structure of this zwitterion.

[1]

- (ii) The melting temperature of tyrosine is 314 °C.

Explain how the structure of tyrosine contributes to this high melting temperature.

[2]

.....

.....

.....

.....

- (iii) Give the structure of **one** of the dipeptides formed between tyrosine and aminoethanoic acid.

[1]

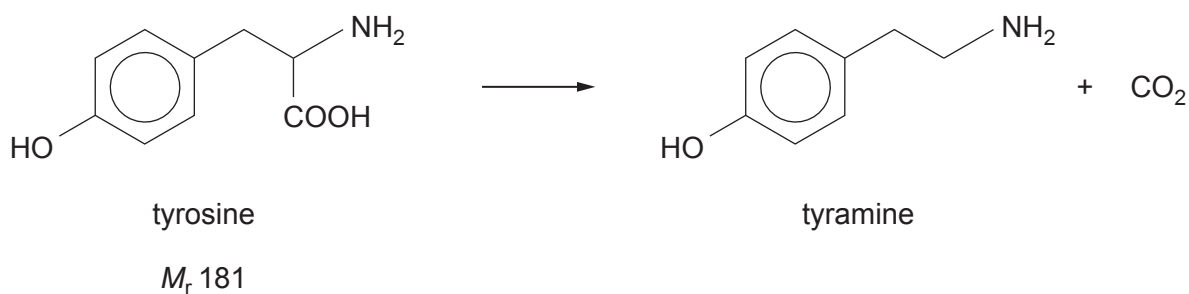
- (iv) A few drops of aqueous iron(III) chloride are added to an aqueous solution of tyrosine.

State any observation made.

[1]

- (v) In the body, tyrosine is converted by enzymes into tyramine.

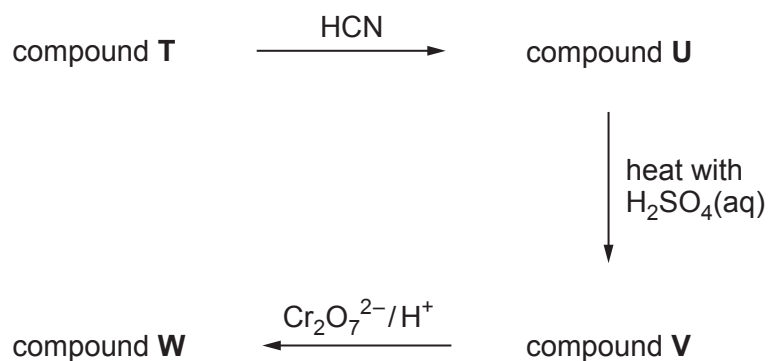
One equation for this reaction is as follows.



Calculate the atom economy of this reaction to make tyramine, giving your answer to an **appropriate** number of significant figures. [2]

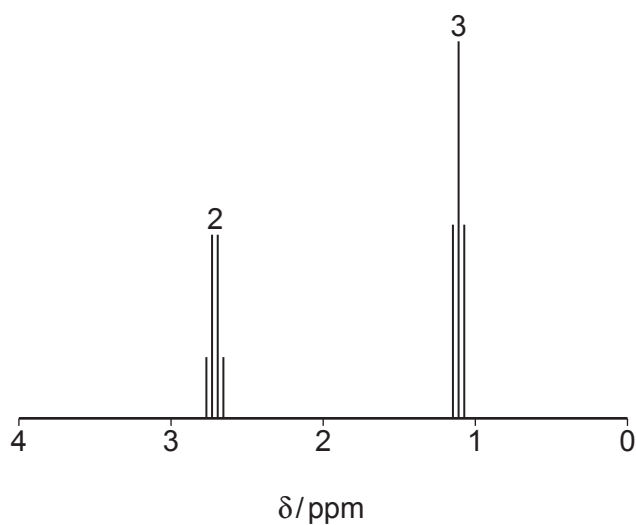
Atom economy = %

(b) The diagram below shows a scheme for the synthesis of compound **W**.



Compound **W** is a carboxylic acid of general formula $\text{R} - \overset{\text{O}}{\parallel}{\text{C}} - \text{COOH}$

Its ^1H NMR spectrum is shown below with the peak for the $\text{O}-\text{H}$ group omitted.



- (i) Use the NMR spectrum to deduce the formula of the R group in compound **W**.
Give your reasoning.

The numbers 2 and 3 represent relative peak areas.

[3]

.....

.....

.....

.....

.....

.....

- (ii) Use your answer to part (i) to deduce the structures of compounds **T**, **U** and **V**. [3]

Compound	Structure
T	
U	
V	

7. Liquefied petroleum gas (LPG) consists largely of propane (M_r 44) and butane (M_r 58).
- (a) A sample of LPG has a mass of 10.48 g. It contains 3.52 g of propane with the rest being butane. The sample was completely burned, giving only carbon dioxide and water.

Calculate the total volume of carbon dioxide produced, measured at 298 K and 1 atm pressure. [5]

Volume = dm³

- (b) In practice LPG contains small quantities of other materials including ethanethiol, C_2H_5SH (M_r 62). This is added to LPG so that any escape is detectable by its smell.

A 600 g sample of LPG contains 17 mg of ethanethiol.

Calculate the percentage by mass of sulfur in the LPG, assuming that all the sulfur comes from the ethanethiol. [3]

Percentage = %

- (c) The C₄ component of LPG contains both methylpropane (boiling temperature -12°C) and butane (boiling temperature -0.5°C).

Explain why these two compounds have different boiling temperatures even though they have the same molecular formula. [2]

.....

.....

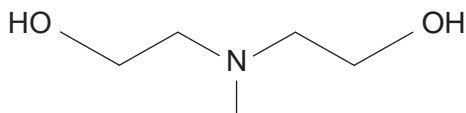
.....

.....

- (d) The combustion of LPG and other hydrocarbons causes the emission of carbon dioxide, which is a cause of global warming.

One method of removing carbon dioxide from power station emissions is by its absorption into a solution containing certain amines.

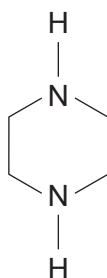
An amine that can be used for this method is N-methyldiethanolamine.



Some properties of **this** amine are shown below. Suggest a reason why each of the properties given are advantageous in this use. [4]

Property	Advantage
Reacts with both carbon dioxide and hydrogen sulfide
It has a high boiling temperature
It is immiscible with hydrocarbons
Its reaction with both carbon dioxide and hydrogen sulfide is exothermic

- (e) Piperazine is sometimes used with N-methyldiethanolamine in the removal of carbon dioxide from power station flue gases.



piperazine

- (i) Explain why piperazine acts as a base. [1]

.....

.....

- (ii) Give the structure of the compound formed when 1 mol of piperazine reacts with 2 mol of hydrochloric acid. [1]

- (f) Alkanes react with chlorine in a radical reaction.

For example

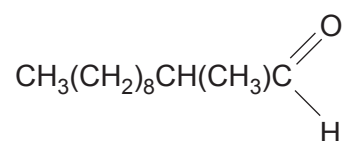


Deduce the structure of an isomer of formula C_5H_{12} which will give only one possible monochloride, $\text{C}_5\text{H}_{11}\text{Cl}$, on reaction with chlorine. Explain your reasoning. [2]

.....

.....

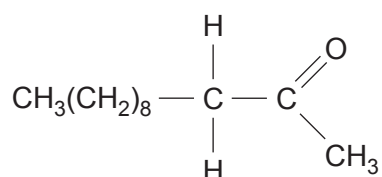
8. (a) A perfume contains 2-methylundecanal, $C_{12}H_{24}O$.



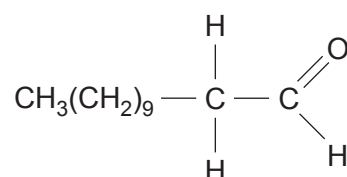
Compounds **D** to **G** all contain some features similar to 2-methylundecanal.

For **each** compound suggest how you could distinguish the structure from 2-methylundecanal.

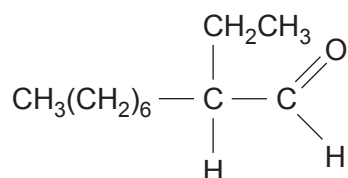
You may use physical and chemical tests but **not** spectroscopic methods in your answer. [6 QER]



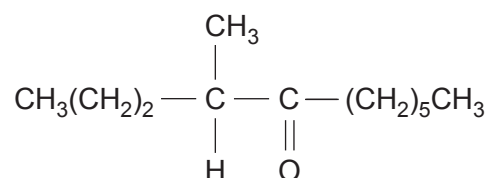
compound **D**



compound **E**



compound **F**



compound **G**

(b) Lycopene, $C_{40}H_{56}$, is the compound responsible for the red colour in tomatoes. This unsaturated hydrocarbon contains 13 carbon to carbon double bonds in each molecule.

- (i) 4.78 dm^3 of hydrogen measured at 298 K and 1 atm pressure was needed to fully hydrogenate a certain mass of lycopene.

Calculate the mass of lycopene used.

[4]

Mass = g

- (ii) Lycopene is a bright red solid when seen in white light.

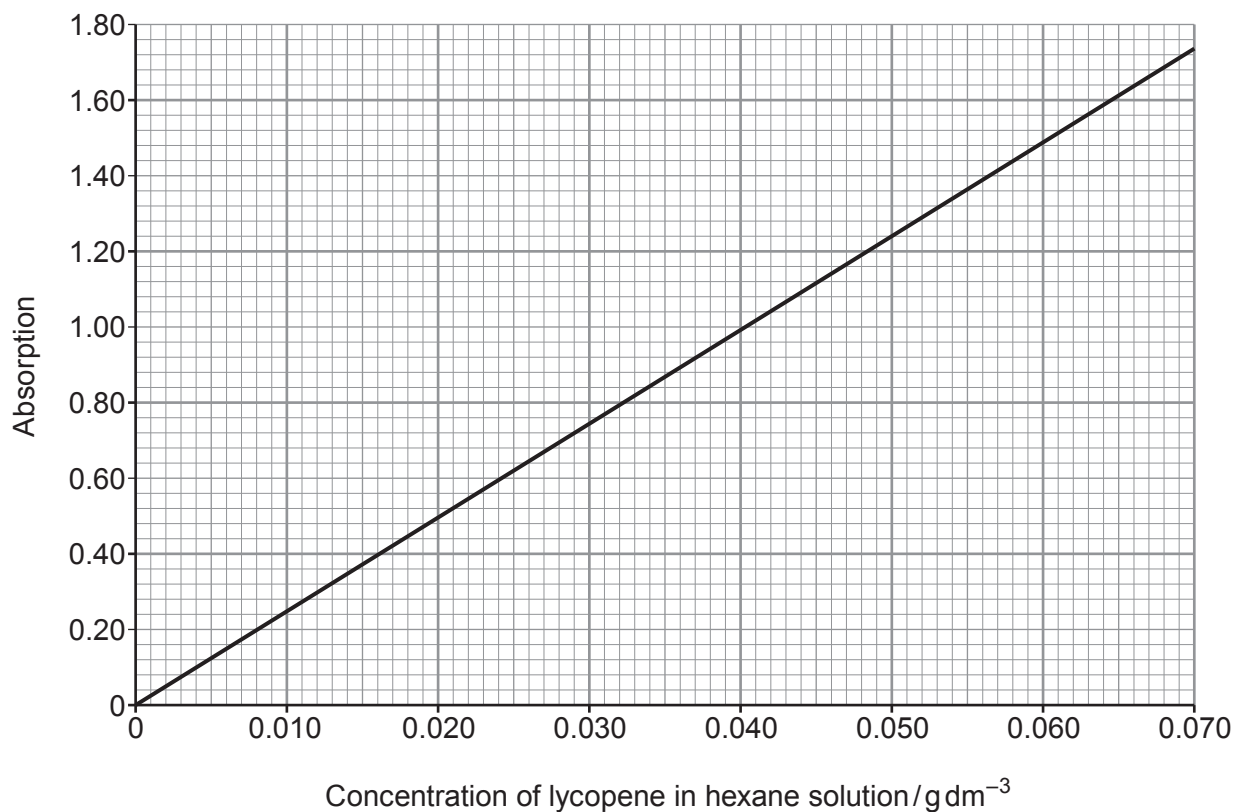
State which colour(s) present in white light are absorbed to result in this red colour.

[1]

.....

- (iii) The amount of lycopene present in tomatoes can be found by colorimetry.

The absorption values of a number of standard solutions are measured and their values used to produce a calibration graph.



A tomato of mass 20.0g was treated and the lycopene extracted into 10 cm³ of hexane. This solution gave an absorption reading of 1.24.

Use the graph to find the concentration of lycopene present and hence the percentage of lycopene in the tomato. [3]

Percentage = %

- (iv) A solution of lycopene in hexane was used for the colorimetry in part (iii) as lycopene is insoluble in water.

Explain why lycopene is insoluble in water. [1]

.....

.....

- (c) Many compounds that contain a conjugated double bond system (alternating double and single carbon to carbon bonds) absorb in the ultraviolet and visible regions of the electromagnetic spectrum.

The table shows the structure of some conjugated polyenes and the wavelengths of their maximum absorption values (λ_{\max}).

Compound	Number of C=C bonds	λ_{\max} / nm	Colour seen in white light
$\text{H}_2\text{C}=\text{CH}-\text{CH}=\text{C}(\text{CH}_3)_2$	2	234	colourless
$\text{CH}_3-\text{CH}=\text{CH}-\text{CH}=\text{CH}-\text{CH}=\text{CH}-\text{CH}_3$	3	263	colourless
$\text{CH}_3-\text{CH}=\text{CH}-(\text{CH}=\text{CH})_3-\text{CH}=\text{CH}-\text{CH}_3$	5	326	colourless
β -carotene	11	450	yellow / orange
lycopene	13	505	red

Fill the gaps in the sentence below, using the words **increases** or **decreases**.

'As the number of conjugated carbon to carbon double bonds ,
the wavelength of their absorption maxima ,
the frequency and the energy' [2]

- (d) The table shows the concentrations of seven coloured compounds in a tomato. The values were obtained by HPLC.

Compound	Concentration $\mu\text{g g}^{-1}$
1	0.60
2	1.15
3	1.22
4	1.87
5	4.16
6	6.13
7	57.91

The main coloured component in a tomato is lycopene.

Suggest **two** ways by which you would know which of the peaks is given by lycopene.

[2]

1.

.....

2.

.....

9. (a) Phenol reacts with bromine to give 2,4,6-tribromophenol.

(i) Give the equation for this reaction.

[1]

(ii) State what is seen during this reaction.

[2]

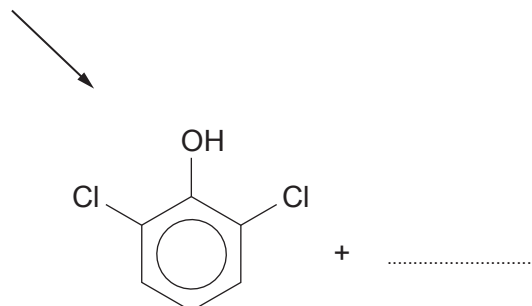
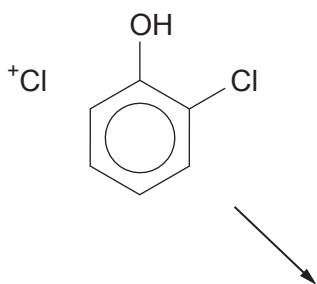
.....

(b) Under suitable conditions 2-chlorophenol can be chlorinated giving 2,6-dichlorophenol.

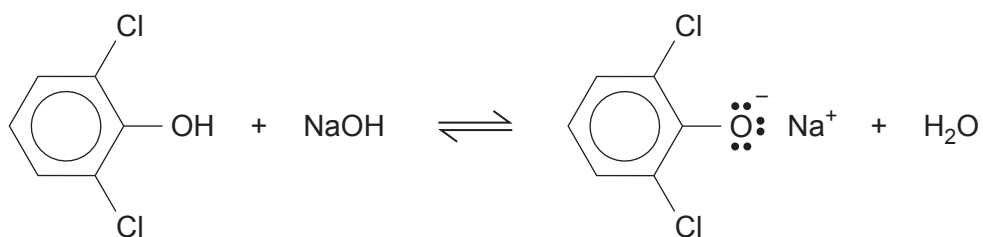
Complete the mechanism for this reaction showing appropriate charges, curly arrows, the structure of the intermediate and the other product.

For simplicity the electrophile is shown as Cl^+ .

[3]



- (c) 2,6-Dichlorophenol is an acidic substance and will react with aqueous sodium hydroxide to give the corresponding anion, whereas ethanol does not react.



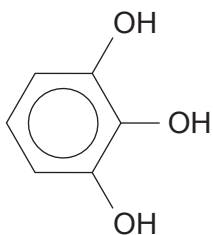
- (i) Use this information to explain why 2,6-dichlorophenol is a stronger acid than ethanol. [2]

.....

.....

.....

- (ii) Explain why 2,6-dichlorophenol does **not** react with aqueous sodium hydroxide to give compounds such as benzene-1,2,3-triol. [1]



.....

.....

- (d) Some information about a sample of 2,6-dichlorophenol produced by the chlorination of 2-chlorophenol is given below.

Calculated percentage of chlorine in 2,6-dichlorophenol	43.6 %
Percentage of chlorine in the sample of 2,6-dichlorophenol	43.7 %
Melting temperature of 2,6-dichlorophenol	65 °C
Melting temperature of the sample of 2,6-dichlorophenol	53-55 °C

The melting temperature of the sample of 2,6-dichlorophenol indicates that the sample is impure.

Suggest **two** reasons why the percentage of chlorine is however, close to the calculated value. [2]

.....

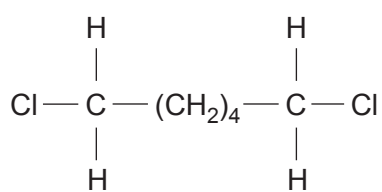
.....

.....

BLANK PAGE

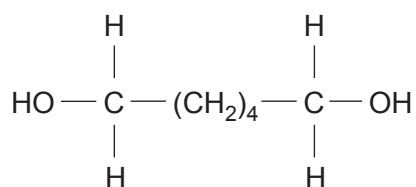
**QUESTION 9 CONTINUES
ON PAGE 26**

(e) The flow chart shows a route for the preparation of a polyester.



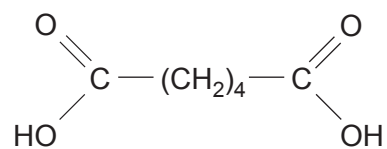
1,6-dichlorohexane

↓ stage 1



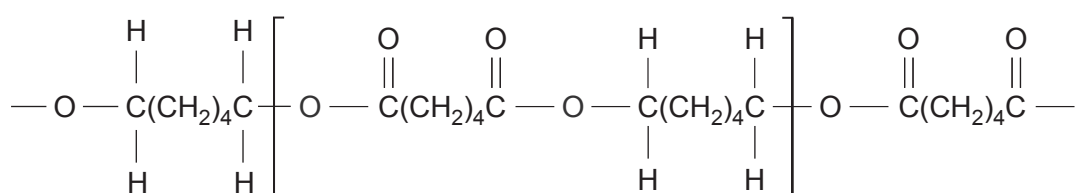
hexane-1,6-diol

→ stage 2



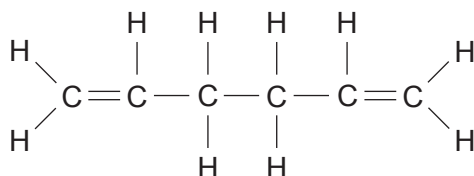
hexane-1,6-dioic acid

↘ stage 3 ↙



- (i) The starting point for the preparation of the polyester is 1,6-dichlorohexane.

David said that this could be prepared by reacting hexa-1,5-diene with hydrogen chloride.



hexa-1,5-diene

Explain why the yield of 1,6-dichlorohexane is small if this method is used. [2]

.....

.....

.....

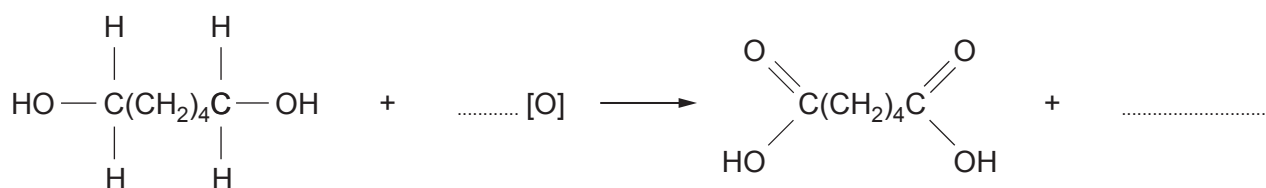
.....

- (ii) State a reagent that will react with 1,6-dichlorohexane to give hexane-1,6-diol in stage 1. [1]

.....

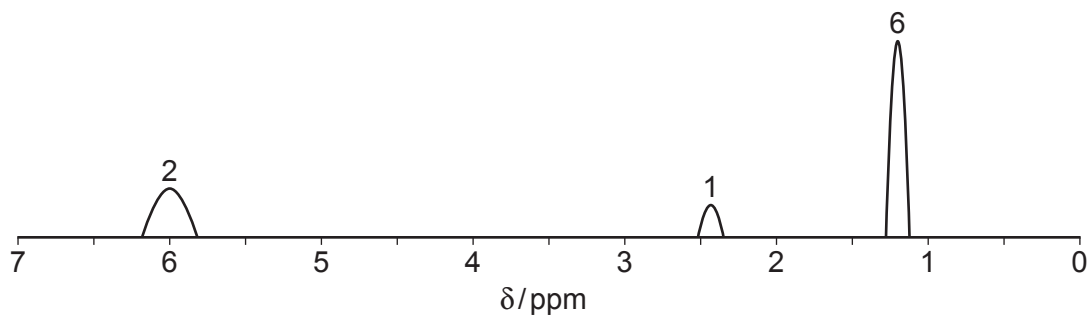
- (iii) Stage 2 is an oxidation reaction.

Using [O] to represent the formula of the oxidising agent, complete the equation below. [2]



- (f) The low resolution ^1H NMR spectrum of an aliphatic amide, $\text{R}-\text{C}(=\text{O})\text{NH}_2$ is shown below.

The numbers indicate the relative peak areas for the protons.



The signal at 6 ppm is given by the $-\text{NH}_2$ protons.

Use the spectrum and the **Data Booklet** to deduce a structure for this amide. Give your reasoning. [3]

.....

.....

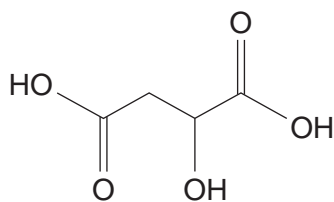
.....

.....

.....

Structure

10. (a) The acid present in apples is almost entirely malic acid (2-hydroxybutanedioic acid), M_r 134.



The amount of malic acid in apple juice was found using the following method.

- 6.80g of apple juice was placed in a flask containing 50.0 cm³ of water and the mixture stirred.
- The diluted apple juice was titrated with aqueous sodium hydroxide of concentration 0.120 mol dm⁻³ until the acid was just neutralised.
- The volume of aqueous sodium hydroxide needed was 5.60 cm³.

- (i) Calculate the percentage by mass of malic acid in the apple juice.

You should assume that both carboxylic acid groups in malic acid react in this titration. [3]

Percentage = %

- (ii) The experiment was repeated using 6.80g of apple juice which was added to 100.0 cm³ of water before mixing.

Explain why this change to the method would not give a different result for the percentage of malic acid present. [1]

.....

.....

- (iii) The amount of malic acid present in apple juice is generally less than 1 %.

Suggest **two** ways by which the method could be improved to give a more reliable result. Give reasons for your answers. [2]

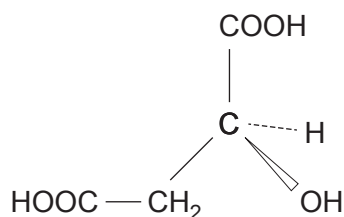
1.

.....

2.

.....

- (b) (i) Naturally-occurring malic acid is one of two enantiomers. One is drawn below.
Draw the structure of the other enantiomer. [1]



- (ii) The two enantiomers of malic acid rotate the plane of plane polarised light. The extent to which this occurs can be calculated from the formula

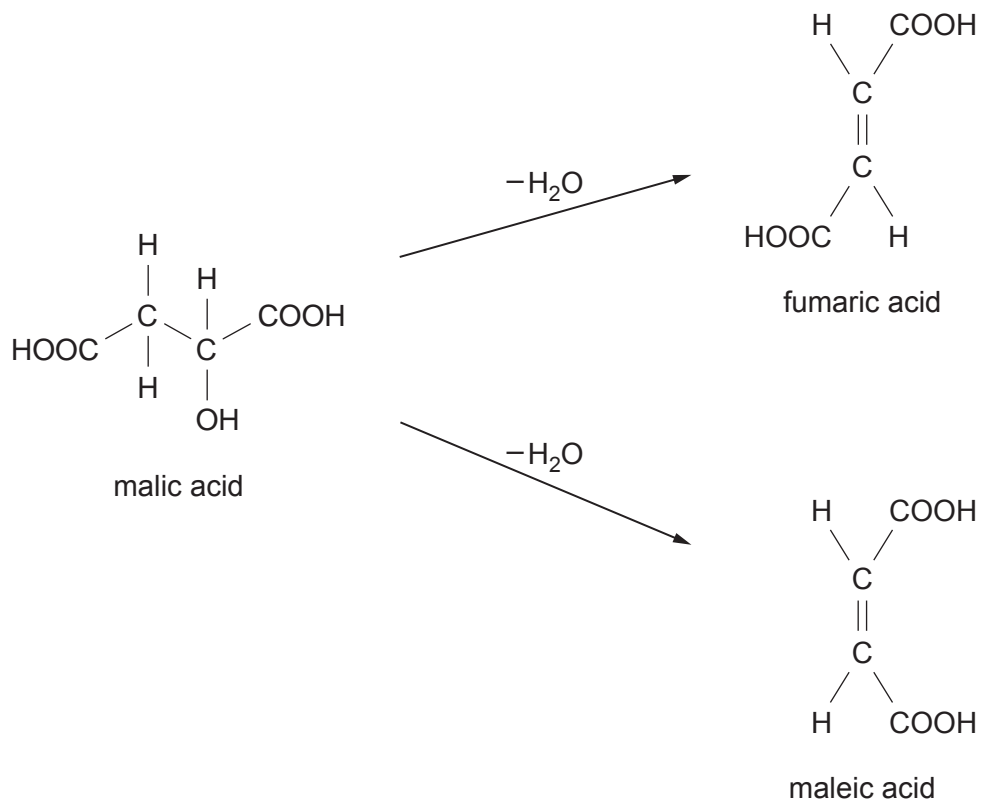
$$[\alpha_D^{20}] = \frac{100 \times \alpha}{c \times L}$$

where $[\alpha_D^{20}]$ has a value of 27° under the conditions used
 α is the rotation in degrees
 c is the concentration of the malic acid in g per 100cm^3
 L is the length of the polarimeter tube in dm

Use the formula to calculate the concentration in mol dm^{-3} of one enantiomer of malic acid when L has a length of 1 dm and α has a value of 4.5° . The relative molecular mass of malic acid is 134. [3]

Concentration = mol dm^{-3}

- (c) The action of heat on malic acid gives initially a mixture of two stereoisomers, maleic acid and fumaric acid.



- (i) Explain the term stereoisomerism. [1]

.....

.....

- (ii) All three acids show stereoisomerism.

Explain how the type of stereoisomerism shown by malic acid differs from that shown by maleic acid and fumaric acid.

You should comment on both types of stereoisomerism in your answer. [2]

.....

.....

.....

.....

.....

.....

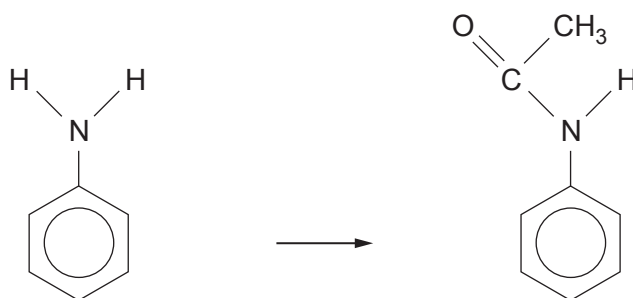
- (d) (i) Phenylamine is made in the laboratory by the reduction of nitrobenzene.

State the reagents used for this reduction.

[1]

- (ii) The direct nitration of phenylamine gives a mixture of products as well as the required nitrophenylamine.

To obtain a better yield of nitrophenylamine, phenylamine is firstly converted to N-phenylethanamide.



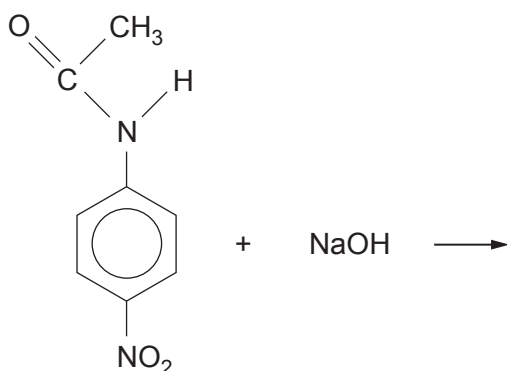
State a reagent that could be used for this reaction.

[1]

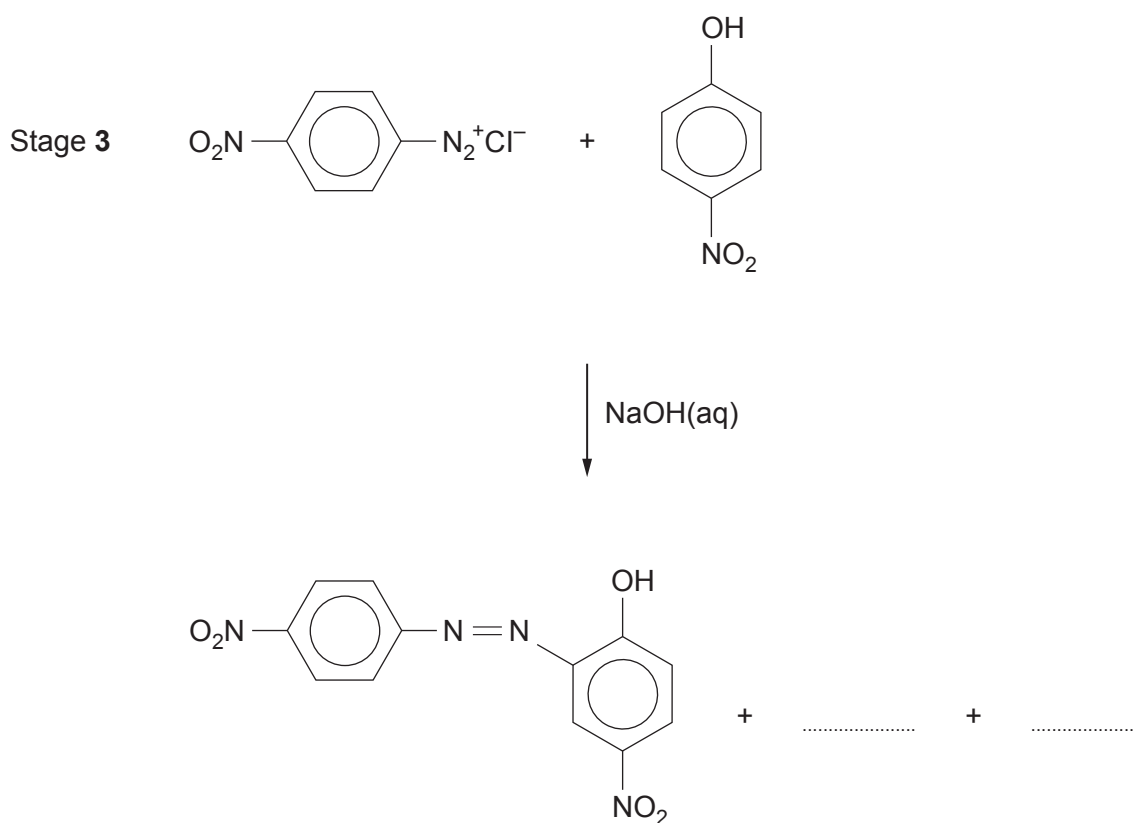

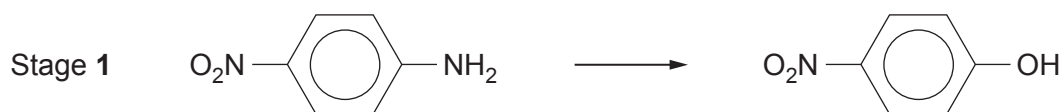
- (iii) Nitration of N-phenylethanamide gives N-(4-nitrophenyl)ethanamide which is then reacted with aqueous sodium hydroxide to give 4-nitrophenylamine.

Complete the equation for this reaction.

[1]



(e) A method for making an azo dye from 4-nitrophenylamine is shown below.



(i) State the temperature used for

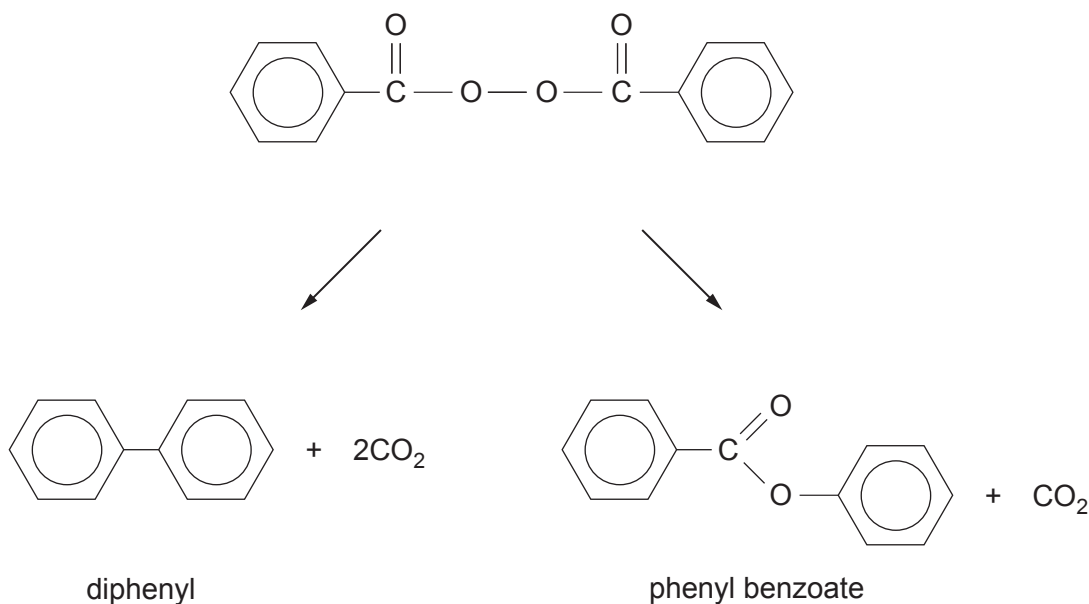
Stage 1

Stage 2

[2]

(ii) **Complete the equation** shown in stage 3 by giving the formulae of the other products formed. [1]

11. (a) Di(benzoyl) peroxide has important industrial and medicinal uses. On heating it decomposes via two different routes as shown.



In an experiment 0.0350 mol of di(benzoyl) peroxide was heated and gave a 67.5% yield of the ester phenyl benzoate.

- (i) Calculate the mass of phenyl benzoate produced. [2]

Mass = g

- (ii) Calculate the **total** volume of carbon dioxide produced measured at 298 K and 1 atm pressure, assuming that the di(benzoyl) peroxide decomposed by the two routes shown above. [4]

Volume = dm³

(iii) After heating, a white solid containing only diphenyl and phenyl benzoate remained. To obtain diphenyl, the white solid was heated with aqueous sodium hydroxide. Only the ester reacted, giving an aqueous solution containing sodium phenoxide and sodium benzoate.

I. State the type of reaction occurring. [1]

.....

II. Describe how a dry sample of diphenyl was obtained from this mixture. [1]

.....

